

First Grade  
Weekly Packet

Week of: 10/12 - 10/16

Name: \_\_\_\_\_

Monday

No School

Columbus  
Day

Tuesday

Name: \_\_\_\_\_

$$\begin{array}{r} 2 \\ + 1 \\ \hline \end{array}$$

$$\begin{array}{r} 7 \\ + 1 \\ \hline \end{array}$$

$$\begin{array}{r} 3 \\ + 1 \\ \hline \end{array}$$

$$\begin{array}{r} 4 \\ + 2 \\ \hline \end{array}$$

$$\begin{array}{r} 1 \\ + 2 \\ \hline \end{array}$$

$$\begin{array}{r} 7 \\ + 2 \\ \hline \end{array}$$

$$\begin{array}{r} 8 \\ + 2 \\ \hline \end{array}$$

$$\begin{array}{r} 8 \\ + 2 \\ \hline \end{array}$$

$$\begin{array}{r} 8 \\ + 1 \\ \hline \end{array}$$

$$\begin{array}{r} 2 \\ + 1 \\ \hline \end{array}$$

$$\begin{array}{r} 1 \\ + 2 \\ \hline \end{array}$$

$$\begin{array}{r} 8 \\ + 2 \\ \hline \end{array}$$

$$\begin{array}{r} 9 \\ + 2 \\ \hline \end{array}$$

$$\begin{array}{r} 9 \\ + 2 \\ \hline \end{array}$$

$$\begin{array}{r} 3 \\ + 1 \\ \hline \end{array}$$

$$\begin{array}{r} 8 \\ + 2 \\ \hline \end{array}$$

$$\begin{array}{r} 6 \\ + 1 \\ \hline \end{array}$$

$$\begin{array}{r} 6 \\ + 1 \\ \hline \end{array}$$

$$\begin{array}{r} 2 \\ + 1 \\ \hline \end{array}$$

$$\begin{array}{r} 7 \\ + 2 \\ \hline \end{array}$$

$$\begin{array}{r} 2 \\ + 2 \\ \hline \end{array}$$

$$\begin{array}{r} 7 \\ + 2 \\ \hline \end{array}$$

$$\begin{array}{r} 10 \\ + 1 \\ \hline \end{array}$$

$$\begin{array}{r} 8 \\ + 2 \\ \hline \end{array}$$

$$\begin{array}{r} 3 \\ + 1 \\ \hline \end{array}$$

$$\begin{array}{r} 5 \\ + 1 \\ \hline \end{array}$$

$$\begin{array}{r} 5 \\ + 2 \\ \hline \end{array}$$

$$\begin{array}{r} 3 \\ + 1 \\ \hline \end{array}$$

$$\begin{array}{r} 7 \\ + 1 \\ \hline \end{array}$$

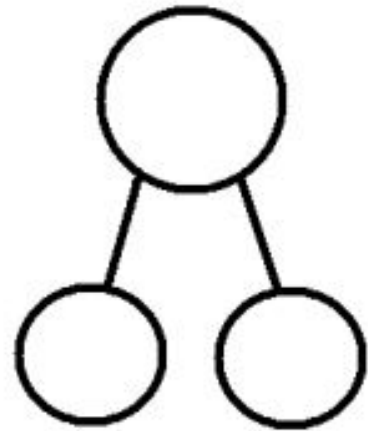
$$\begin{array}{r} 2 \\ + 1 \\ \hline \end{array}$$

Name \_\_\_\_\_

Date \_\_\_\_\_

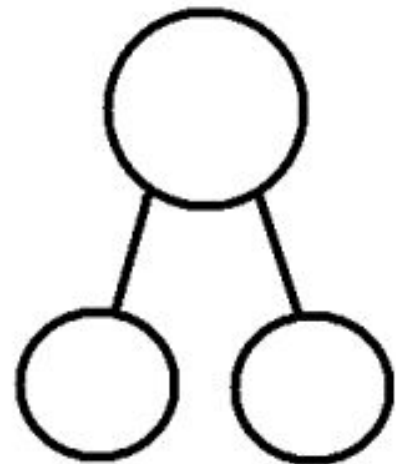
With a partner, create a story for each of the number sentences below. Draw a picture to show. Write the number bond to match the story.

1.  $6 + 2 = \square$

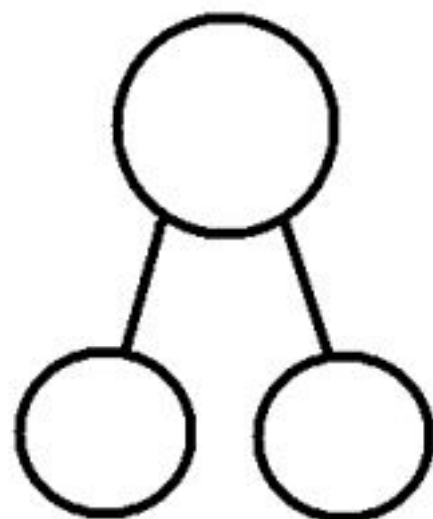


---

2.  $5 + 5 = \square$

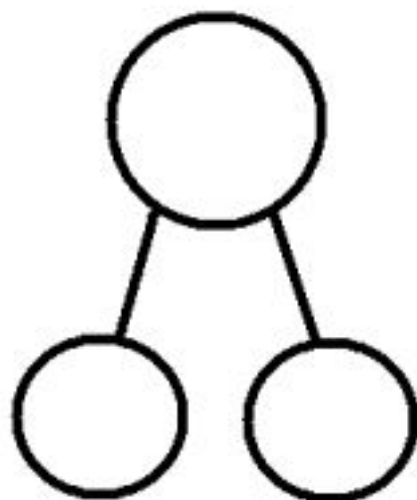


3.  $5 + \square = 7$



---

4.  $6 + \square = 10$



Name \_\_\_\_\_

Date \_\_\_\_\_

Tell a math story for each number sentence by drawing a picture.

1.  $5 + 1 = 6$



2.  $3 + ? = 8$




Name: \_\_\_\_\_

Date: \_\_\_\_\_

Book Title: \_\_\_\_\_







Name: \_\_\_\_\_


Trace

Spot is a fire expert and cute little dalmatian. He helps kids learn about safety all around the nation!

Copy

\_\_\_\_\_  
\_\_\_\_\_  
\_\_\_\_\_  
\_\_\_\_\_  
\_\_\_\_\_

Label



dalmatian

Spot



hydrant



badge

Wednesday

Name: \_\_\_\_\_

$$\begin{array}{r} 1 \\ + 5 \\ \hline \end{array}$$

$$\begin{array}{r} 2 \\ + 7 \\ \hline \end{array}$$

$$\begin{array}{r} 2 \\ + 6 \\ \hline \end{array}$$

$$\begin{array}{r} 2 \\ + 8 \\ \hline \end{array}$$

$$\begin{array}{r} 2 \\ + 8 \\ \hline \end{array}$$

$$\begin{array}{r} 2 \\ + 7 \\ \hline \end{array}$$

$$\begin{array}{r} 2 \\ + 8 \\ \hline \end{array}$$

$$\begin{array}{r} 1 \\ + 10 \\ \hline \end{array}$$

$$\begin{array}{r} 2 \\ + 2 \\ \hline \end{array}$$

$$\begin{array}{r} 1 \\ + 9 \\ \hline \end{array}$$

$$\begin{array}{r} 2 \\ + 6 \\ \hline \end{array}$$

$$\begin{array}{r} 1 \\ + 5 \\ \hline \end{array}$$

$$\begin{array}{r} 1 \\ + 5 \\ \hline \end{array}$$

$$\begin{array}{r} 2 \\ + 2 \\ \hline \end{array}$$

$$\begin{array}{r} 1 \\ + 2 \\ \hline \end{array}$$

$$\begin{array}{r} 2 \\ + 7 \\ \hline \end{array}$$

$$\begin{array}{r} 1 \\ + 3 \\ \hline \end{array}$$

$$\begin{array}{r} 2 \\ + 2 \\ \hline \end{array}$$

$$\begin{array}{r} 2 \\ + 7 \\ \hline \end{array}$$

$$\begin{array}{r} 1 \\ + 9 \\ \hline \end{array}$$

$$\begin{array}{r} 2 \\ + 9 \\ \hline \end{array}$$

$$\begin{array}{r} 2 \\ + 9 \\ \hline \end{array}$$

$$\begin{array}{r} 1 \\ + 8 \\ \hline \end{array}$$

$$\begin{array}{r} 2 \\ + 7 \\ \hline \end{array}$$

$$\begin{array}{r} 1 \\ + 9 \\ \hline \end{array}$$

$$\begin{array}{r} 1 \\ + 8 \\ \hline \end{array}$$

$$\begin{array}{r} 1 \\ + 9 \\ \hline \end{array}$$

$$\begin{array}{r} 1 \\ + 5 \\ \hline \end{array}$$

$$\begin{array}{r} 1 \\ + 6 \\ \hline \end{array}$$

$$\begin{array}{r} 1 \\ + 10 \\ \hline \end{array}$$

Name \_\_\_\_\_

Date \_\_\_\_\_

1. Count on to add.



$$\square + \square = \square$$

There are \_\_\_\_ flowers altogether.

2.



$$\square = \square + \square$$

There are \_\_\_\_ oranges in all.

3.



$$\square = \square + \square$$

There is a total of \_\_\_\_ crayons.

---

4. Use your 5-group cards to count on to add. Try to use as few dot cards as you can.

a.  $\boxed{6} \oplus \boxed{1} = \boxed{\phantom{00}}$

b.  $\boxed{6} \oplus \boxed{3} = \boxed{\phantom{00}}$

c.  $\boxed{7} \oplus \boxed{2} = \boxed{\phantom{00}}$

d.  $\boxed{\phantom{00}} = \boxed{5} \oplus \boxed{3}$



5. Use your 5-group cards, your fingers, or your known facts to count on to add.

a.  $\boxed{8} \oplus \boxed{2} = \boxed{\phantom{00}}$

b.  $\boxed{\phantom{00}} = \boxed{4} \oplus \boxed{1}$

c.  $\boxed{4} \oplus \boxed{3} = \boxed{\phantom{00}}$

d.  $\boxed{\phantom{00}} = \boxed{6} \oplus \boxed{3}$

Name \_\_\_\_\_

Date \_\_\_\_\_

1.



6



$$\boxed{6} + \boxed{2} = \boxed{\phantom{00}}$$

I counted \_\_\_\_\_ hats in all.

---

2. Count on to solve the number sentences.

a.

$$\boxed{7} + \boxed{3} = \boxed{\phantom{00}}$$

b.

$$\boxed{8} + \boxed{2} = \boxed{\phantom{00}}$$


Name: \_\_\_\_\_

Date: \_\_\_\_\_

Book Title: \_\_\_\_\_







Trace

Name: \_\_\_\_\_

Applesauce, apple cider, and even  
apple jelly. To all these yummy treats  
I say, "Get in my belly!"

Copy

Label



applesauce



apples



jelly

Thursday

Name: \_\_\_\_\_

$$\begin{array}{r} 2 \\ + 7 \\ \hline \end{array}$$

$$\begin{array}{r} 1 \\ + 5 \\ \hline \end{array}$$

$$\begin{array}{r} 1 \\ + 3 \\ \hline \end{array}$$

$$\begin{array}{r} 2 \\ + 6 \\ \hline \end{array}$$

$$\begin{array}{r} 2 \\ + 7 \\ \hline \end{array}$$

$$\begin{array}{r} 2 \\ + 3 \\ \hline \end{array}$$

$$\begin{array}{r} 1 \\ + 5 \\ \hline \end{array}$$

$$\begin{array}{r} 2 \\ + 1 \\ \hline \end{array}$$

$$\begin{array}{r} 1 \\ + 5 \\ \hline \end{array}$$

$$\begin{array}{r} 2 \\ + 2 \\ \hline \end{array}$$

$$\begin{array}{r} 1 \\ + 3 \\ \hline \end{array}$$

$$\begin{array}{r} 2 \\ + 8 \\ \hline \end{array}$$

$$\begin{array}{r} 2 \\ + 3 \\ \hline \end{array}$$

$$\begin{array}{r} 2 \\ + 3 \\ \hline \end{array}$$

$$\begin{array}{r} 2 \\ + 8 \\ \hline \end{array}$$

$$\begin{array}{r} 1 \\ + 5 \\ \hline \end{array}$$

$$\begin{array}{r} 1 \\ + 8 \\ \hline \end{array}$$

$$\begin{array}{r} 2 \\ + 1 \\ \hline \end{array}$$

$$\begin{array}{r} 1 \\ + 3 \\ \hline \end{array}$$

$$\begin{array}{r} 1 \\ + 9 \\ \hline \end{array}$$

$$\begin{array}{r} 1 \\ + 4 \\ \hline \end{array}$$

$$\begin{array}{r} 2 \\ + 6 \\ \hline \end{array}$$

$$\begin{array}{r} 2 \\ + 2 \\ \hline \end{array}$$

$$\begin{array}{r} 1 \\ + 5 \\ \hline \end{array}$$

$$\begin{array}{r} 1 \\ + 6 \\ \hline \end{array}$$

$$\begin{array}{r} 1 \\ + 5 \\ \hline \end{array}$$

$$\begin{array}{r} 1 \\ + 2 \\ \hline \end{array}$$

$$\begin{array}{r} 2 \\ + 5 \\ \hline \end{array}$$

$$\begin{array}{r} 1 \\ + 6 \\ \hline \end{array}$$

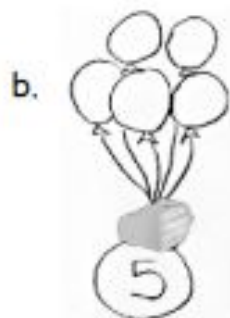
$$\begin{array}{r} 2 \\ + 6 \\ \hline \end{array}$$

1. Count on to add.



$$\square + \square = \square$$

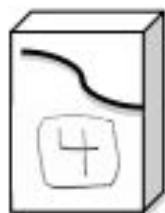
There are \_\_\_\_ crayons altogether.



$$\square + \square = \square$$

There are a total of \_\_\_\_ balloons.

c.



$$\square = \square + \square$$

In all, there are \_\_\_\_ pencils.

---

2. What shortcut or efficient strategy can you find to add?

a.  $\boxed{4} \oplus \boxed{1} = \boxed{\phantom{00}}$

h.  $\boxed{2} \oplus \boxed{5} = \boxed{\phantom{00}}$

b.  $\boxed{4} \oplus \boxed{3} = \boxed{\phantom{00}}$

i.  $\boxed{7} \oplus \boxed{2} = \boxed{\phantom{00}}$

c.  $\boxed{7} \oplus \boxed{1} = \boxed{\phantom{00}}$

j.  $\boxed{7} \oplus \boxed{3} = \boxed{\phantom{00}}$

d.  $\boxed{\phantom{00}} = \boxed{6} \oplus \boxed{2}$

k.  $\boxed{\phantom{00}} = \boxed{4} \oplus \boxed{2}$

e.  $\boxed{\phantom{00}} = \boxed{5} \oplus \boxed{3}$

l.  $\boxed{\phantom{00}} = \boxed{2} \oplus \boxed{5}$

f.  $\boxed{\phantom{00}} = \boxed{3} \oplus \boxed{6}$

m.  $\boxed{\phantom{00}} = \boxed{6} \oplus \boxed{2}$

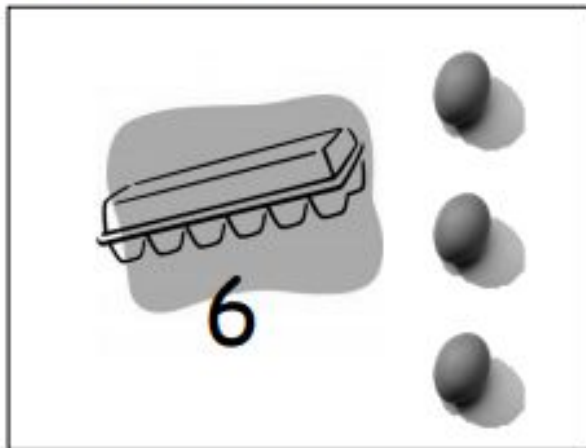
g.  $\boxed{\phantom{00}} = \boxed{3} \oplus \boxed{7}$

n.  $\boxed{\phantom{00}} = \boxed{2} \oplus \boxed{8}$

Name \_\_\_\_\_

Date \_\_\_\_\_

Use the picture to add.



Show the shortcut you used to add.



$$\square + \square = \square$$

There are \_\_\_\_\_ eggs total.


Name: \_\_\_\_\_

Date: \_\_\_\_\_

Book Title: \_\_\_\_\_







Name: \_\_\_\_\_

Trace

Jumping in a great big pile of leaves  
makes me laugh, but also sneeze!

Copy

Label

sneeze



pile of leaves



laugh

Friday

Name: \_\_\_\_\_

$$\begin{array}{r} 8 \\ + 1 \\ \hline \end{array}$$

$$\begin{array}{r} 5 \\ + 2 \\ \hline \end{array}$$

$$\begin{array}{r} 3 \\ + 1 \\ \hline \end{array}$$

$$\begin{array}{r} 10 \\ + 2 \\ \hline \end{array}$$

$$\begin{array}{r} 9 \\ + 1 \\ \hline \end{array}$$

$$\begin{array}{r} 8 \\ + 2 \\ \hline \end{array}$$

$$\begin{array}{r} 9 \\ + 2 \\ \hline \end{array}$$

$$\begin{array}{r} 10 \\ + 2 \\ \hline \end{array}$$

$$\begin{array}{r} 1 \\ + 1 \\ \hline \end{array}$$

$$\begin{array}{r} 10 \\ + 1 \\ \hline \end{array}$$

$$\begin{array}{r} 6 \\ + 2 \\ \hline \end{array}$$

$$\begin{array}{r} 9 \\ + 1 \\ \hline \end{array}$$

$$\begin{array}{r} 9 \\ + 2 \\ \hline \end{array}$$

$$\begin{array}{r} 6 \\ + 2 \\ \hline \end{array}$$

$$\begin{array}{r} 3 \\ + 1 \\ \hline \end{array}$$

$$\begin{array}{r} 3 \\ + 1 \\ \hline \end{array}$$

$$\begin{array}{r} 3 \\ + 1 \\ \hline \end{array}$$

$$\begin{array}{r} 9 \\ + 2 \\ \hline \end{array}$$

$$\begin{array}{r} 5 \\ + 2 \\ \hline \end{array}$$

$$\begin{array}{r} 3 \\ + 2 \\ \hline \end{array}$$

$$\begin{array}{r} 2 \\ + 1 \\ \hline \end{array}$$

$$\begin{array}{r} 7 \\ + 1 \\ \hline \end{array}$$

$$\begin{array}{r} 9 \\ + 1 \\ \hline \end{array}$$

$$\begin{array}{r} 8 \\ + 1 \\ \hline \end{array}$$

$$\begin{array}{r} 2 \\ + 1 \\ \hline \end{array}$$

$$\begin{array}{r} 6 \\ + 1 \\ \hline \end{array}$$

$$\begin{array}{r} 7 \\ + 2 \\ \hline \end{array}$$

$$\begin{array}{r} 5 \\ + 2 \\ \hline \end{array}$$

$$\begin{array}{r} 7 \\ + 1 \\ \hline \end{array}$$


$$\begin{array}{r} 9 \\ + 1 \\ \hline \end{array}$$

Name: \_\_\_\_\_

Date: \_\_\_\_\_

Book Title: \_\_\_\_\_





Name: \_\_\_\_\_

Trace

My lunch today was super yummy.  
I had a sandwich, a banana, and a  
cookie to fill my tummy!

Copy

\_\_\_\_\_

\_\_\_\_\_

\_\_\_\_\_

\_\_\_\_\_


\_\_\_\_\_

Label



lunch

sandwich



banana

cookie

