




Name _____

4th Grade Math Remote Learning Packet

Week 13



Dear Educator,

My signature is proof that I have reviewed my scholar's work and supported him to the best of my ability to complete all assignments.

(Parent Signature)

(Date)


Parents please note that all academic packets are also available on our website at www.brighterchoice.org under the heading "Remote Learning." All academic packets assignments are mandatory and must be completed by all scholars.

Subscribe to my YouTube Channel to catch up with previously taught lessons or refer back to Math concepts if you are to need additional assistance.



Look up by the name of the channel	→	Melissa Lewis
------------------------------------	---	---------------

or

With your cell phone open up the camera and focus on the QR code. It will take you to my YouTube channel!	→	
---	---	--


The reminders below have been modified, please take note of points 2,3 and 4.-Thank you!



- Please do not separate either packet or remove any pages from any packet.
- ALL math exit tickets will be done remotely. They will be submitted either via edlight or google form.
- ALL math homework with also be done 100% remotely. Homework with MOSTLY be submitted via google form, occasionally via edlight.
- My GOAL is for families NOT to have to turn in ANY math packet.



Day # 1



Name: _____

Week 13 Day 1 Date: _____

BCCS-B

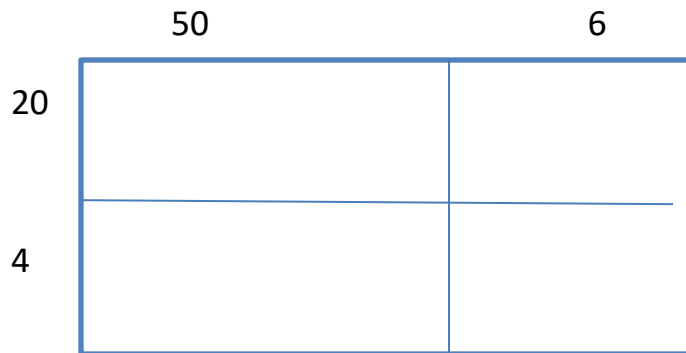
Howard Morehouse Hampton

LEQ: How can I use what I have learned about 2 digit multiplication and apply it to solving a standard algorithm?

Objective: I can use what I have learned about a standard algorithm and apply it to solving a 2 digit by 2 digit problem.

Do Now

Below is an area model that has been filled out for you. I want you to take 2 minutes silent solo to write the equation that the area model is representing.



Equation: _____

Solve:

A large empty rectangular box with a blue border, intended for the student to show their work and solve the problem.

Name: _____


Week 13 Day 1 Date: _____

BCCS-B

Howard Morehouse Hampton

$68 \times 57 =$ _____

$39 \times 24 =$ _____



Name: _____

Week 13 Day 1 Date: _____

BCCS-B

Howard Morehouse Hampton

Input

Using the tool kit on the previous page and what we just practiced using the video we are going to solve some questions together and on your own. Let's first go over the steps in the tool kit.


Step 1: Multiply the digit in the _____ place by both digits on the top.

Step 2: Add a _____ to the ones place as a place holder.

Step 3: Multiply the digit in the _____ place by both digits on the top.

Step 4: _____ the two partial products together.

Problem 1: 35×26



Name: _____

Week 13 Day 1 Date: _____

BCCS-B

Howard Morehouse Hampton


Input

Your turn!

43 x 67



Problem 2: 24 x 36



Name: _____

Week 13 Day 1 Date: _____


BCCS-B

Howard Morehouse Hampton

Input

Your turn!

$37 \times 49 =$



Application Problem

Ms. Young purchased 28 boxes of pencils for prizes. Each box contained 35 pencils. How many total pencils did Ms. Young purchase?



Name: _____

Week 13 Day 1 Date: _____

BCCS-B

Howard Morehouse Hampton

Exit Ticket-google form

Directions: Solve both of the following equations using a standard algorithm below and then submit your answers in your google classroom using the google form posted.

22×43



64×15



Name: _____

Week 13 Day 1 Date: _____

BCCS-B

Howard Morehouse Hampton

Homework-google form

a. 6 8

 x 2 3

b. 4 9

 x 3 3

c. 1 6

 x 2 5

d. 5 4

 x 7 1



Day # 2



Name: _____

Week 13 Day 2 Date: _____

BCCS-B

Howard Morehouse Hampton

LEQ: How can I use partial products to help support solving a 2 digit by 2 digit standard algorithm?

Objective: I can use my understanding of partial products to solve a 2 digit by 2 digit standard algorithm.

Do Now

Sandy's garden has 42 plants in each row. She has 2 rows of yellow corn and 20 rows of white corn.

Draw an area model (representing two partial products) to show how much yellow corn and white corn has been planted in the garden.

Today we are going to relate our area model, like the one above, to using a standard algorithm. What is the equation that we solve in the DO NOW above?

Equation: _____

Stack the problem and the partial products to find the total.

Name: _____


Week 13 Day 2 Date: _____

BCCS-B

Howard Morehouse Hampton

Input

Problem 1: $29 \times 62 =$ _____



Your Turn: $63 \times 46 =$ _____



Name: _____

Week 13 Day 2 Date: _____

BCCS-B

Howard Morehouse Hampton

Input

Problem 2: $54 \times 23 =$ _____



Your Turn: $54 \times 46 =$ _____



Name: _____

Week 13 Day 2 Date: _____

BCCS-B

Howard Morehouse Hampton

Application Problem

At the pet store there were 23 different tanks of fish. In each tank there were 56 fish. How many total fish does the pet store have?

If the store sold 406 fish in one day, how many fish do they have left?

Exit Ticket: Google form

Directions: Use a standard algorithm to solve the following equations and submit your answers on the google form posted in your math classroom.

72×43

35×53

Name: _____

Week 13 Day 2 Date: _____

BCCS-B


Howard Morehouse Hampton

Homework-google form

54 x 52



44 x 76





Day # 3



Name: _____

Week 13 Day 3 Date: _____

BCCS-B

Howard Morehouse Hampton

LEQ: How can I use an array to model the division of a 2 digit number?

Objective: I can use my knowledge of an array and tape diagram to model the division of a 2 digit number

Do Now

Tyler planted potatoes, oats, and corn. He planted 23 acres of potatoes. He planted 3 times as many acres of oats as potatoes, and he planted 4 times as many acres of corn as oats. How many acres did Tyler plant with potatoes, oats, and corn in all?

--

Definitions

Rows	
Columns	
Dividend	
Divisor	
Quotient	

Name: _____

Week 13 Day 3 Date: _____

BCCS-B

Howard Morehouse Hampton

Input

Problem 1:

There are 12 students in PE class separated into 4 equal teams. How many students are on each team?

Your Turn

There are 15 oranges at the grocery store separated equally into 3 baskets. How many oranges are there in each basket?

Problem 2:

There are 13 students in PE class separated into 4 equal teams. How many students are on each team?

Name: _____

Week 13 Day 3 Date: _____

BCCS-B

Howard Morehouse Hampton

Input

Your Turn

There are 16 oranges at the grocery store separated equally into 3 baskets. How many oranges are there in each basket?

Problem 3:

Kristy bought 13 roses. If she puts 6 roses in each vase, how many vases will she use? Will there be any roses left over?

Your Turn

Sam had 17 baseball cards that he wanted to organize into an album. He could put 4 cards on a page. How many total pages did he use? Were there any cards left over?

Sam used _____ pages in his album and there was _____ card left over.

Name: _____

Week 13 Day 3 Date: _____

BCCS-B

Howard Morehouse Hampton

Exit Ticket: Ed light

Fifty-three students are going on a field trip. The students are divided into groups of 6 students. How many groups of 6 students will there be? If the remaining students form a smaller group, and one chaperone is assigned to every group, how many total chaperones are needed?

Name: _____

Week 13 Day 3 Date: _____

BCCS-B

Howard Morehouse Hampton


Homework: Edlight

1. Linda makes booklets using 2 sheets of paper. She has 17 sheets of paper. How many of these booklets can she make? Will she have any extra paper? How many sheets?

3. Linda uses thread to sew the booklets together. She cuts 6 inches of thread for each booklet. How many booklets can she stitch with 50 inches of thread? Will she have any unused thread after stitching up the booklets? If so, how much?



Day # 4



Name: _____

Week 13 Day 4 Date: _____

BCCS-B

Howard Morehouse Hampton

LEQ: How can I use an area model to support the division of 2 digit numbers?

Objective; I can use an area model to help divide 2 digit by 1 digit divisors.


Do Now

Chandra printed 38 photos to put into her scrapbook. If she can fit 4 photos on each page, how many pages will she use for her photos?

Will there be any photos left over?

She will use _____ pages for her photos and there will be _____ left over.

Problem 1: 10 divided by 2



Name: _____


Week 13 Day 4 Date: _____

BCCS-B

Howard Morehouse Hampton


Input

Now let's try: 11 divided by 2



Your Turn: $16 \div 3$

ARRAY



Problem 2: $38 \div 4$

Array

Area Model

Name: _____

Week 13 Day 4 Date: _____

BCCS-B

Howard Morehouse Hampton

Input

Your Turn: $23 \div 4 =$ _____

Array

Area Model

CFU : Here are a couple more to try on your own:


1. $18 \div 6$

Array

Quotient = _____

Remainder = _____

Draw an area model on the grid paper provided:



Name: _____

Week 13 Day 4 Date: _____

BCCS-B

Howard Morehouse Hampton

CFU

2. $19 \div 6$

Array

Quotient = _____

Remainder = _____

Draw an area model on the grid paper provided.



Application Problem

There were 17 fruit snack in a box. Sam wanted to share them equally among 4 friends. How many fruit snacks did each friend get? How many did Sam have left over?

Name: _____

Week 13 Day 4 Date: _____

BCCS-B

Howard Morehouse Hampton

Exit ticket-ed light

Solve using an array and area model.

1. $27 \div 5$

Array

Area Model

2. $32 \div 6$

Array

Area Model



Name: _____

Week 13 Day 4 Date: _____

BCCS-B

Howard Morehouse Hampton

Homework-ed light

Show division using an array.	Show division using an area model.
<p>1. $24 \div 4$</p> <p>Quotient = _____</p> <p>Remainder = _____</p>	 <p>Can you show $24 \div 4$ with one rectangle? _____</p>
<p>2. $25 \div 4$</p> <p>Quotient = _____</p> <p>Remainder = _____</p>	 <p>Can you show $25 \div 4$ with one rectangle? _____</p> <p>Explain how you showed the remainder:</p>



Day # 5



Name: _____

Week 13 Day 5 Date: _____

BCCS-B

Howard Morehouse Hampton

LEQ: How can I prove my understanding of division?

Objective; I can prove my understanding of division by scoring an 80% or better on my quiz.

Do Now

$$44 \div 7$$

Draw an array model to show the division of the problem above.

Create an area model to also represent the division of the problem above.

Input

Multiplication Review

$$34 \times 51 = \underline{\hspace{2cm}}$$

$$27 \times 38 = \underline{\hspace{2cm}}$$

Name: _____

Week 13 Day 5 Date: _____

BCCS-B

Howard Morehouse Hampton

Input

Division Review

$27 \div 2 =$ _____

Array

Area Model

$38 \div 3 =$ _____

Array

Area Model

$31 \div 3 =$ _____

Array

Area Model


**** NO HOMEWORK AND NO EXIT TICKET TODAY****



Name _____

4th Grade Math Remote Learning Packet

Week 14



Dear Educator,

My signature is proof that I have reviewed my scholar's work and supported him to the best of my ability to complete all assignments.

(Parent Signature)

(Date)


Parents please note that all academic packets are also available on our website at www.brighterchoice.org under the heading "Remote Learning." All academic packets assignments are mandatory and must be completed by all scholars.

Subscribe to my YouTube Channel to catch up with previously taught lessons or refer back to Math concepts if you are to need additional assistance.



Look up by the name of the channel	→	Melissa Lewis
------------------------------------	---	---------------

or

With your cell phone open up the camera and focus on the QR code. It will take you to my YouTube channel!	→	
---	---	--


The reminders below have been modified, please take note of points 2,3 and 4.-Thank you!



- Please do not separate either packet or remove any pages from any packet.
- ALL math exit tickets will be done remotely. They will be submitted either via edlight or google form.
- ALL math homework with also be done 100% remotely. Homework with MOSTLY be submitted via google form, occasionally via edlight.
- My GOAL is for families NOT to have to turn in ANY math packet.



Day # 1



Name: _____

Week 14 Day 1 Date: _____

BCCS-B

Howard Morehouse Hampton

LEQ: How can a place value chart help model and solve a 2 digit division problem?

Objective: I can Understand and solve two-digit dividend division problems with a remainder in the ones place by using number disks.

Do Now

Division Fluency Practice:

$6 \div 2 =$ _____, $20 \div 5 =$ _____, $16 \div 4 =$ _____, $18 \div 3 =$ _____, $15 \div 2 =$ _____,
 $18 \div 5 =$ _____, $11 \div 3 =$ _____, $13 \div 4 =$ _____, and $33 \div 4 =$ _____.

Group Counting:

- Twos to 20
- Threes to 30
- Fours to 40
- Fives to 50

Input

Question from video:

47 divided by 3

Problem 1: 6 ones \div 3

$6 \div 3 =$ _____

Tens	ones

Name: _____

Week 14 Day 1 Date: _____

BCCS-B

Howard Morehouse Hampton

Input

3 tens and 6 ones divided by 3

_____ divided by 3

$36 \div 3 =$ _____

Tens	ones

Your Turn

$8 \div 2 =$ _____

Tens	ones

$18 \div 2 =$ _____

Tens	ones

Name: _____

Week 14 Day 1 Date: _____

BCCS-B

Howard Morehouse Hampton

Input

Problem 2

4 tens 5 ones \div 4

_____ \div 4 = _____

Tens	ones

Your Turn:

6 tens 8 ones \div 3

_____ \div 3 = _____

Tens	ones

Name: _____

Week 14 Day 1 Date: _____

BCCS-B

Howard Morehouse Hampton

CFU

Try a few more on your own:

$27 \div 2$

Tens	Ones

$2 \overline{) 27}$

quotient = _____

remainder = _____

Check Your Work

$38 \div 3$

Tens	Ones

$3 \overline{) 38}$

Name: _____

Week 14 Day 1 Date: _____

BCCS-B

Howard Morehouse Hampton

Application Problem

Frank bought 43 lollipops and wanted to share them equally among his 3 friends. How many lollipops will each of his friends get? Will there be any left over for Frank?

--

Exit Ticket-google form

$$5 \div 3$$

Tens	Ones

$$65 \div 3$$

Tens	Ones

Name: _____

Week 14 Day 1 Date: _____

BCCS-B

Howard Morehouse Hampton

Homework- google form

$67 \div 3$

Tens	Ones

$3 \overline{)67}$

quotient = _____

remainder = _____

$85 \div 2$

Tens	Ones

$2 \overline{)85}$

quotient = _____

remainder = _____



Day # 2



Name: _____

Week 14 Day 2 Date: _____

BCCS-B

Howard Morehouse Hampton

LEQ: How can a divide a number that requires decomposition in the tens place?

Objective: I can Represent and solve division problems requiring decomposing a remainder in the tens.

Do Now

Audrey and her sister found 9 dimes and 8 pennies. If they share the money equally, how much money will each sister get?

--

Input

Problem 1: Divide two-digit numbers by one-digit numbers using place value disks, regrouping in the tens.

$3 \text{ ones} \div 2$

Tens	Ones

Name: _____

Week 14 Day 2 Date: _____

BCCS-B

Howard Morehouse Hampton

Input

3 tens \div 2

Tens	Ones

Your Turn

4 ones \div 3

Tens	Ones

4 tens 2 ones \div 3

Tens	Ones

Problem 2

8 tens 4 ones \div 3

_____ \div 3 = _____

Tens	Ones

Name: _____

Week 14 Day 2 Date: _____

BCCS-B

Howard Morehouse Hampton

CFU

Try a few more on your own:

$75 \div 3$

Tens	Ones

$3 \overline{) 75}$

quotient = _____

remainder = _____

$92 \div 4$

Tens	Ones

$4 \overline{) 92}$

quotient = _____

remainder = _____

Name: _____

Week 14 Day 2 Date: _____

BCCS-B

Howard Morehouse Hampton

Application Problem

Greg read the same number of pages every night for 4 nights in a row. If he read a total of 52 pages, how many pages did he read each night?

Exit Ticket-google form

$5 \div 4$

Ones

$4 \overline{) 5}$

$56 \div 4$

Tens	Ones

$4 \overline{) 56}$

Name: _____

Week 14 Day 2 Date: _____

BCCS-B

Howard Morehouse Hampton

Homework-google form

$73 \div 2$

Tens	Ones

$2 \overline{) 73}$

$62 \div 4$

Tens	Ones

$4 \overline{) 62}$

$84 \div 3$

Tens	Ones

$3 \overline{) 84}$



Day # 3



Name: _____

Week 14 Day 3 Date: _____

BCCS-B

Howard Morehouse Hampton

LEQ: How can I use what I know to prove my understanding of skills that I have already been taught?

Objective: I can prove my understanding of ordering numbers and multiplying multiples of 10 by engaging in a fun holiday math activity.

Do Now

$92 \div 4$

Tens	Ones

$4 \overline{) 92}$

Check Your Work

quotient = _____

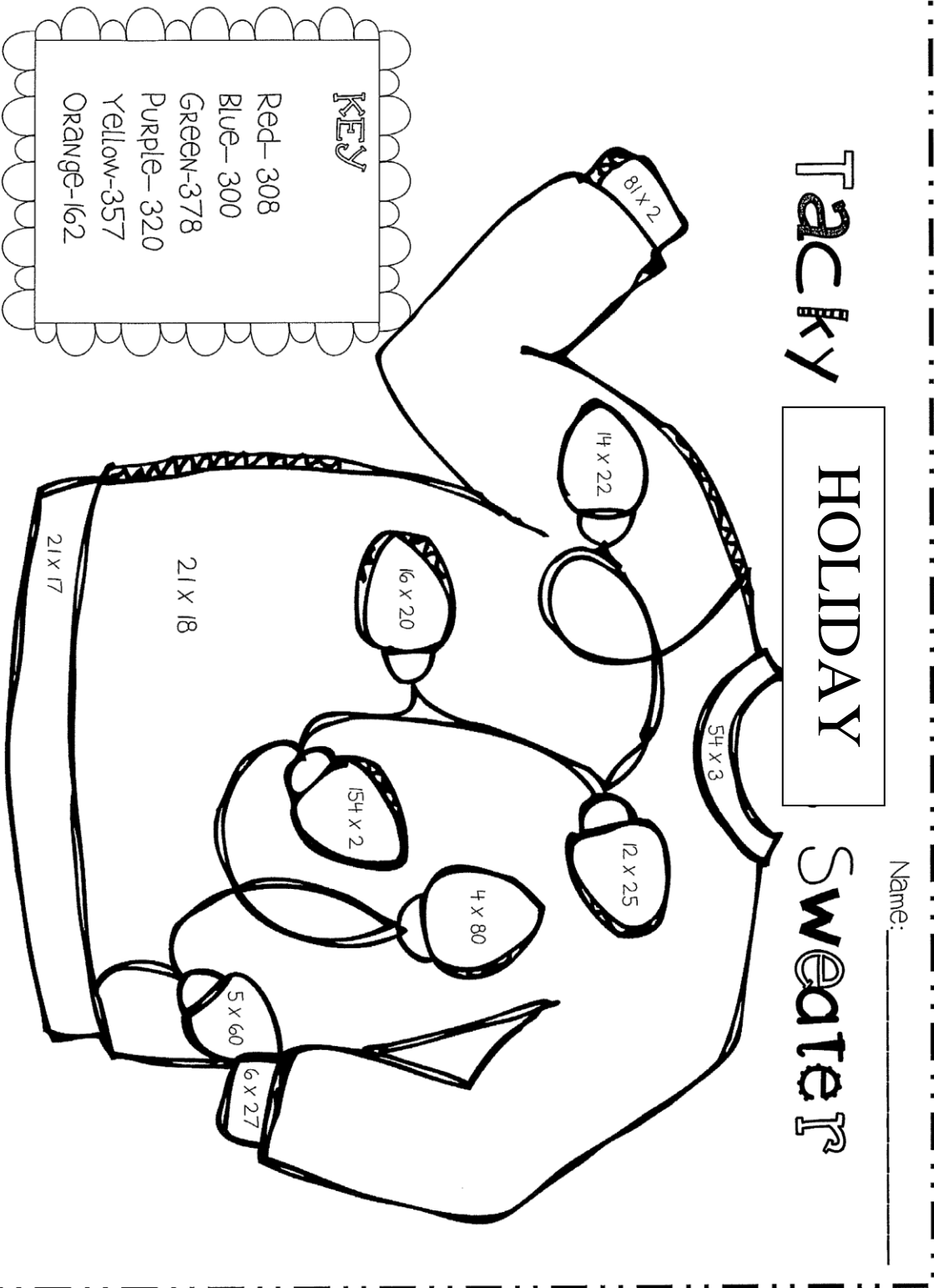
remainder = _____

Tacky

HOLIDAY

Sweater

Name: _____



KEY

- Red- 308
- Blue- 300
- Green-378
- Purple- 320
- Yellow-357
- Orange-162

Tacky


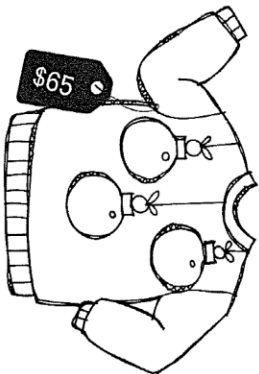
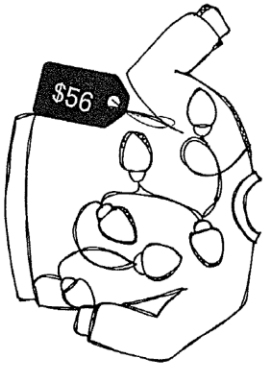
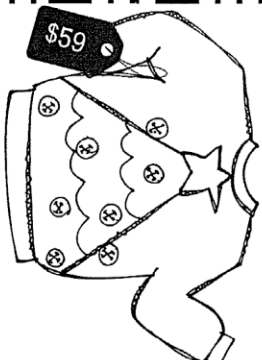
HOLIDAY

Sweater

Name: _____

Directions: First, color the sweaters. Then, cut and paste the sweaters in order from least expensive to most expensive.


--	--	--	--





Day # 4

Winter Break



Name: _____

Winter Break Week 14 Day 1 Date: _____

BCCS-B

Howard Morehouse Hampton

LEQ: How can I prove my understanding of rounding?

Objective: I can prove my understanding of roundin numbers by correctl solving the word problems and equations given to me for review.

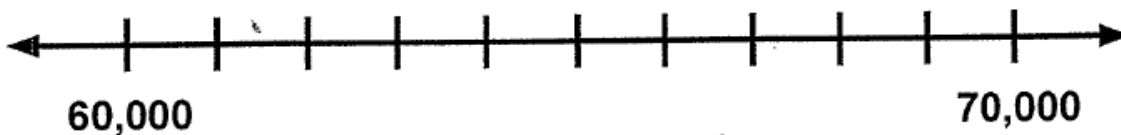
Bebe has 125 toys, 31 video games, and 28 stuffed animals. She receives 8 more toys, 3 more video games and 7 more stuffed animals on her birthday. Rounding to the nearest ten, write an equation to estimate the number of toys, video games, and stuffed animals Bebe has now.

4.NBT.A.3

Jacki has 134 pieces of candy. Jordan has 67 pieces of candy. Estimating to the nearest hundred, approximately how many pieces of candy do they have altogether?

4.NBT.A.3

Use the number line to explain why 67,400 rounded to the nearest ten-thousand is 70,000.




4.NBT.A.3



Day # 5

Winter Break



Name: _____

Winter Break week 14 Day 2 Date: _____

BCCS-B

Howard Morehouse Hampton

LEQ: How can I prove my understanding of adding with regrouping.

Objective: I can prove my understanding of adding with regrouping by correctly solving equations that require regrouping and be able to identify when they do and do not regrouping.

$347 + 292$	$899 + 321$	$1,293 + 348$
-------------	-------------	---------------


Quintin is solving the equation $4,290 + 3,839$ using a standard algorithm. Will he need to regroup? Explain your thinking on the lines below and then solve.



Name _____

4th Grade Math Remote Learning Packet

Week 15



Dear Educator,

My signature is proof that I have reviewed my scholar's work and supported him to the best of my ability to complete all assignments.

(Parent Signature)

(Date)


Parents please note that all academic packets are also available on our website at www.brighterchoice.org under the heading "Remote Learning." All academic packets assignments are mandatory and must be completed by all scholars.

Subscribe to my YouTube Channel to catch up with previously taught lessons or refer back to Math concepts if you are to need additional assistance.



Look up by the name of the channel	→	Melissa Lewis
------------------------------------	---	---------------

or

With your cell phone open up the camera and focus on the QR code. It will take you to my YouTube channel!	→	
---	---	--

The reminders below have been modified, please take note of points 2,3 and 4.-Thank you!




- Please do not separate either packet or remove any pages from any packet.
- ALL math exit tickets will be done remotely. They will be submitted either via edlight or google form.
- ALL math homework with also be done 100% remotely. Homework with MOSTLY be submitted via google form, occasionally via edlight.
- My GOAL is for families NOT to have to turn in ANY math packet.



Day # 1

Winter Break



Justin plays 45 basketball games each season. How many basketball games will he play in 12 seasons?

- A.** 57 **B.** 540 **C.** 460 **D.** 135

4.NBT.B.5

Mariam uses 27 beads for each necklace she creates. How many beads does she need for 18 necklaces?

- A.** 45 **B.** 1,926 **C.** 243 **D.** 486

4.NBT.B.5

There are 28 students in each of the 11 fourth grade classes. Which equation could be used to find the total number of students in fourth grade?

- A.** $(30 \times 11) - 2 = \underline{\hspace{2cm}}$ **B.** $(28 \times 10) + 1 = \underline{\hspace{2cm}}$
C. $(30 \times 11) - 22 = \underline{\hspace{2cm}}$ **D.** $(28 \times 20) - 9 = \underline{\hspace{2cm}}$

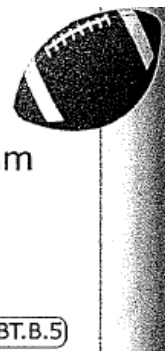
4.NBT.B.5

A football team plays 15 games in a season. In each game, they score between 18 and 35 points.

Which number could represent the total number of points the team scores in a season?

- A.** 345 **B.** 250 **C.** 545 **D.** 195


4.NBT.B.5





Day # 2

Winter Break



Roseanne's birds eat between 12 and 18 ounces of food each day. Which number represents how many ounces of food the birds could eat in two weeks?

- A.** 154 **B.** 225 **C.** 260 **D.** 100

4.NBT.B.5

There are 2,150 students at Redwood Middle School. Half of the students buy lunch. Lunch costs \$2. How much do the students at the school spend on lunch?



4.NBT.B.5

What is the value of this expression?

$$78 \times 49$$


There are 90 people going to a museum. One-third of the people are adults. The cost of an adult's ticket is \$18, and the cost of child's ticket is \$10. How much will this group of people spend on museum tickets?

4.NBT.B.5



Day # 3

Winter Break



Two hundred nineteen people are volunteering at the homeless shelter. There are 9 people on each team of volunteers. How many complete teams are there?

4.NBT.B.6

An apartment building has 892 residents. There are 4 people living in each unit. How many units are in the apartment building?



4.NBT.B.6

Timothy's baseball team raises \$12,267 selling towels and baseball bats. Each towel is sold for \$6 and each baseball bat is sold for \$9. They sell 1,482 towels. How many baseball bats does the team sell?



4.NBT.B.6


Mr. Welsh collects \$1,290 from ticket sales for the school play. Each ticket costs \$6. How would you determine the number of tickets sold?





Day # 4

Winter Break



This table shows the populations of 5 different countries.

Country	Population
Austria	8,735,453
Sierra Leone	7,557,212
Gabon	2,025,137
Bahrain	1,492,584
Grenada	107,825

What is the difference, in written form, in population between the most populated country and the least populated country?

4.NBT.A.2

The population of El Salvador is 6,377,853. What is this number expressed in written form?

4.NBT.A.2

Solve each of the following using a standard algorithm:


23×14

67×21



Day # 5

Winter Break



Solve the following using two partial products.

$$\begin{array}{r} 52 \\ \times 34 \\ \hline \\ \hline \end{array} \quad \begin{array}{r} \text{---} \times \text{---} \\ \text{---} \times \text{---} \end{array}$$

Solve using the multiplication algorithm.

$$\begin{array}{r} 86 \\ \times 56 \\ \hline \\ \hline \end{array} \quad \begin{array}{r} \text{---} \times \text{---} \\ \text{---} \times \text{---} \end{array}$$

6. 54×52

7. 44×76