



Name \_\_\_\_\_

# 5<sup>th</sup> Grade Modified Math Remote Learning Packet

## Week 13



Dear Educator,

My signature is proof that I have reviewed my scholar's work and supported him to the best of my ability to complete all assignments.

\_\_\_\_\_  
(Parent Signature)


\_\_\_\_\_  
(Date)

Parents please note that all academic packets are also available on our website at [www.brighterchoice.org](http://www.brighterchoice.org) under the heading "Remote Learning." All academic packet assignments are mandatory and must be completed by all scholars.



# Day # 1

**Mod 2 Packet 27**



Name: \_\_\_\_\_ Week 13 Day 1 Date: \_\_\_\_\_

BCCS-Boys

Stanford MIT

**Do Now****Divide using DMSCB. Check your work.**

$$49.7 \div 70$$

$$28.8 \div 40$$

Model:

## Input Activity:

### Estimating Decimal Quotients

#### Problem 1:

$$39.1 \div 17 \text{ and } 3.91 \div 17$$

Steps:

Example:

1. Draw a division garage and place the dividend and divisor in the right spots.

2. Estimate the divisor to its leading digit.

3. Estimate the divided to a compatible number of the divisor.

4. Divide using DMSCB.

5. Check your work with multiplication and adding any remainders.

---

$$39.1 \div 17$$

---

$$3.91 \div 17$$

**Problem 2**

$$63.6 \div 73$$

$$6.36 \div 73$$

**Problem 3**

$$11.72 \div 42$$

### **Problem 4**

$$3.24 \div 82$$

### **Problem 5**

$$361.2 \div 61$$

**Problem Set:**

$$85.2 \div 31$$

$$27.97 \div 28$$

**Application Problem:**

Edward bikes the same route to and from school each day. After 28 school days, he bikes a total distance of 389.2 miles. Estimate how many miles he bikes in one day.

**Answer:** He bikes about \_\_\_\_\_ miles in one day

## Exit Ticket

Estimate each quotient.

$$1.64 \div 22$$


$$123.8 \div 62$$





# Day # 2

**Mod 2 Packet 28**



Name: \_\_\_\_\_ Week 13 Day 2 Date: \_\_\_\_\_

BCCS-Boys

Stanford MIT

**Do Now****Estimate each quotient.**

$$9.12 \div 40$$

$$25.75 \div 25$$

Model:

**Input Activity:**  
**Dividing Decimals**

**Problem 1**

$$90.4 \div 32$$

**Problem 2**

$$456 \div 16$$

**Problem 3**

$$83.46 \div 26$$

**Problem 4**

$$426 \div 12$$

## Problem Set

$$627 \div 25$$

$$221 \div 10$$

### Application Problem:

Mrs. Hamilton bought a bag of 3 dozen toy animals as party favors for her son's birthday party. The bag of toy animals cost \$36.72. Estimate the price of each toy animal.

**Answer:** Each toy cost about \$\_\_\_\_\_.

### Exit Ticket

**Find each quotient.**


$$451 \div 25$$

$$14.95 \div 65$$



# Day # 3

**Mod 2 Packet 29**



Name: \_\_\_\_\_ Week 13 Day 3 Date: \_\_\_\_\_

BCCS-Boys

Stanford MIT

**Do Now****Find each quotient.**

$$97.58 \div 34$$

$$55.35 \div 45$$



Model:

**Input Activity:**  
**Dividing Decimals**

**Problem 1**

$$77 \div 22$$

**Problem 2**

$$147 \div 12$$

**Problem 3**

$$486 \div 12$$

**Problem 4**

$$56 \div 16$$

**Problem 5**

$$21 \div 14$$

**Problem 6**

$$24 \div 48$$

### Problem Set:

$81 \div 54$	$54 \div 15$
--------------	--------------

### Application Problem:

Michael has 567 pennies, Jorge has 464 pennies, and Jaime has 661 pennies. If the pennies are shared equally by the 3 boys and 33 of their classmates, how much money will each classmate receive?

**Answer:** Each classmate will receive \_\_\_\_\_.

## Exit Ticket

Find each quotient.


$$280 \div 32$$

$$824 \div 25$$



# Day # 4

**Mod 2 Packet 30**



Name: \_\_\_\_\_ Week 13 Day 4 Date: \_\_\_\_\_

BCCS-Boys

Stanford MIT

**Do Now****Find each quotient.**

$$561.68 \div 28$$

$$604.8 \div 36$$

Model:

## Input Activity:

### Multi-Step Division Word Problems Using C-U- B-E-S

#### Problem 1

Ava is saving for a new computer that costs \$1,218. She has already saved half of the money. Ava earns \$14.00 per hour. How many hours must Ava work to save the rest of the money?

Answer \_\_\_\_\_



## **Problem 2**

Michael has a collection of 1,404 sports cards. He hopes to sell the collection in packs of 36 cards and make \$633.75 when all the packs are sold. If each pack is priced the same, how much should Michael charge per pack?

Answer \_\_\_\_\_

### Problem 3

Jim is building a tree house for his two daughters. He cuts several pieces of wood from a board that is 128 inches long. He cuts 5 pieces that measure 15.75 inches each and 7 pieces evenly cut from what is left. What is the length of each of the seven pieces?

Answer \_\_\_\_\_

### Problem Set:

In a science class, students water a plant with the same amount of water each day for 28 consecutive days. If the students use a total of 23.8 liters of water over the 28 days, how many liters of water did they use each day?  
How many milliliters did they use each day?

Answer \_\_\_\_\_

### Application Problem

Kenny is ordering uniforms for both the girls and boys tennis clubs. He is ordering shirts for 43 players at a total cost of \$668.22. Additionally, he is ordering visors for each of the 43 players at a total cost of \$368.51. How much will each player pay for the shirt and visor?

Answer: \_\_\_\_\_

## Exit Ticket


Olivia is making granola bars. She will use 17.9 ounces of pistachios, 12.6 ounces of almonds, and 12.5 ounces of walnuts. This amount makes 25 bars. How many ounces of nuts are in each granola bar?

Answer: \_\_\_\_\_



# Day # 5

**End of Mod 2 SPA  
Assessment Review**



Name: \_\_\_\_\_ Week 13 Day 5 Date: \_\_\_\_\_

BCCS-Boys

Stanford MIT

**Do Now**

Gary weighs 64.7 pounds. Convert Gary's weight to ounces.

Answer: \_\_\_\_\_

## Module 2 End of Module SPA Review

1. Evaluate:

$$6 \times (15 + 29)$$

$$(4 \times 6) + (43 - 40)$$

Answer: \_\_\_\_\_

Answer: \_\_\_\_\_

2. Write an expression that matches the following word form. Then solve.

six times the sum of 14 and 10

---

Solve:

Answer: \_\_\_\_\_



3. A number is given below.

**136.25**

In a different number, the 6 represents a value which is one-tenth of the value of the 6 in the number above. What value is represented by the 6 in the other number?

- A. six hundredths
- B. six ones
- C. six tenths
- D. six tens

4. What is the value of 0.156 rounded to the nearest tenth?

- A. 0.15
- B. 0.16
- C. 0.1
- D. 0.2

5. What should be calculated first? Then solve.

$$5 \times [(14 - 6) + 7]$$

A.  $5 \times 14$

B.  $14 - 6$

C.  $6 + 7$

D.  $14 + 7$

6. Mr. Moore has 225 munchkins to share with the BCCS teachers. He plans to share them equally with 15 teachers who will distribute them to their classes. How many munchkins will each teacher receive?

Answer \_\_\_\_\_ munchkins

7. Which number below has a value that is  $\frac{1}{10}$  the value of the 8 in 653,841?

A. 748,917

B. 749,817

C. 784,917

D. 797,481

8. Nina did a math problem in 19.673 seconds. What is 19.673 rounded to the nearest tenth of a second?

A. 19.7

B. 20.0

C. 19.6

D. 16.67

9. Solve by using standard algorithm, lattice method, or area model.

$$9.02 \times 85$$

10. A baby was born 23.5 inches long. During the course of one year, he will grow to be 15 times his current length. What will his length be when he is a year old?

Answer \_\_\_\_\_

11. How many centimeters is equivalent to the following meters?

$5\text{m} = \underline{\quad\quad} \text{cm}$

$8\text{m} = \underline{\quad\quad} \text{cm}$

$9\text{m} = \underline{\quad\quad} \text{cm}$

12. The table below shows the distance some players hit a baseball.

### Baseball Distances

Name	Distance
Patrick	48 inches
William	9 feet
Carlos	108 inches

Jonas hit the baseball 3 yards. Which player or players hit the baseball the same distance as Jonas?

Answer: \_\_\_\_\_

13. Divide the decimal to find the quotient.

$$45.15 \div 21$$

**Use C-U-B-E-S to solve the following word problems.**

14. An Olympic sized pool has an area of 4,284 square meters. If the width of the rectangle is 21 meters, find the length.

Answer: \_\_\_\_\_ meters

15. A construction worker carried 6.2 pounds of bricks to a build a new house each day for three week. How many ounces of bricks will he use in **three weeks**?

(1 lb = 16 oz)

(1 week = 7 days)

Answer: \_\_\_\_\_ ounces

16. Sam pays \$0.80 per matchbox car and \$1.25 per Pokemon Card.  
Write an expression that shows how much Sam will spend if he buys 15  
matchbox cars and 22 Pokemon Cards.

**Expression:** \_\_\_\_\_

**Answer:** \$ \_\_\_\_\_



Name \_\_\_\_\_

# 5<sup>th</sup> Grade Modified Math Remote Learning Packet

## Week 14



---

Dear Educator,

My signature is proof that I have reviewed my scholar's work and supported him to the best of my ability to complete all assignments.

\_\_\_\_\_  
(Parent Signature)

\_\_\_\_\_  
(Date)


Parents please note that all academic packets are also available on our website at [www.brighterchoice.org](http://www.brighterchoice.org) under the heading "Remote Learning." All academic packet assignments are mandatory and must be completed by all scholars.





# Day # 1

**End of Mod 2 SPA Assessment**



Name: \_\_\_\_\_ Week 14 Day 1 Date: \_\_\_\_\_

BCCS-Boys

Stanford MIT

**Module 2 End of Module Assessment****Directions: Make sure to show *all* your work and complete each part. Good luck! 😊****PART I: Bubble your answers to this section on your bubble sheet.**

\_\_\_\_\_ 1. Evaluate (5.OA.1)

$$5 \times (27 + 15)$$

- A. 200
- B. 210
- C. 215
- D. 220

\_\_\_\_\_ 2. A number is given below.

**123.45**

In a different number, the 3 represents a value which is one-tenth of the value of the 3 in the number above. What value is represented by the 3 in the other number? (5.NBT.1)

- A. three hundredths
- B. three ones
- C. three tenths
- D. three tens

\_\_\_\_\_ 3. Which expression can be used to represent 8 more than the product of 15 and 12? (5.OA.2)

A.  $(15 \times 12) + 8$

B.  $(15 + 12) \times 8$

C.  $15 \times 12 \times 8$

D.  $15 \times (12 + 8)$

\_\_\_\_\_ 4. Light from the sun can travel a million miles in 5.368 seconds. How many seconds is that, rounded to the nearest tenth of a second? (5.NBT.4)

A. 5.36 seconds

B. 5.34 seconds

C. 5.3 seconds

D. 5.4 seconds

\_\_\_\_\_ 5. What part of the expression should be calculated first? (5.OA.1)

$$8 + 22 \times [15 + (14 \times 2)]$$

A.  $8 + 22$

B.  $22 \times 15$

C.  $14 \times 2$

D.  $15 + 14$

\_\_\_\_\_ 6. Mr. Smith has 1,104 student photos to display around the school. He plans to put them on 48 poster boards with the same number photos on each poster board. How many student photos will Mr. Smith place on each poster board? (5.NBT.6)

- A. 20
- B. 22
- C. 23
- D. 24

\_\_\_\_\_ 7. A young snake measures 0.23 meters long. During the course of his lifetime, he will grow to be 13 times his current length. What will his length be when he is full grown? (5.NBT.7)

- A. 2.99 meters long
- B. 2.60 meters long
- C. 13.23 meters long
- D. 0.36 meters long

\_\_\_\_\_ 8. How many centimeters are equivalent to 3 meters? (5.MD.1)

- A. 9 centimeters
- B. 36 centimeters
- C. 100 centimeters
- D. 300 centimeters

\_\_\_\_\_ 9. Find the product. (5.NBT.7)

$$21.9 \times 35$$

- A. 76.65
- B. 766.5
- C. 7.665
- D. 7,665

\_\_\_\_\_ 10.  $524 \div 16$  (5.NBT.7)

- A. 32.75
- B. 3.27
- C. 32.65
- D. 30.15

\_\_\_\_\_ 11. What is the value of 15.74 rounded to the nearest whole number?

(5.NBT.4)

- A. 10
- B. 15
- C. 16
- D. 20

\_\_\_\_\_ 12. The table below shows the distance some players hit a softball. (5MD.1)

**SOFTBALL DISTANCES**

Name	Distance
Amalia	36 inches
Nick	6 feet
Lila	108 inches

Pablo hit the softball 2 yards. Which player or players hit the softball the same distance as Pablo.

- A. Amalia only
- B. Nick only
- C. Lila only
- D. Amalia and Nick

\_\_\_\_\_ 13. A rectangular playground has an area of 3,392 square meters. If the width of the rectangle is 32 meters, find the length. (5.NBT.6)

- A. 105
- B. 116
- C. 106
- D. 126

\_\_\_\_\_ 14. In which number does the 4 represent  $\frac{1}{10}$  the value represented by the 4 in 30.429? (5.NBT.1)

- A. 46.23
- B. 54.31
- C. 13.428
- D. 98.047

**PART II: Write your answers in this section in your test packet.**

15. Divide the decimal to find the quotient. (5.NBT.7)

$$14.7 \div 21$$

Answer: \_\_\_\_\_

16. Divide the decimal to find the quotient. (5.NBT.7)

$$97.28 \div 19$$

Answer: \_\_\_\_\_

**Use C-U-B-E-S to solve the following problems:**

17. James has a 1,364 page book to read for his winter reading project. He wants to read the same amount of pages each day for 62 days. How many pages will James need to read each day? (5.NBT.6)

Answer: \_\_\_\_\_pages



18. A baker uses 5.5 pounds of flour each day. How many ounces of flour will he use in **two weeks**? (5.MD.1)

(1 lb = 16 oz)

(1 week = 7 days)

Answer: \_\_\_\_\_ ounces of flour

19. Carlos pays \$0.80 per pound for sugar and \$1.25 per pound for butter. Write an expression that shows how much Carlos will spend if he buys 6 pounds of butter and 20 pounds of sugar.  
(5.OA.2)

**Expression:** \_\_\_\_\_

**Solve the expression below.** (5.OA.1)


**Answer:** \$ \_\_\_\_\_



**Brighter Choice**  
Charter School for Boys

# Day # 2

**Mod 3 Packet 1**



Name: \_\_\_\_\_ Week 14 Day 2 Date: \_\_\_\_\_

BCCS-Boys

Stanford MIT

**Do Now:**

**Find Each Quotient.**

$$846 \div 12$$

---

$$741 \div 15$$

## Key Terms:

Fraction - \_\_\_\_\_

Numerator - \_\_\_\_\_

Denominator - \_\_\_\_\_

Equivalent Fractions - \_\_\_\_\_

\_\_\_\_\_

-----



Model:

## Input Activity:

### Problem 1

Creating equivalent fractions without fraction tiles with multiplication.

<u>Steps</u>	<u>Example</u>
1. _____ any _____. (you cannot choose 0 or 1).	$\frac{2}{3} =$
2. _____ the _____ and _____ by that _____.	

### Problem 2

$$\frac{4}{5} =$$

### Problem 3

$$\frac{2}{7} =$$

**Problem 4**

$$\frac{3}{8} =$$

**Problem 5**

$$\frac{5}{4} =$$

**Creating equivalent fractions with multiplication.**

**Problem 6**

$$\frac{6}{7} = \frac{12}{\quad}$$

**Problem 7**

$$\frac{2}{9} = \frac{8}{\quad}$$

**Problem 8**

$$\frac{3}{5} = \frac{\quad}{15}$$

**Problem 9**

$$\frac{4}{12} = \frac{\quad}{48}$$

### Problem Set:

Create an equivalent fraction for the following fractions.

$$1. \frac{4}{9} =$$

$$2. \frac{3}{10} =$$

$$3. \frac{7}{4} =$$

Find the missing numerator or denominator to create equivalent fractions.

$$4. \frac{2}{3} = \frac{\quad}{9}$$

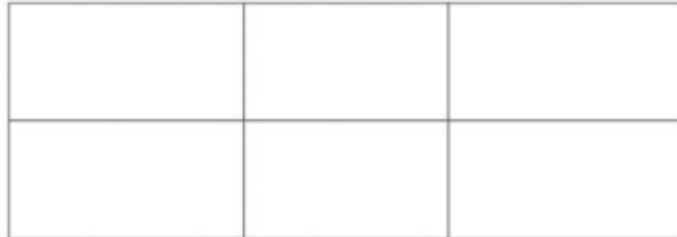
$$5. \frac{1}{7} = \frac{4}{\quad}$$

$$6. \frac{9}{10} = \frac{\quad}{20}$$



### Application Problem:

Farmer Gail planted flowers in  $\frac{1}{3}$  of her garden. Use the area model below to represent the fraction of flowers she planted in her garden.



Write an equivalent fraction to  $\frac{1}{3}$ .

$$\frac{1}{3} = \frac{\boxed{\phantom{000}}}{\boxed{\phantom{000}}}$$

### Exit Ticket

Find the number that makes an equivalent fraction.


$\frac{2}{6} = \frac{16}{\phantom{00}}$	$\frac{5}{8} = \frac{50}{\phantom{00}}$
$\frac{5}{9} = \frac{25}{\phantom{00}}$	$\frac{6}{7} = \frac{48}{\phantom{00}}$



Brighter Choice  
Charter School for Boys

# Day # 3

Mod 3 Packet 2



Name: \_\_\_\_\_ Week 14 Day 3 Date: \_\_\_\_\_

BCCS-Boys

Stanford MIT

**Do Now:****Find the number that makes an equivalent fraction.**

$$\frac{3}{5} = \frac{\quad}{10}$$

$$\frac{2}{3} = \frac{\quad}{12}$$

$$\frac{1}{4} = \frac{\quad}{8}$$

Create your own equivalent fraction to the first fraction by multiplying the numerator and denominator by the same number.

$$\frac{4}{5} = \frac{\quad}{\quad}$$

**Key Terms:**

**Mixed Number** - \_\_\_\_\_

\_\_\_\_\_

**Ex:** \_\_\_\_\_

**Improper Fraction** - \_\_\_\_\_

\_\_\_\_\_

**Ex:** \_\_\_\_\_

Model:

## Input Activity:

### Problem 1

#### Changing Mixed Numbers to Improper Fractions:

##### Steps:

1. \_\_\_\_\_ the  
\_\_\_\_\_ by the  
\_\_\_\_\_.
2. \_\_\_\_\_ your \_\_\_\_\_ by the  
\_\_\_\_\_.
- (This is the new numerator).
3. \_\_\_\_\_ your old  
\_\_\_\_\_ over.

##### Ex:

$$\begin{array}{c} + \\ \overbrace{3 \frac{4}{5}} \\ \times \end{array} = \underline{\quad}$$

M-A-D: \_\_\_\_\_ - \_\_\_\_\_ - \_\_\_\_\_

### Problem 2

$$4 \frac{6}{10}$$

**Problem 3**

$$2\frac{3}{8}$$

**Problem 4**

$$10\frac{3}{4}$$

**Problem 5**

$$7\frac{1}{5}$$

## Changing Improper Fractions to Mixed Numbers:

### Steps:

1. \_\_\_\_\_ the \_\_\_\_\_  
by the \_\_\_\_\_.
2. The \_\_\_\_\_ number in the \_\_\_\_\_  
is the whole number in the \_\_\_\_\_
3. The \_\_\_\_\_ in the quotient is the  
\_\_\_\_\_ in the fraction.
4. The \_\_\_\_\_ stays the \_\_\_\_\_

### Ex:

$$\frac{49}{5}$$

### Problem 6

$$\frac{14}{4} =$$

### Problem 7

$$\frac{34}{6} =$$

### Problem 8

$$\frac{41}{3} =$$

### Problem 9

$$\frac{74}{5} =$$



**Problem Set:**

**Change the mixed numbers to improper fractions.**

**2.**  $3\frac{4}{9} =$

**2.**  $2\frac{3}{5} =$

**3.**  $1\frac{7}{9} =$

**Change the improper fractions to mixed numbers.**

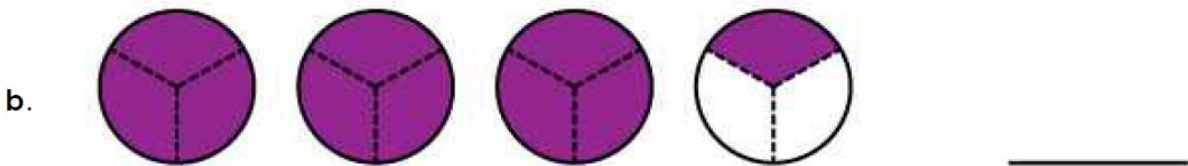
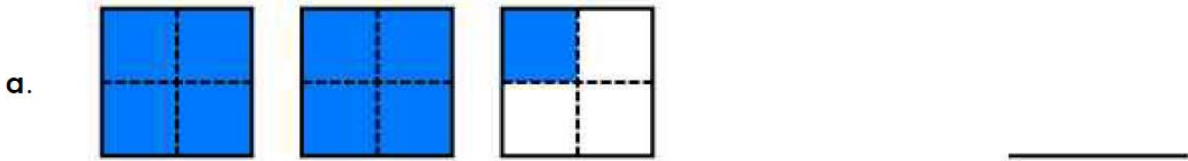
**4.**  $\frac{32}{3}$

**5.**  $\frac{51}{7}$

**6.**  $\frac{29}{5}$

### Application Problem:

Write a mixed number to show what part of each illustration is shaded.



Change each of the above mixed numbers to improper fractions.

a. \_\_\_\_\_

c. \_\_\_\_\_

b. \_\_\_\_\_

d. \_\_\_\_\_

## Exit Ticket

Change the mixed numbers to improper fractions.

$$1\frac{1}{4} =$$

$$6\frac{2}{7} =$$

$$8\frac{5}{6} =$$

Change the improper fractions to mixed numbers.

$$\frac{62}{3}$$

$$\frac{65}{7}$$


$$\frac{39}{5}$$



Brighter Choice  
Charter School for Boys

# Day # 4

Winter Break




Name: \_\_\_\_\_ Week 14 Day 4 Date: \_\_\_\_\_

BCCS-Boys

Stanford MIT

# Let it snow!

- BLIZZARD
- COAT
- COLD
- DECEMBER
- EARMUFFS
- FEBRUARY
- FIREPLACE
- FLURRIES
- FROZEN
- GLOVES
- HOT CHOCOLATE
- ICE
- ICE SKATES
- ICICLE
- JANUARY
- MITTENS
- SCARF
- SHOVEL
- SLED
- SLUSH
- SNOWBALL
- SNOWFLAKE
- SNOWMAN
- SWEATER
- WINTER




Name: \_\_\_\_\_



Brighter Choice  
Charter School for Boys

# Day # 5


Winter Break



Name: \_\_\_\_\_ Week 14 Day 5 Date: \_\_\_\_\_

BCCS-Boys

Stanford MIT



© Wool Jr. Kids Activities, LLC. All Rights Reserved. Find us @ WoolJr.com



Name \_\_\_\_\_

# 5<sup>th</sup> Grade Modified Math Remote Learning Packet

## Week 15



Dear Educator,

My signature is proof that I have reviewed my scholar's work and supported him to the best of my ability to complete all assignments.

\_\_\_\_\_  
(Parent Signature)

\_\_\_\_\_  
(Date)


Parents please note that all academic packets are also available on our website at [www.brighterchoice.org](http://www.brighterchoice.org) under the heading "Remote Learning." All academic packet assignments are mandatory and must be completed by all scholars.





**Day # 1**

**Winter Break**











Name: \_\_\_\_\_ Week 15 Day 1 Date: \_\_\_\_\_

BCCS-Boys

Stanford MIT

Round to the nearest tenth


Round each number to the nearest tenth.

 <p>7.85 _____</p>	 <p>91.13 _____</p>	 <p>43.47 _____</p>
 <p>2.93 _____</p>	 <p>22.09 _____</p>	 <p>76.36 _____</p>
 <p>5.44 _____</p>	 <p>15.59 _____</p>	



**Day # 2**

**Winter Break**



Name: \_\_\_\_\_ Week 15 Day 2 Date: \_\_\_\_\_

BCCS-Boys

Stanford MIT

## WINTER MULTIPLICATION MAZE SNOWMAN FOREST MAZE

Snowmen have taken over the forest and are blocking the roads! Some snowmen will let you past, others will block your path and attack you with snowballs! Can you find your way through?  
**YOU CAN ONLY GO PAST SNOWMEN AND SQUARES WHICH HAVE ANSWERS LARGER THAN 40.**

7x7 =

5x9 =

8x7 =

8x4 =

7x4 =

6x8 =

8x8 =

6x3 =

8x9 =

7x9 =

7x3 =

9x3 =

9x9 =

6x6 =

5x7 =

6x4 =

6x7 =

4x4 =

9x4 =


4x11 =

6x9 =



**Day # 3**

**Winter Break**



Name: \_\_\_\_\_

Week 15 Day 3 Date: \_\_\_\_\_

BCCS-Boys

Stanford MIT



Solve each equation and color using the key below:



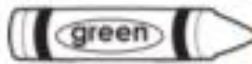
24, 84



108




60, 120




12




72



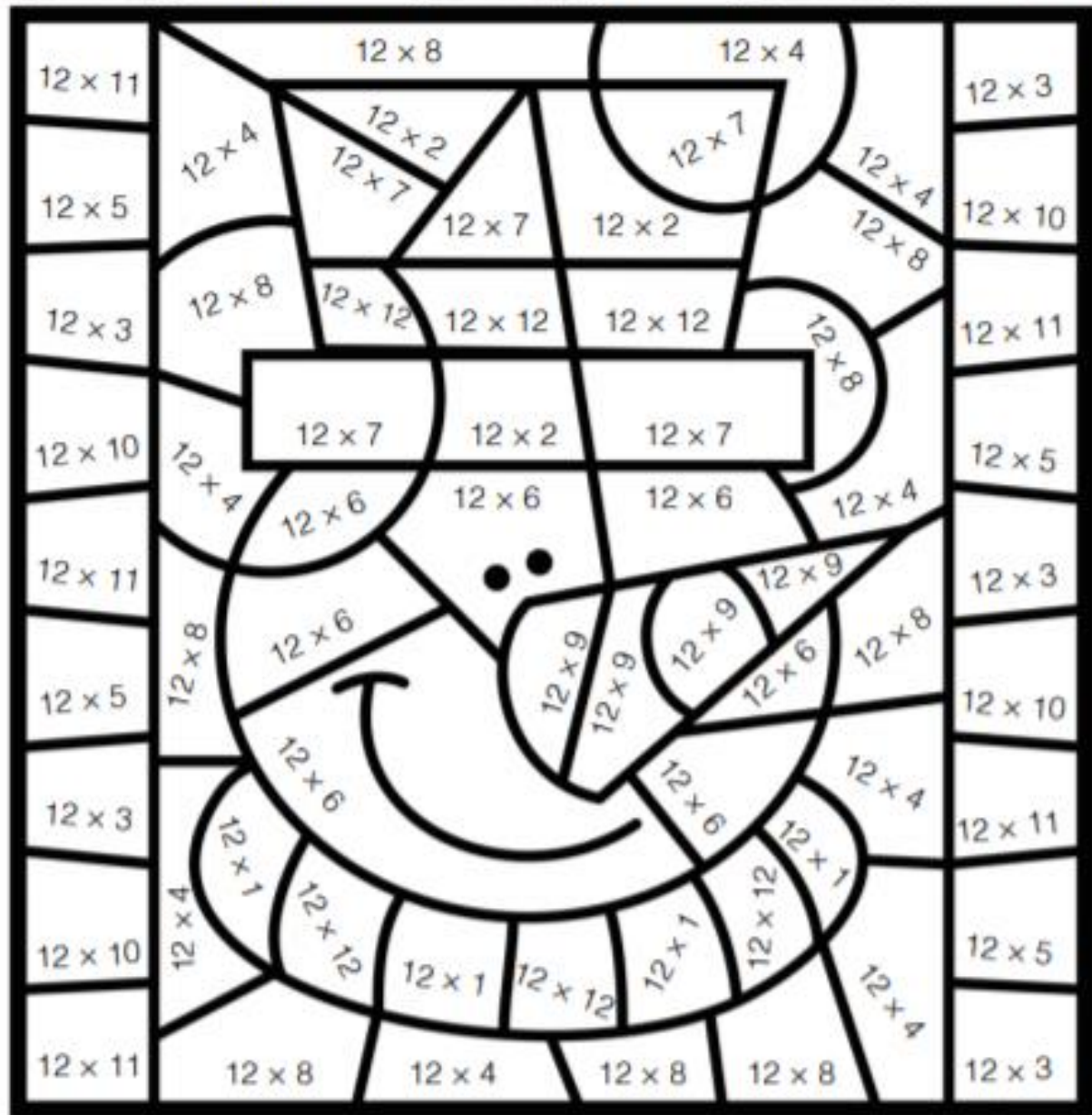
36, 132



144




48, 96





**Day # 4**

**Winter Break**



Name: \_\_\_\_\_ Week 15 Day 4 Date: \_\_\_\_\_

BCCS-Boys

Stanford MIT

Directions: Add or subtract each of the following.

# Add or Subtract

$\begin{array}{r} 6,033 \\ + 8,570 \\ \hline \end{array}$	$\begin{array}{r} 9,295 \\ - 180 \\ \hline \end{array}$	$\begin{array}{r} 6,745 \\ + 640 \\ \hline \end{array}$	$\begin{array}{r} 5,817 \\ + 183 \\ \hline \end{array}$
-----------------------------------------------------------	---------------------------------------------------------	---------------------------------------------------------	---------------------------------------------------------

$\begin{array}{r} 4,338 \\ + 1,900 \\ \hline \end{array}$	$\begin{array}{r} 818 \\ + 107 \\ \hline \end{array}$	$\begin{array}{r} 6,190 \\ - 280 \\ \hline \end{array}$	$\begin{array}{r} 2,507 \\ + 3,009 \\ \hline \end{array}$
-----------------------------------------------------------	-------------------------------------------------------	---------------------------------------------------------	-----------------------------------------------------------




$\begin{array}{r} 6,280 \\ - 5,300 \\ \hline \end{array}$	$\begin{array}{r} 4,064 \\ - 490 \\ \hline \end{array}$	$\begin{array}{r} 9,260 \\ - 306 \\ \hline \end{array}$
-----------------------------------------------------------	---------------------------------------------------------	---------------------------------------------------------





**Day # 5**

**Winter Break**




Name: \_\_\_\_\_ Week 15 Day 5 Date: \_\_\_\_\_

BCCS-Boys

Stanford MIT

# Winter Multiplication


$$\begin{array}{r} 9,321 \\ \times 7 \\ \hline \end{array}$$
$$\begin{array}{r} 2,450 \\ \times 6 \\ \hline \end{array}$$
$$\begin{array}{r} 7,943 \\ \times 6 \\ \hline \end{array}$$
$$\begin{array}{r} 8,524 \\ \times 2 \\ \hline \end{array}$$
$$\begin{array}{r} 6,349 \\ \times 8 \\ \hline \end{array}$$
$$\begin{array}{r} 5,937 \\ \times 4 \\ \hline \end{array}$$
$$\begin{array}{r} 1,580 \\ \times 5 \\ \hline \end{array}$$
$$\begin{array}{r} 3,082 \\ \times 9 \\ \hline \end{array}$$