



Name _____



1st Grade Modified ELA Remote Learning Packet

Week 25



Dear Educator,

My signature is proof that I have reviewed my scholar's work and supported him to the best of my ability to complete all assignments.


(Parent Signature)

(Date)

Parents please note that all academic packets are also available on our website at www.brighterchoice.org under the heading "Remote Learning." All academic packet assignments are mandatory and must be completed by all scholars.



Day # 1



Name: _____ Week 25 Day 1 Date: _____
BCCS-B RPI SIENA UNION

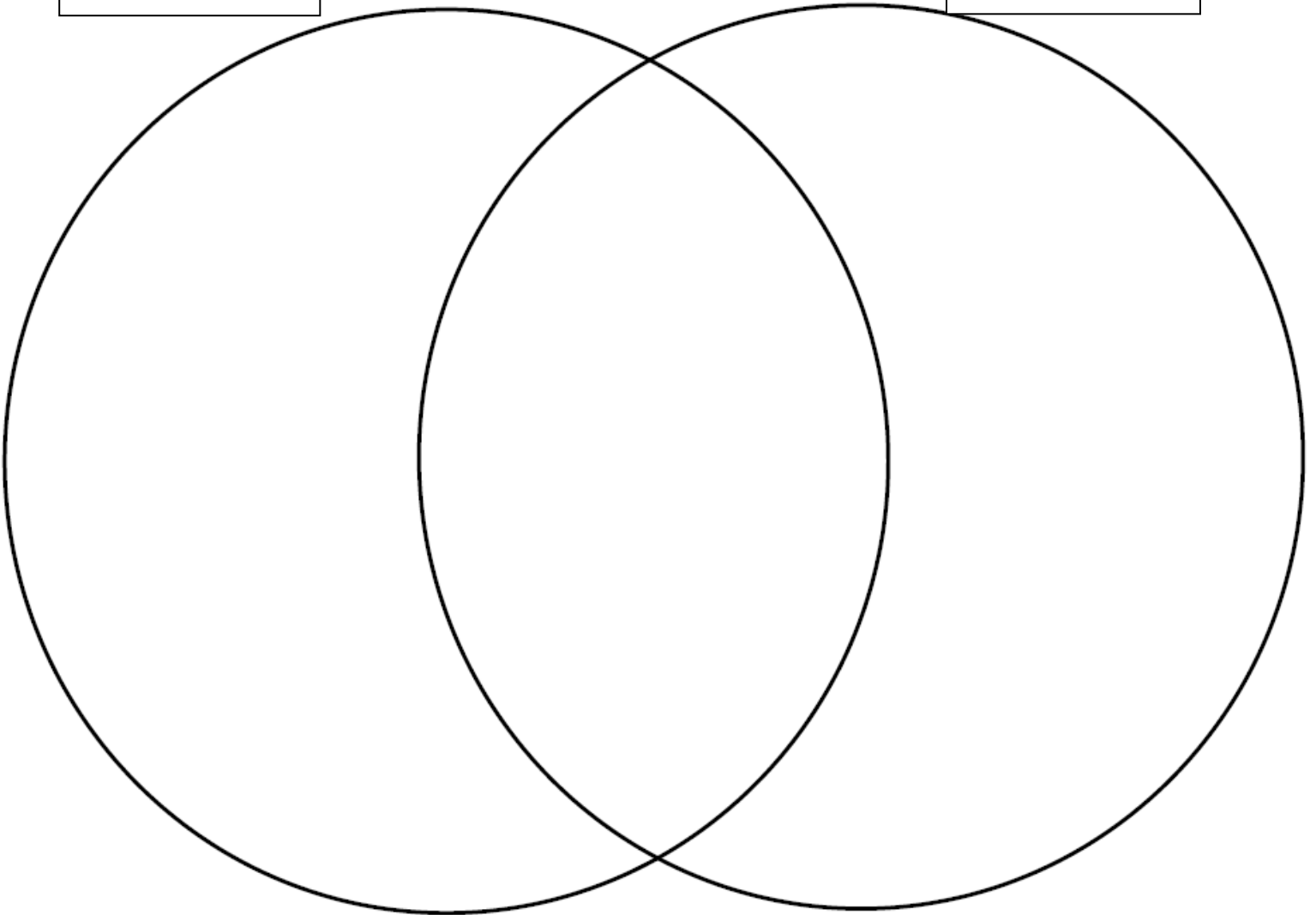
Astronomy (D6.W4.L1) Classwork

Directions: Use your knowledge of Mercury and Venus to complete the Venn Diagram.

Venn Diagram

Mercury

Venus



Name: _____ Week 25 Day 1 Date: _____
BCCS-B RPI SIENA UNION

Astronomy (D6.W4.L1) Exit Ticket

Directions: Complete the sentences below.

1. When we compare we find things that are the _____.

- a. different b. same**

2. When we contrast we find things that are _____.

- a. different b. same**




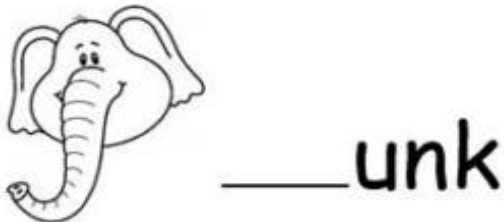
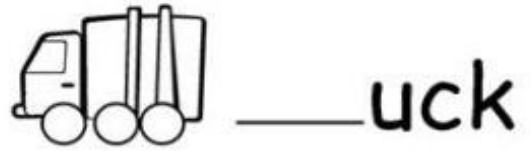
3. One similarity between Venus and Mercury is

One similarity between Venus and Mercury is

Homework


Directions: Look at the picture and pick the correct blend to complete the word.

dr fr tr br cr





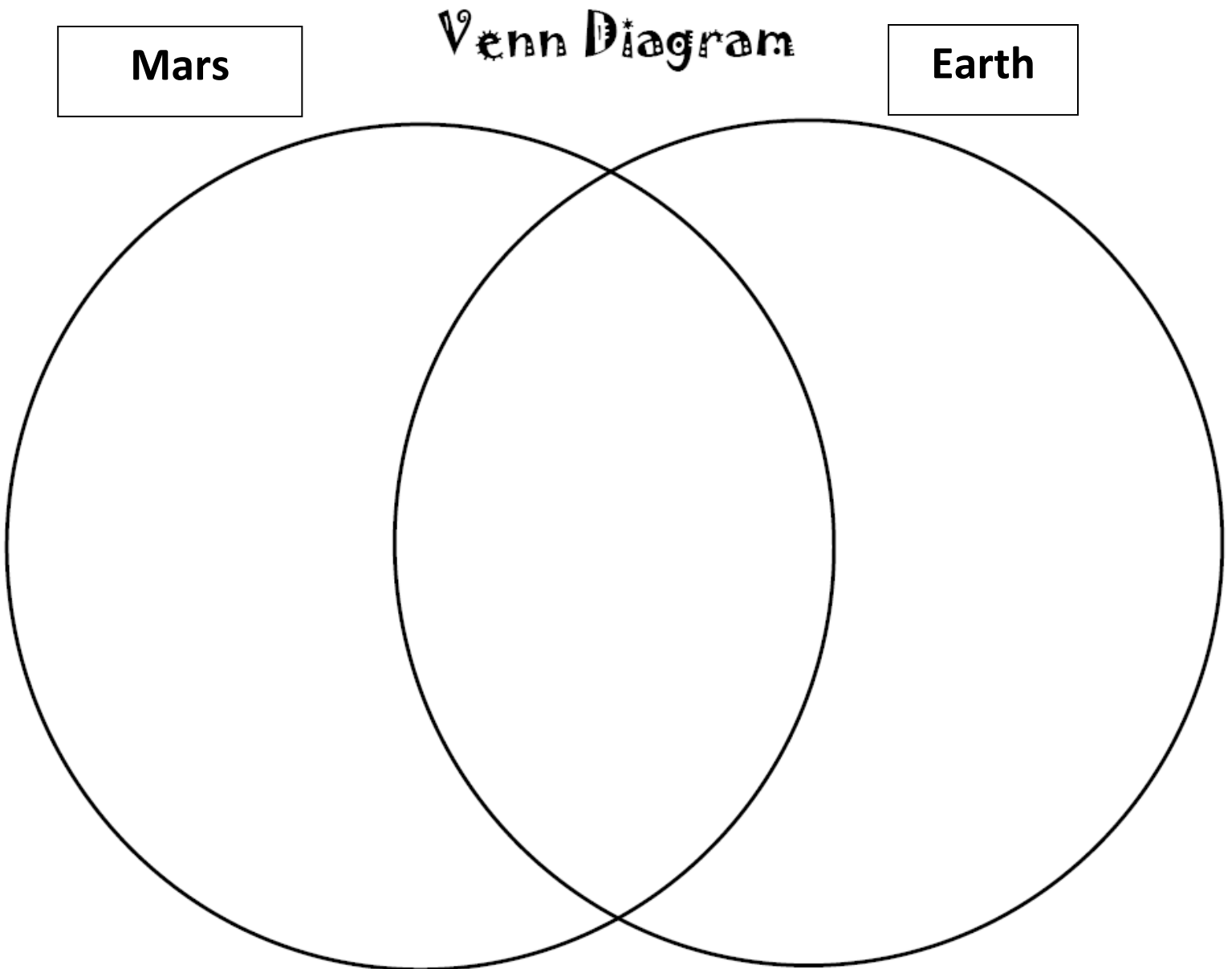
Day # 2



Name: _____ Week 25 Day 2 Date: _____
BCCS-B RPI SIENA UNION

Astronomy (D6.W4.L2) Classwork

Directions: Use your knowledge of Mars and Earth to complete the Venn Diagram.



Name: _____ Week 25 Day 2 Date: _____
BCCS-B RPI SIENA UNION

Astronomy (D6.W4.L2) Exit Ticket

Directions: Use your knowledge of Mars and Earth to identify one difference between the two planets.

One difference between Earth and Mars is

Homework

Directions: Look at the picture and circle the blend that the picture begins with.



cl
bl



sl
pl



fl
gl



gl
cl



sl
fl



cl
pl



gl
cl



bl
fl




bl
fl



gl
sl



Day # 3



Name: _____ Week 25 Day 3 Date: _____
BCCS-B RPI SIENA UNION

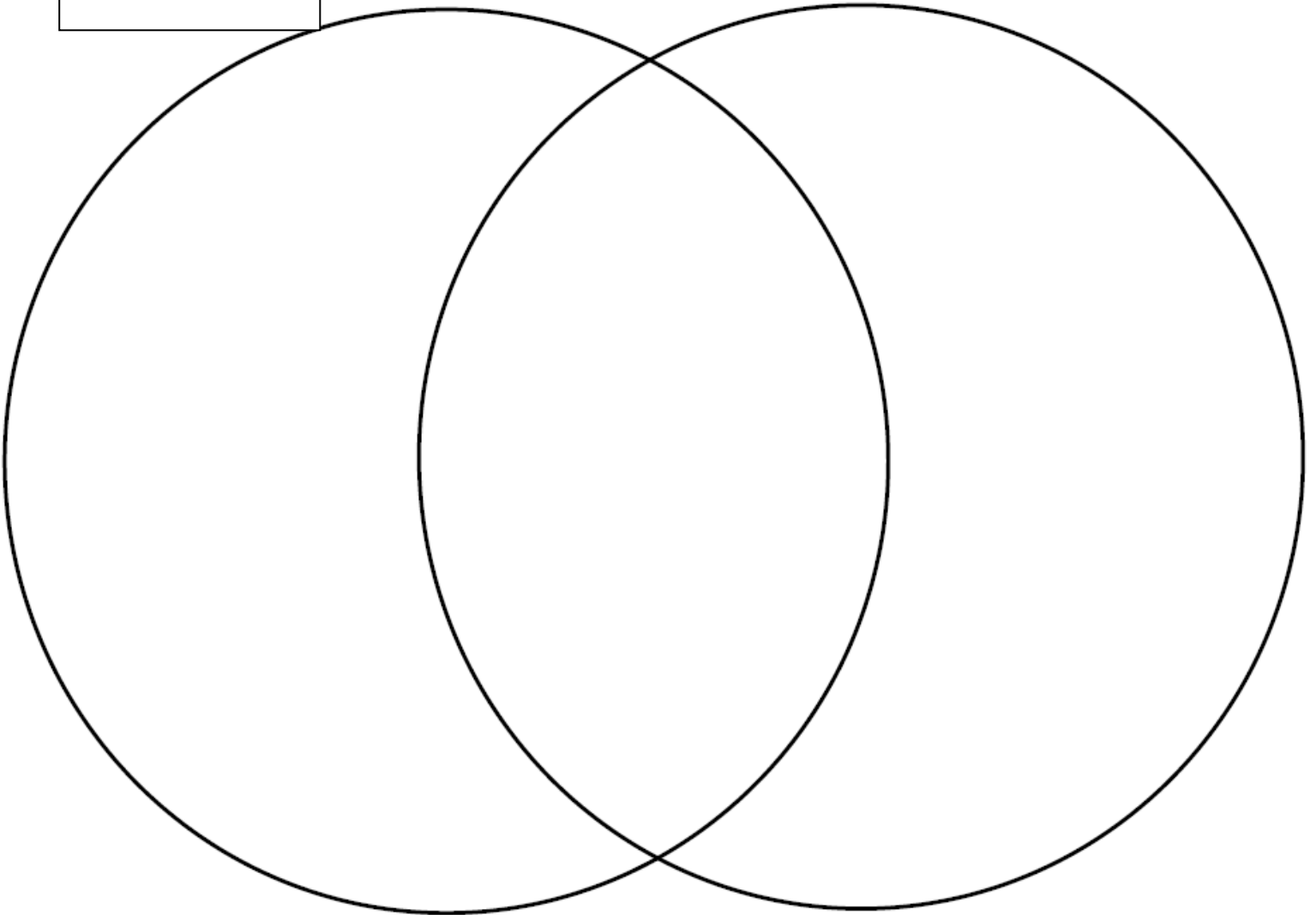
Astronomy (D6.W4.L3) Classwork

Directions: Use your knowledge of Jupiter and Saturn to complete the Venn Diagram.

Venn Diagram

Jupiter

Saturn



Name: _____ Week 25 Day 3 Date: _____
BCCS-B RPI SIENA UNION

Astronomy (D6.W4.L3) Exit Ticket

Directions: Use your knowledge of Jupiter and Saturn to identify one similarity and one difference between the two planets.

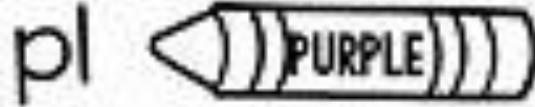
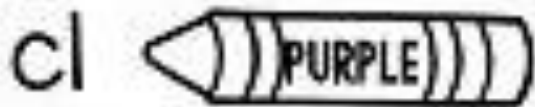
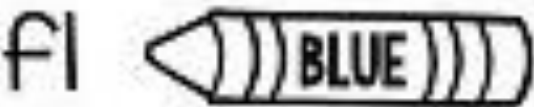
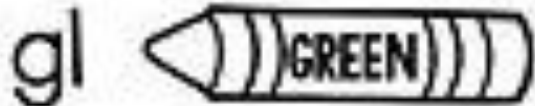
One similiarity between Jupiter and Saturn is

One difference between Jupiter and Saturn is

Name _____ Week 25 Day 3 Date _____
BCCS-B RPI Siena Union


Homework

Directions: Color each picture by it's blend using the color code below.





Day # 4



Name: _____ Week 25 Day 4 Date: _____
BCCS-B RPI SIENA UNION

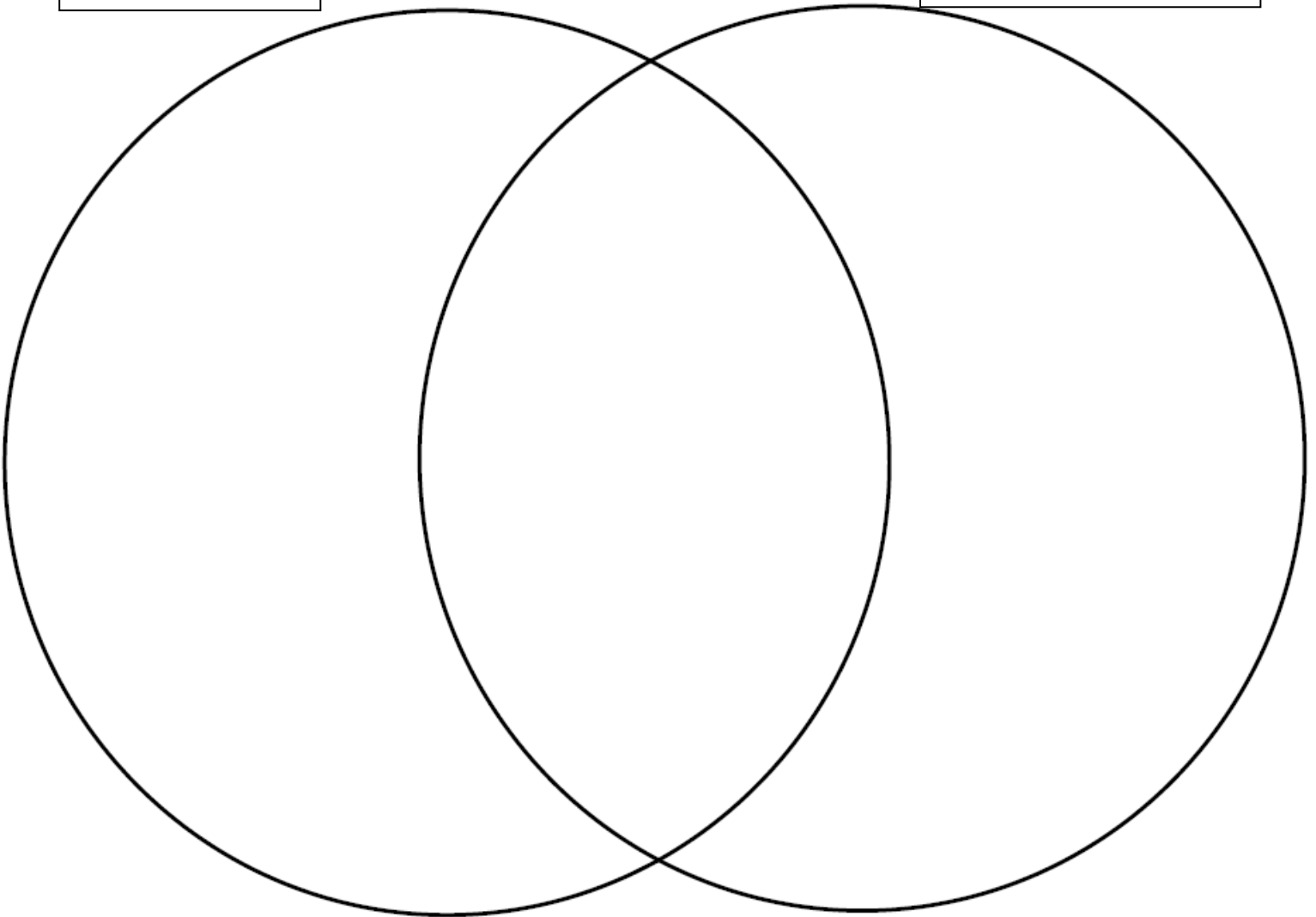
Astronomy (D6.W4.L4) Classwork

Directions: Use your knowledge of Uranus and Neptune to complete the Venn Diagram.

Venn Diagram

Uranus

Neptune



Name: _____ Week 25 Day 4 Date: _____
BCCS-B RPI SIENA UNION

Astronomy (D6.W4.L4) Exit Ticket

Directions: Read and answer the questions.

1. Compare means _____.

a. different b. same

2. Compare Uranus and Neptune.


3. Contrast means _____.

a. different b. same

4. Contrast Uranus and Neptune.




Day # 5





Name _____



1st Grade Modified ELA Remote Learning Packet

Week 26



Dear Educator,

My signature is proof that I have reviewed my scholar's work and supported him to the best of my ability to complete all assignments.


(Parent Signature)

(Date)

Parents please note that all academic packets are also available on our website at www.brighterchoice.org under the heading "Remote Learning." All academic packet assignments are mandatory and must be completed by all scholars.



Day # 1



Name: _____
BCCS-B

Week 26 Day 1 Date: _____
RPI SIENA UNION

The History of Earth (D7.W1.L1) Exit Ticket

1. What do geologists do?

a. study outer space

b. study rocks and the Earth

2. The root word geo means?

a. earth

b. comet

3. What are 3 things geologist do?

1. _____

2. _____

3. _____

4. Why is it important to learn about the Earth?

It is important to learn about Earth because _____

Homework

Directions: Read the passage and answer the questions.

Wild Turkeys

Wild turkeys are the same species as the *domestic* turkeys that live on farms. Wild turkeys can fly, unlike domestic turkeys that are too heavy to fly. Wild turkeys live in forests with open meadows in parts of North America. They eat acorns, seeds, small insects, and wild berries. There are many different breeds of turkeys. They are brown, black, gray, or white in color. A male turkey is a *tom*, and a female is a *hen*. The flap of skin over a turkey's beak is called a *snood*, and the flap under the chin is a *wattle*.




Where do wild turkeys live?

What are two things wild turkeys eat?

What is the flap of skin under a turkey's chin called?



Day # 2



Name: _____
BCCS-B

Week 26 Day 2 Date: _____
RPI SIENA UNION

The History of Earth (D7.W1.L2) Exit Ticket

1. What is the Earth's crust made of?

a. water

b. layers upon layers of rock

2. Why do scientists study the Earth's crust?

a. to better understand each period of Earth's history

b. b. to better understand outer space

3. Where is Earth's crust located?

Earth's crust is located _____


4. Draw a picture of Earth's crust.

Homework

Directions: Read the passage and answer the questions.

The Crazy Crab

The crazy crab has a credit card!
The crazy crab bought a crib.
The crazy crab bought a box
of crayons. The crazy crab bought a pizza crust.
The crazy crab bought a crown. Oh no! The crazy
crab's credit card cracked! Now he cannot buy
anything! 😊 😊 😊




① What does the crazy crab have?

② What is something that the crazy crab bought?

③ What happened to the crazy crab's card at the end?



Day # 3



Name: _____
BCCS-B

Week 26 Day 3 Date: _____
RPI SIENA UNION

The History of Earth (D7.W1.L3) Classwork

What makes a volcano erupt?

A volcano erupts because _____

What pushes through the earth's surface?

_____ pushed through Earth's surface.

When it reaches the surface it is called?


When it reached the surface it is called _____

Why is it important to study volcanoes?

It is important to study volcanoes because



Day # 4



Name: _____
BCCS-B

Week 26 Day 4 Date: _____
RPI SIENA UNION

The History of Earth (D7.W1.L4) Exit Ticket

1. The Hawaiian volcanoes erupt

a. slowly, little by little

b. explodes it's top off

2. Which picture is an example of a Hawaiian volcano?



3. Write a sentence describing how the Hawaiian volcanoes are different from Mount St. Helens.


The Hawaiian volcanoes are different from Mount St. Helens because _____

4. Draw a picture of the Hawaiian volcanoes.






Day # 5



Name: _____ Week 26 Day 5 Date: _____
BCCS-B RPI SIENA UNION

Homework

Directions: Would you rather explore the moon or the ocean? Answer the question using five complete sentences.



or



Handwriting practice lines consisting of five sets of three horizontal lines (top, dashed middle, bottom) for writing the answer.