



Name _____

1st Grade Modified Math Remote Learning Packet

Week 32



Dear Educator,

My signature is proof that I have reviewed my scholar's work and supported him to the best of my ability to complete all assignments.


(Parent Signature)

(Date)

Parents please note that all academic packets are also available on our website at www.brighterchoice.org under the heading "Remote Learning." All academic packet assignments are mandatory and must be completed by all scholars.



Day # 1



Name: _____

Week 32 Day 1 Date: _____

BCCS-B

RPI SIENA UNION

Fluency

Wait for the teacher to say **GO!** Finish as many problems as you can.

1. $5 + \underline{\quad} = 5$

16. $6 + \underline{\quad} = 7$

31. $9 + \underline{\quad} = 9$

2. $4 + \underline{\quad} = 5$

17. $1 + \underline{\quad} = 7$

32. $0 + \underline{\quad} = 9$

3. $2 + \underline{\quad} = 5$

18. $0 + \underline{\quad} = 7$

33. $1 + \underline{\quad} = 9$

4. $3 + \underline{\quad} = 5$

19. $7 + \underline{\quad} = 7$

34. $2 + \underline{\quad} = 9$

5. $0 + \underline{\quad} = 5$

20. $3 + \underline{\quad} = 7$

35. $7 + \underline{\quad} = 9$

6. $1 + \underline{\quad} = 5$

21. $4 + \underline{\quad} = 7$

36. $6 + \underline{\quad} = 9$

7. $1 + \underline{\quad} = 6$

22. $4 + \underline{\quad} = 8$

37. $5 + \underline{\quad} = 9$

8. $0 + \underline{\quad} = 6$

23. $5 + \underline{\quad} = 8$

38. $3 + \underline{\quad} = 9$

9. $6 + \underline{\quad} = 6$

24. $6 + \underline{\quad} = 8$

39. $4 + \underline{\quad} = 9$

10. $5 + \underline{\quad} = 6$

25. $2 + \underline{\quad} = 8$

40. $4 + \underline{\quad} = 10$

11. $3 + \underline{\quad} = 6$

26. $3 + \underline{\quad} = 8$

41. $5 + \underline{\quad} = 10$

12. $4 + \underline{\quad} = 6$

27. $0 + \underline{\quad} = 8$

42. $6 + \underline{\quad} = 10$

13. $2 + \underline{\quad} = 6$

28. $8 + \underline{\quad} = 8$

43. $3 + \underline{\quad} = 10$

14. $2 + \underline{\quad} = 7$

29. $7 + \underline{\quad} = 8$

44. $1 + \underline{\quad} = 10$

15. $5 + \underline{\quad} = 7$

30. $1 + \underline{\quad} = 8$

45. $2 + \underline{\quad} = 10$

Name: _____

Week 32 Day 1 Date: _____

BCCS-B

RPI SIENA UNION

Problem Set 1

Solve the problems by drawing quick tens and ones or a number bond.

1. $25 + 1 = \underline{\quad}$	2. $25 + 10 = \underline{\quad}$
3. $15 + 4 = \underline{\quad}$	4. $15 + 20 = \underline{\quad}$
5. $16 + 7 = \underline{\quad}$	6. $26 + 7 = \underline{\quad}$
7. $23 + 7 = \underline{\quad}$	8. $33 + 7 = \underline{\quad}$

Name: _____

Week 32 Day 1 Date: _____

BCCS-B

RPI SIENA UNION

Problem Set 2

Solve the problems by drawing quick tens and ones or a number bond.

1. $24 + 1 = \underline{\quad}$	2. $36 + 10 = \underline{\quad}$
3. $40 + 4 = \underline{\quad}$	4. $17 + 20 = \underline{\quad}$
5. $15 + 7 = \underline{\quad}$	6. $24 + 7 = \underline{\quad}$
7. $27 + 7 = \underline{\quad}$	8. $43 + 7 = \underline{\quad}$

Name: _____

Week 32 Day 1 Date: _____

BCCS-B

RPI SIENA UNION

Exit Ticket

Find the totals using quick ten drawings or number bonds.

1. $17 + 8 = \underline{\quad}$	2. $28 + 7 = \underline{\quad}$
3. $24 + 10 = \underline{\quad}$	4. $19 + 20 = \underline{\quad}$

Name: _____

Week 32 Day 1 Date: _____

BCCS-B

RPI SIENA UNION


Homework

Use quick ten drawings or number bonds to make true number sentences.

1. $13 + 20 = \underline{\quad}$	2. $23 + 6 = \underline{\quad}$
3. $10 + 23 = \underline{\quad}$	4. $28 + 6 = \underline{\quad}$
5. $26 + 7 = \underline{\quad}$	6. $20 + 17 = \underline{\quad}$



Day # 2



Name: _____

Week 32 Day 2 Date: _____

BCCS-B

RPI SIENA UNION

Fluency

Wait for the teacher to say **GO!** Finish as many problems as you can.

1.	0, 1, 2, __		16.	15, __, 13, 12	
2.	10, 11, 12, __		17.	__, 24, 23, 22	
3.	20, 21, 22, __		18.	6, 16, __, 36	
4.	10, 9, 8, __		19.	7, __, 27, 37	
5.	20, 19, 18, __		20.	__, 19, 29, 39	
6.	40, 39, 38, __		21.	__, 26, 16, 6	
7.	0, 10, 20, __		22.	34, __, 14, 4	
8.	2, 12, 22, __		23.	__, 20, 21, 22	
9.	5, 15, 25, __		24.	29, __, 31, 32	
10.	40, 30, 20, __		25.	5, __, 25, 35	
11.	39, 29, 19, __		26.	__, 25, 15, 5	
12.	7, 8, 9, __		27.	2, 4, __, 8	
13.	7, 8, __, 10		28.	__, 14, 16, 18	
14.	17, __, 19, 20		29.	8, __, 4, 2	
15.	15, 14, __, 12		30.	__, 18, 16, 14	

Name: _____

Week 32 Day 2 Date: _____

BCCS-B

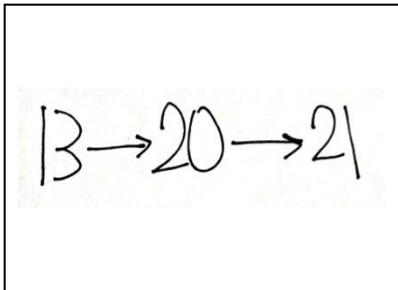
RPI SIENA UNION

Problem Set 1

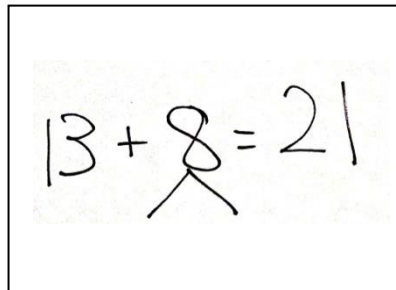
1. Each of the solutions is missing numbers or parts of the drawing. Fix each one so it is accurate and complete.

$$13 + 8 = 21$$

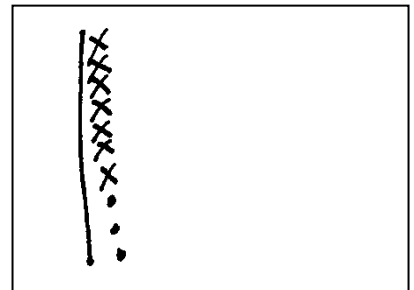
a.



b.



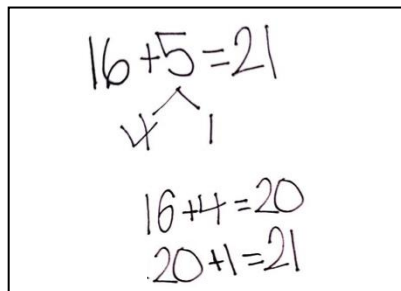
c.



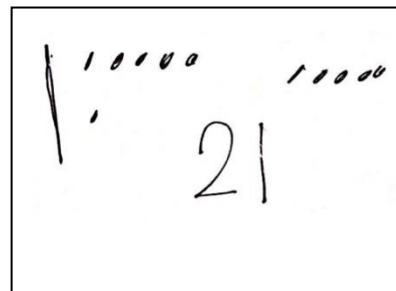
2. Circle the student work that correctly solves the addition problem.

$$16 + 5$$

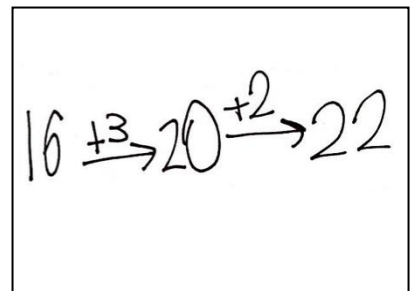
a.



b.



c.



- d. Fix the work that was incorrect by making new work in the space below with the matching number sentence.

Name: _____

Week 32 Day 2 Date: _____

BCCS-B


RPI SIENA UNION

Problem Set 2


3. Circle the student work that correctly solves the addition problem.

$$7 + 8 = 5$$

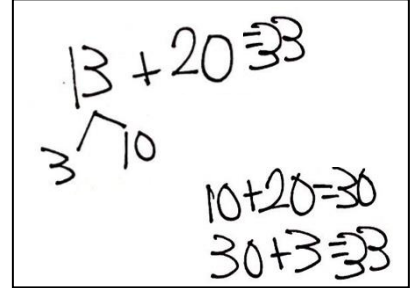
a.



b.



c.



d. Fix the work that was incorrect by making a new drawing in the space below with the matching number sentence.

4. Solve using quick tens, the arrow way, or number bonds.

$$17 + 5 = \underline{\quad}$$

A large empty rectangular box for solving the problem $17 + 5 = \underline{\quad}$.

Share with your partner. Discuss why you chose to solve the way you did.

Name: _____

Week 32 Day 2 Date: _____

BCCS-B

RPI SIENA UNION

Exit Ticket

Circle the work that correctly solves the addition problem.

$$17 + 9$$

a.

$17 + 9$
3 6
 $17 + 3 = 20$
 $20 + 6 = 26$

b.

$17 + 9$
 $20 + 5 = 25$

c.

$17 + 9$
 $17 \xrightarrow{+3} 20 \xrightarrow{+6} 26$

Fix the work that was incorrect by making a new drawing in the space below with the matching number sentence.

Name: _____

Week 32 Day 2 Date: _____

BCCS-B

RPI SIENA UNION

Homework

1. Two students both solved the addition problem below using different methods.

$$18 + 9$$

$$18 + 9 = 27$$

2 7

$$18 + 2 = 20$$
$$20 + 7 = 27$$

$$18 + 9 = 27$$

$18 \xrightarrow{+2} 20 \xrightarrow{+7} 27$

$$18 + 2 = 20$$
$$20 + 7 = 27$$

Are they both correct? Why or why not?

2. Another two students solved the same problem using quick tens.

$$18 + 9 = 29$$

20 + 9 = 29

$$18 + 9 = 27$$

20 + 7 = 27

Are they both correct? Why or why not?



Name: _____

Week 32 Day 3 Date: _____

BCCS-B

RPI SIENA UNION

Fluency

Wait for the teacher to say *GO!* Finish as many problems as you can.

1	$6 + 1 = \square$		16	$6 + 3 = \square$	
2	$16 + 1 = \square$		17	$16 + 3 = \square$	
3	$26 + 1 = \square$		18	$26 + 3 = \square$	
4	$5 + 2 = \square$		19	$4 + 5 = \square$	
5	$15 + 2 = \square$		20	$15 + 4 = \square$	
6	$25 + 2 = \square$		21	$8 + 2 = \square$	
7	$5 + 3 = \square$		22	$18 + 2 = \square$	
8	$15 + 3 = \square$		23	$28 + 2 = \square$	
9	$25 + 3 = \square$		24	$8 + 3 = \square$	
10	$4 + 4 = \square$		25	$8 + 13 = \square$	
11	$14 + 4 = \square$		26	$8 + 23 = \square$	
12	$24 + 4 = \square$		27	$8 + 5 = \square$	
13	$5 + 4 = \square$		28	$8 + 15 = \square$	
14	$15 + 4 = \square$		29	$28 + \square = 33$	

Name: _____

Week 32 Day 3 Date: _____

BCCS-B

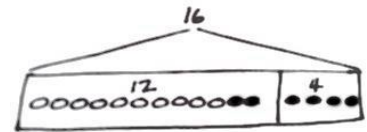
RPI SIENA UNION

Problem Set 1

Read the word problem.

Draw a tape diagram and label.

Write a number sentence and a statement that matches the story.



1. Lee saw 6 squashes and 7 pumpkins growing in his garden. How many vegetables did he see growing in his garden?

Lee saw _____ vegetables.

2. Kiana caught 6 lizards. Her brother caught 6 snakes. How many reptiles do they have altogether?

Kiana and her brother have _____ reptiles.

3. Anton's team has 12 soccer balls on the field and 3 soccer balls in the coach's bag. How many soccer balls does Anton's team have?

Anton's team has _____ soccer balls.

Name: _____

Week 32 Day 3 Date: _____

BCCS-B

RPI SIENA UNION

Problem Set 2

4. Emi had 13 friends over for dinner. 4 more friends came over for cake. How many friends came over to Emi's house?

There were _____ friends

5. 6 adults and 12 children were swimming in the lake. How many people were swimming in the lake?

There were _____ people swimming in the lake.

6. Rose has a vase with 13 flowers. She puts 7 more flowers in the vase. How many flowers are in the vase?

There are _____ flowers in the

Name: _____

Week 32 Day 3 Date: _____

BCCS-B

RPI SIENA UNION

Exit Ticket

Read the word problem.

Draw a tape diagram and label.

Write a number sentence and a statement that matches the story.

Peter counted 14 ladybugs in a garden, and Lee counted 6 ladybugs outside of the garden. How many ladybugs did they count in all?

They counted _____ ladybugs.

Name: _____

Week 32 Day 3 Date: _____

BCCS-B

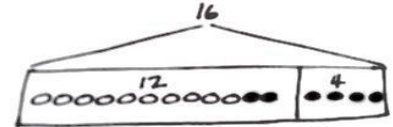
RPI SIENA UNION

Homework

Read the word problem.

Draw a tape diagram and label.

Write a number sentence and a statement that matches the story.



1. Darnel is playing with his 4 red robots. Ben joins him with 13 blue robots.

How many robots do they have altogether?


They have _____ robots.

2. Rose and Emi had a jump rope contest. Rose jumped 14 times, and Emi jumped 6 times. How many times did Rose and Emi jump?

They jumped _____ times.



Day # 4



Name: _____

Week 32 Day 4 Date: _____

BCCS-B

RPI SIENA UNION

Fluency

Wait for directions! Complete as many as possible!

1.	7, 8, 9, __		16.	15, __, 13, 12	
2.	10, 20, 30, __		17.	__, 24, 23, 22	
3.	20, 25, 30, __		18.	6, 16, __, 36	
4.	2, 4, 6, __		19.	7, __, 27, 37	
5.	20, 19, 18, __		20.	__, 19, 29, 39	
6.	40, 39, 38, __		21.	__, 26, 16, 6	
7.	0, 10, 20, __		22.	34, __, 14, 4	
8.	2, 12, 22, __		23.	__, 20, 21, 22	
9.	5, 15, 25, __		24.	29, __, 31, 32	
10.	42, 32, 22, __		25.	5, __, 25, 35	
11.	39, 29, 19, __		26.	__, 25, 15, 5	
12.	7, 8, 9, __		27.	2, 4, __, 8	
13.	9, 8, __, 6		28.	__, 14, 16, 18	
14.	17, __, 19, 20		29.	8, __, 4, 2	
15.	15, 14, __, 12		30.	__, 18, 16, 14	

Name: _____

Week 32 Day 4 Date: _____

BCCS-B

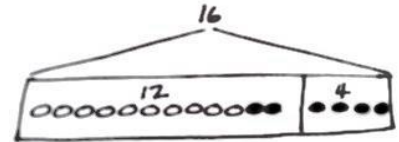
RPI SIENA UNION

Problem Set 1

Read the word problem.

Draw a tape diagram and label.

Write a number sentence and a statement that matches the story.



4. 9 dogs were playing at the park. Some more dogs came to the park. Then, there were 11 dogs. How many more dogs came to the park?

_____ more dogs came to the park.

5. 16 strawberries are in a basket for Peter and Julio. Peter eats 8 of them. How many are there for Julio to eat?

Julio has _____ strawberries to eat.

6. 13 children are on the roller coaster. 3 adults are on the roller coaster. How many people are on the roller coaster?

There are _____ people on the roller coaster.

Name: _____

Week 32 Day 4 Date: _____

BCCS-B

RPI SIENA UNION

Problem Set 2

7. 13 people are on the roller coaster now. 3 adults are on the roller coaster, and the rest are children. How many children are on the roller coaster?

There are _____ children on the roller coaster.

8. Ben has 6 baseball practices in the morning this month. If Ben also has 6 practices in the afternoon, how many baseball practices does Ben have?

Ben has _____ baseball practices.

9. Some yellow beads were on Tamra's bracelet. After she put 14 purple beads on the bracelet, there were 18 beads. How many yellow beads did Tamra's bracelet have at first?

Tamra's bracelet had _____ yellow beads.

Name: _____

Week 32 Day 4 Date: _____

BCCS-B

RPI SIENA UNION

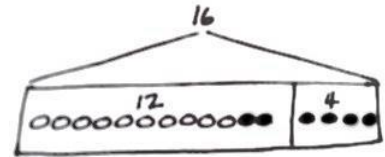
Exit Ticket

Read the word problem.

Draw a tape diagram and label.

Write a number sentence and a statement that matches the story.

There were 6 turtles in the tank. Dad bought some more turtles. Now, there are 12 turtles. How many turtles did Dad buy?



Dad bought _____ turtles.

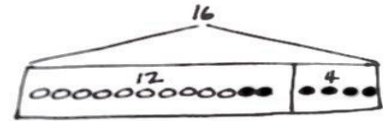
Name: _____
BCCS-B
Homework

Week 32 Day 4 Date: _____
RPI SIENA UNION

Read the word problem.

Draw a tape diagram and label.

Write a number sentence and a statement that matches the story.



1. Rose has 12 soccer practices this month. 6 practices are in the afternoon, but the rest are in the morning. How many practices will be in the morning?


Rose has _____ practices in the morning.

2. Ben caught 16 fish. He put some back in the lake. He brought home 7 fish. How many fish did he put back in the lake?

Ben put _____ fish back in the lake.



Day # 5



Name: _____

Week 32 Day 5 Date: _____

BCCS-B

RPI SIENA UNION


Homework

Fill in the correct symbol to finish the statement. $<$, $>$, or $=$


Single Digit Addition

Sheet 1

- 1) Clara bought a necklace for \$5 and a bracelet for \$7 at a clearance sale. How much money did she spend in all?



- 2) Anna bought two buckets. One bucket can hold 6 gallons of water, and the other can hold 8 gallons. How many gallons of water can both the buckets hold together?



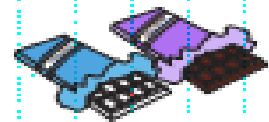
- 3) June and Mark went to an ice cream parlor. June ate 3 scoops of vanilla ice cream, and Mark ate 4 scoops of chocolate-chip ice cream. How many scoops of ice cream did they eat altogether?



- 4) Megan picked two cabbages and three cauliflowers from her kitchen garden. How many vegetables did she pick in all?



- 5) A box contains 9 bars of white chocolate and 9 bars of dark chocolate. How many bars of chocolate does the box have in total?



- 6) Six Blue Jays are perched on an Oak tree. Moments later, 5 more Blue Jays fly in. How many birds are perched on the tree altogether?



- 7) Andy and his father went fishing. Andy caught 6 bluegill fish, and his father caught 6 bass fish. How many fish did they catch in all?





Name _____



1st Grade Modified Math Remote Learning Packet

Week 33



Dear Educator,

My signature is proof that I have reviewed my scholar's work and supported him to the best of my ability to complete all assignments.


(Parent Signature)

(Date)

Parents please note that all academic packets are also available on our website at www.brighterchoice.org under the heading "Remote Learning." All academic packet assignments are mandatory and must be completed by all scholars.



Day # 1



Name: _____

Week 33 Day 1 Date: _____

BCCS-B

RPI SIENA UNION

Fluency

Wait for the teacher to say **GO!** Finish as many problems as you can.

1.	$17 - 1 = \square$		16.	$19 - 9 = \square$	
2.	$15 - 1 = \square$		17.	$18 - 9 = \square$	
3.	$19 - 1 = \square$		18.	$11 - 9 = \square$	
4.	$15 - 2 = \square$		19.	$16 - 5 = \square$	
5.	$17 - 2 = \square$		20.	$15 - 5 = \square$	
6.	$18 - 2 = \square$		21.	$14 - 5 = \square$	
7.	$18 - 3 = \square$		22.	$12 - 5 = \square$	
8.	$18 - 5 = \square$		23.	$12 - 6 = \square$	
9.	$17 - 5 = \square$		24.	$14 - \square = 11$	
10.	$19 - 5 = \square$		25.	$14 - \square = 10$	
11.	$17 - 7 = \square$		26.	$14 - \square = 9$	
12.	$18 - 7 = \square$		27.	$15 - \square = 9$	

Name: _____

Week 33 Day 1 Date: _____

BCCS-B

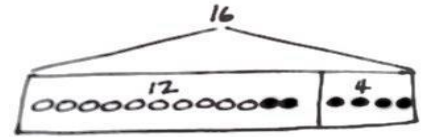
RPI SIENA UNION

Problem Set 1

Read the word problem.

Draw a tape diagram and label.

Write a number sentence and a statement that matches the story.



1. Rose drew 7 pictures, and Willie drew 11 pictures. How many pictures did they draw all together?

They drew _____ pictures.

2. Darnel walked 7 minutes to Lee's house. Then, he walked to the park. Darnel walked for a total of 18 minutes. How many minutes did it take Darnel to get to the park?

It took Darnel _____ minutes to get to the park.

3. Emi has some goldfish. Tamra has 14 betta fish. Tamra and Emi have 19 fish in all. How many goldfish does Emi have?

Emi has _____ goldfish.

Name: _____

Week 33 Day 1 Date: _____

BCCS-B

RPI SIENA UNION

Problem Set 2

4. Shanika built a block tower using 14 blocks. Then, she added 4 more blocks to the tower. How many blocks are there in the tower now?

The tower is made of _____ blocks.

5. Nikil's tower is 15 blocks tall. He added some more blocks to his tower. His tower is 18 blocks tall now. How many blocks did Nikil add?

Nikil added _____ blocks.

6. Ben and Peter caught 17 tadpoles. They gave some to Anton. They have 4 tadpoles left. How many tadpoles did they give to Anton?

They gave Anton _____ tadpoles.

Name: _____

Week 33 Day 1 Date: _____

BCCS-B

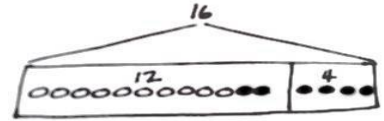
RPI SIENA UNION

Exit Ticket

Read the word problem.

Draw a tape diagram and label.

Write a number sentence and a statement that matches the story.



Shanika read some pages on Monday. On Tuesday, she read 6 pages. She read 13 pages during the 2 days. How many pages did she read on Monday?

Shanika read _____ pages on Monday.

Name: _____

BCCS-B

Homework

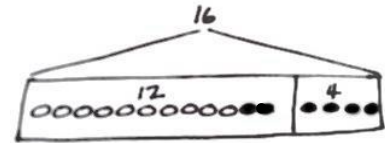
Week 33 Day 1 Date: _____

RPI SIENA UNION

Read the word problem.

Draw a tape diagram and label.

Write a number sentence and a statement that matches the story.



1. Fatima has 12 colored pencils in her bag. She has 6 regular pencils, too.
How many pencils does Fatima have?

Fatima has _____ pencils.

2. Julio swam 7 laps in the morning. In the afternoon, he swam some more laps. He swam a total of 14 laps. How many laps did he swim in the afternoon?

Julio swam _____ laps in the afternoon.

3. Peter built 18 models. He built 13 airplanes and some cars. How many car models did he build?

Peter built _____ car models.



Name: _____

Week 33 Day 2 Date: _____

BCCS-B

RPI SIENA UNION

Fluency

Wait for the teacher to say **GO!** Finish as many problems as you can.

1	$2 + 2 = \square$		16	$2 + \square = 8$	
2	$2 + \square = 4$		17	$6 + \square = 8$	
3	$4 - 2 = \square$		18	$8 - 6 = \square$	
4	$3 + 3 = \square$		19	$8 - 2 = \square$	
5	$3 + \square = 6$		20	$9 + 2 = \square$	
6	$6 - 3 = \square$		21	$9 + \square = 11$	
7	$4 + \square = 7$		22	$11 - 9 = \square$	
8	$3 + \square = 7$		23	$9 + \square = 15$	
9	$7 - 3 = \square$		24	$15 - 9 = \square$	
10	$7 - 4 = \square$		25	$8 + \square = 15$	
11	$5 + 4 = \square$		26	$15 - \square = 8$	
12	$4 + \square = 9$		27	$8 + \square = 17$	
13	$9 - 4 = \square$		28	$17 - \square = 8$	
14	$9 - 5 = \square$		29	$27 - \square = 8$	
15	$9 - \square = 4$		30	$37 - \square = 8$	

Name: _____

Week 33 Day 2 Date: _____

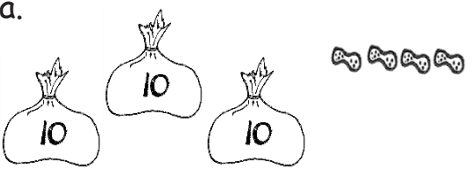
BCCS-B

RPI SIENA UNION

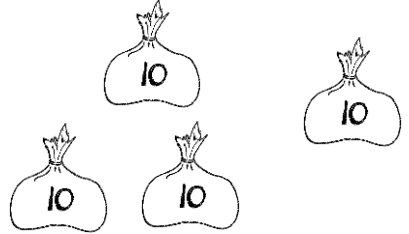
Problem Set 1

1. Fill in the blanks, and match the pairs that show the same amount.

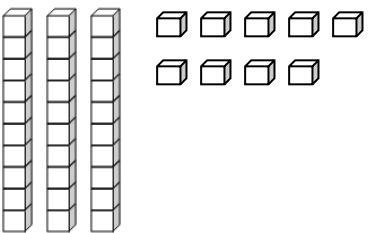
a.



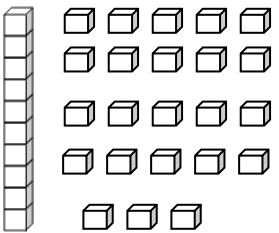
_____ tens _____ ones



_____ tens _____ ones

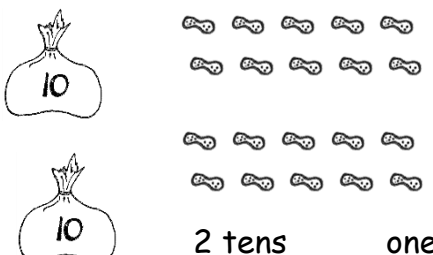


_____ tens _____ ones

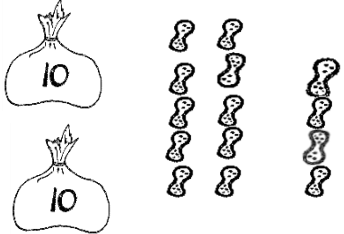


1 ten _____ ones

c.

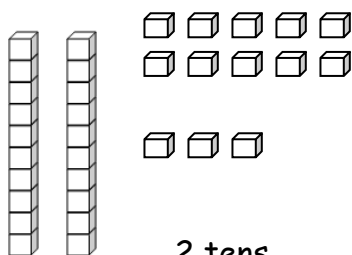


2 tens _____ ones

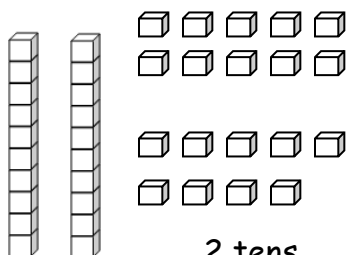


2 tens _____ ones

d.



2 tens _____ ones



2 tens _____ ones

Name: _____

Week 33 Day 2 Date: _____

BCCS-B

RPI SIENA UNION

Problem Set 2

Match the place value charts that show the same amount.

a.

tens	ones
2	2

tens	ones
3	6

b.

tens	ones
2	16

tens	ones
3	4

c.

tens	ones
2	14

tens	ones
1	12

3. Check each sentence that is true.

a. 27 is the same as 1 ten 17 ones.

b. 33 is the same as 2 tens 23

c. 37 is the same as 2 tens 17 ones.

d. 29 is the same as 1 ten 19

4. Lee says that 35 is the same as 2 tens 15 ones, and Maria says that 35 is the same as 1 ten 25 ones. Draw quick tens to show if either Lee or Maria is correct.

Name: _____

Week 33 Day 2 Date: _____

BCCS-B

RPI SIENA UNION

Exit Ticket

Match the place value charts that show the same amount.

a.

tens	ones
2	12

tens	ones
2	16

b.

tens	ones
2	8

tens	ones
1	18

c.

tens	ones
3	6

tens	ones
3	2

2. Tamra says that 24 is the same as 1 ten 14 ones, and Willie says that 24 is the same as 2 tens 14 ones. Draw quick tens to show if Tamra or Willie is correct.

Name: _____

Week 33 Day 2 Date: _____


BCCS-B

RPI SIENA UNION

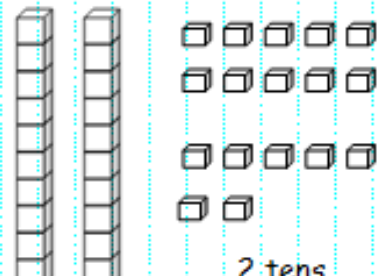
Homework

Fill in the blanks, and match the pairs that show the same amount.

a.




_____ tens _____ ones

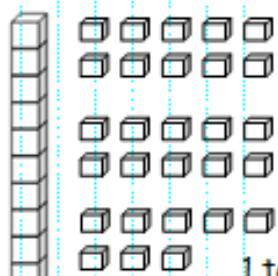


2 tens _____ ones

b.

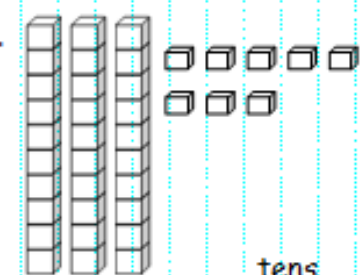


_____ tens _____ ones




1 ten _____ ones

c.

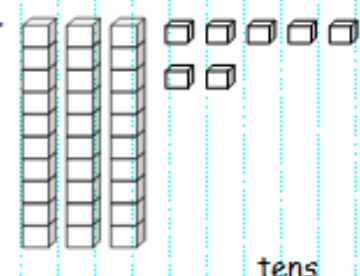


_____ tens _____ ones

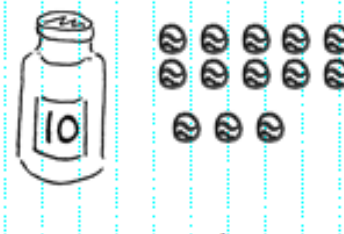


2 tens _____ ones

d.




_____ tens _____ ones



1 ten _____ ones



Day # 3



Name: _____

Week 33 Day 3 Date: _____

BCCS-B

RPI SIENA UNION

Fluency

Wait for the teacher to say *GO!* Finish as many problems as you can.

1. $6 + 0 = \underline{\quad}$	11. $7 + 1 = \underline{\quad}$	21. $5 + 3 = \underline{\quad}$
2. $0 + 6 = \underline{\quad}$	12. $\underline{\quad} = 1 + 7$	22. $\underline{\quad} = 5 + 4$
3. $5 + 1 = \underline{\quad}$	13. $3 + 3 = \underline{\quad}$	23. $6 + 4 = \underline{\quad}$
4. $1 + 5 = \underline{\quad}$	14. $3 + 4 = \underline{\quad}$	24. $4 + 6 = \underline{\quad}$
5. $6 + 1 = \underline{\quad}$	15. $\underline{\quad} = 3 + 5$	25. $\underline{\quad} = 4 + 4$
6. $1 + 6 = \underline{\quad}$	16. $6 + 3 = \underline{\quad}$	26. $3 + 4 = \underline{\quad}$
7. $6 + 2 = \underline{\quad}$	17. $7 + 3 = \underline{\quad}$	27. $5 + 5 = \underline{\quad}$
8. $5 + 2 = \underline{\quad}$	18. $\underline{\quad} = 7 + 2$	28. $\underline{\quad} = 4 + 5$
9. $2 + 5 = \underline{\quad}$	19. $2 + 7 = \underline{\quad}$	29. $3 + 7 = \underline{\quad}$
10. $2 + 4 = \underline{\quad}$	20. $2 + 8 = \underline{\quad}$	30. $\underline{\quad} = 3 + 6$

Name: _____

Week 33 Day 3 Date: _____

BCCS-B

RPI SIENA UNION

Problem Set 1

1. Solve using number bonds. Write the two number sentences that show that you added the ten first. Draw quick tens and ones if that helps you.

<p>a.</p> $14 + 13 = \underline{\quad}$ <p>$14 + 10 = 24$</p> <p>$24 + 3 = 27$</p>	<p>b.</p> $13 + 24 = \underline{\quad}$ <p>$24 + 10 = \underline{\quad}$</p> <p>$\underline{\quad} + 3 = \underline{\quad}$</p>
<p>c.</p> $16 + 13 = \underline{\quad}$ <p>$16 + 10 = \underline{\quad}$</p> <p>$\underline{\quad} + 3 = \underline{\quad}$</p>	<p>d.</p> $13 + 26 = \underline{\quad}$ <p>$26 + 10 = \underline{\quad}$</p> <p>$\underline{\quad} + \underline{\quad} = \underline{\quad}$</p>
<p>e.</p> $15 + 15 = \underline{\quad}$ <p>$\underline{\quad} + \underline{\quad} = \underline{\quad}$</p> <p>$\underline{\quad} + \underline{\quad} = \underline{\quad}$</p>	<p>f.</p> $15 + 25 = \underline{\quad}$ <p>$\underline{\quad} + \underline{\quad} = \underline{\quad}$</p> <p>$\underline{\quad} + \underline{\quad} = \underline{\quad}$</p>

Name: _____

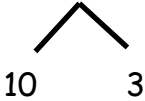
Week 33 Day 3 Date: _____

BCCS-B

RPI SIENA UNION

Problem Set 2

2. Solve using number bonds or the arrow way. Part (a) has been started for you.

a. 	b. $14 + 23 = \underline{\quad}$
c. $16 + 14 = \underline{\quad}$	d. $14 + 26 = \underline{\quad}$
e. $21 + 17 = \underline{\quad}$	f. $17 + 23 = \underline{\quad}$

Name: _____

BCCS-B

Exit Ticket

Week 33 Day 3 Date: _____

RPI SIENA UNION

Solve using number bonds. Write the two number sentences that show that you added the ten first.

1. $13 + 26 = \underline{\quad}$



$\underline{\quad} + \underline{\quad} = \underline{\quad}$

$\underline{\quad} + \underline{\quad} = \underline{\quad}$

2. $19 + 21 = \underline{\quad}$



$\underline{\quad} + \underline{\quad} = \underline{\quad}$

$\underline{\quad} + \underline{\quad} = \underline{\quad}$

Name: _____

Week 33 Day 3 Date: _____

BCCS-B

RPI SIENA UNION


Homework

1. Solve using number bonds. Write the two number sentences that show that you added the ten first. Draw quick tens and ones if that helps you.

<p>a.</p> $\begin{array}{c} 13 + 16 = \underline{\quad} \\ \diagup \quad \diagdown \\ 10 \quad 3 \end{array}$ $16 + 10 = 26$ $26 + 3 = 29$	<p>b.</p> $\begin{array}{c} 16 + 23 = \underline{\quad} \\ \diagup \quad \diagdown \\ 10 \quad 6 \end{array}$ $23 + 10 = \underline{\quad}$ $\underline{\quad} + 6 = \underline{\quad}$
<p>c.</p> $\begin{array}{c} 16 + 14 = \underline{\quad} \\ \diagup \quad \diagdown \\ 10 \quad 4 \end{array}$ $16 + 10 = \underline{\quad}$ $\underline{\quad} + 4 = \underline{\quad}$	<p>d.</p> $\begin{array}{c} 14 + 26 = \underline{\quad} \\ \diagup \quad \diagdown \\ 10 \quad 4 \end{array}$ $26 + 10 = \underline{\quad}$ $\underline{\quad} + \underline{\quad} = \underline{\quad}$
<p>e.</p> $\begin{array}{c} 17 + 13 = \underline{\quad} \\ \diagup \quad \diagdown \\ 10 \quad 3 \end{array}$ $\underline{\quad} + \underline{\quad} = \underline{\quad}$ $\underline{\quad} + \underline{\quad} = \underline{\quad}$	<p>f.</p> $\begin{array}{c} 27 + 13 = \underline{\quad} \\ \diagup \quad \diagdown \end{array}$ $\underline{\quad} + \underline{\quad} = \underline{\quad}$ $\underline{\quad} + \underline{\quad} = \underline{\quad}$



Day # 4



Name: _____

Week 33 Day 4 Date: _____

BCCS-B

RPI SIENA UNION

Fluency

Wait for the teacher to say *GO!* Finish as many problems as you can.

1. $6 + \underline{\quad} = 6$	11. $3 + \underline{\quad} = 6$	21. $4 + \underline{\quad} = 7$
2. $0 + \underline{\quad} = 6$	12. $4 + \underline{\quad} = 8$	22. $7 = 3 + \underline{\quad}$
3. $5 + \underline{\quad} = 6$	13. $10 = 5 + \underline{\quad}$	23. $2 + \underline{\quad} = 7$
4. $4 + \underline{\quad} = 6$	14. $5 + \underline{\quad} = 9$	24. $2 + \underline{\quad} = 8$
5. $0 + \underline{\quad} = 7$	15. $5 + \underline{\quad} = 7$	25. $9 = 2 + \underline{\quad}$
6. $6 + \underline{\quad} = 7$	16. $8 = 5 + \underline{\quad}$	26. $2 + \underline{\quad} = 10$
7. $1 + \underline{\quad} = 7$	17. $5 + \underline{\quad} = 9$	27. $10 = 3 + \underline{\quad}$
8. $7 + \underline{\quad} = 8$	18. $8 + \underline{\quad} = 10$	28. $3 + \underline{\quad} = 9$
9. $1 + \underline{\quad} = 8$	19. $7 + \underline{\quad} = 10$	29. $4 + \underline{\quad} = 9$
10. $6 + \underline{\quad} = 8$	20. $10 = 6 + \underline{\quad}$	30. $10 = 4 + \underline{\quad}$

Name: _____

Week 33 Day 4 Date: _____

BCCS-B

RPI SIENA UNION

Problem Set 1

1. Solve using number bonds. This time, add the tens first. Write the 2 number sentences to show what you did.

a. $11 + 14 = \underline{\quad}$	b. $21 + 14 = \underline{\quad}$
c. $14 + 15 = \underline{\quad}$	d. $26 + 14 = \underline{\quad}$
e. $26 + 13 = \underline{\quad}$	f. $13 + 24 = \underline{\quad}$

Name: _____

Week 33 Day 4 Date: _____

BCCS-B

RPI SIENA UNION

Problem Set 2

2. Solve using number bonds. This time, add the ones first. Write the 2 number sentences to show what you did.

a. $29 + 11 = \underline{\quad}$	b. $17 + 13 = \underline{\quad}$
c. $14 + 16 = \underline{\quad}$	d. $26 + 13 = \underline{\quad}$
e. $28 + 11 = \underline{\quad}$	f. $12 + 27 = \underline{\quad}$
g. $18 + 12 = \underline{\quad}$	h. $22 + 18 = \underline{\quad}$

Name: _____

Week 33 Day 4 Date: _____

BCCS-B

RPI SIENA UNION

Exit Ticket

Solve using number bonds. Write the 2 number sentences to record what you did.

a.

$$12 + 27 = \underline{\hspace{2cm}}$$

b.

$$21 + 19 = \underline{\hspace{2cm}}$$

Name: _____

Week 33 Day 4 Date: _____

BCCS-B

RPI SIENA UNION

Homework

1. Solve using number bonds. This time, add the tens first. Write the 2 number sentences to show what you did.

a.

$$12 + 14 = \underline{\quad}$$

b.

$$14 + 21 = \underline{\quad}$$

c.

$$15 + 14 = \underline{\quad}$$

d.

$$25 + 14 = \underline{\quad}$$

e.


$$23 + 16 = \underline{\quad}$$

f.

$$16 + 24 = \underline{\quad}$$



Day # 5



|

Name: _____

Week 33 Day 5 Date: _____

BCCS-B

RPI SIENA UNION

Homework

2. Solve using number bonds. This time, add the ones first. Write the 2 number sentences to show what you did.

a. $27 + 10 = \underline{\quad}$	b. $27 + 13 = \underline{\quad}$
c. $13 + 26 = \underline{\quad}$	d. $26 + 14 = \underline{\quad}$
e. $12 + 18 = \underline{\quad}$	f. $18 + 21 = \underline{\quad}$