

First Grade
Weekly Packet

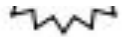
Week of: 4/26--4/30

Name: _____

Monday

Name _____

Date _____



*Write the missing number. Pay attention to the + and - signs.

1	$2 + 2 = \square$		16	$2 + \square = 8$	
2	$2 + \square = 4$		17	$6 + \square = 8$	
3	$4 - 2 = \square$		18	$8 - 6 = \square$	
4	$3 + 3 = \square$		19	$8 - 2 = \square$	
5	$3 + \square = 6$		20	$9 + 2 = \square$	
6	$6 - 3 = \square$		21	$9 + \square = 11$	
7	$4 + \square = 7$		22	$11 - 9 = \square$	
8	$3 + \square = 7$		23	$9 + \square = 15$	
9	$7 - 3 = \square$		24	$15 - 9 = \square$	
10	$7 - 4 = \square$		25	$8 + \square = 15$	
11	$5 + 4 = \square$		26	$15 - \square = 8$	
12	$4 + \square = 9$		27	$8 + \square = 17$	
13	$9 - 4 = \square$		28	$17 - \square = 8$	
14	$9 - 5 = \square$		29	$27 - \square = 8$	
15	$9 - \square = 4$		30	$37 - \square = 8$	

Name _____

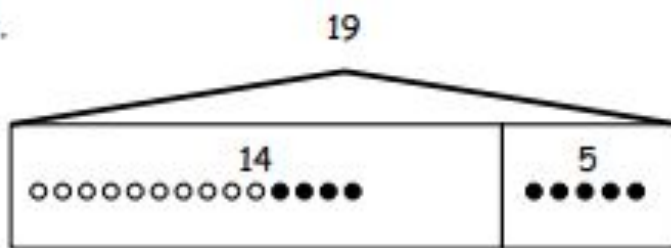
Date _____

Use the tape diagrams to write a variety of word problems. Use the word bank if needed. Remember to label your model after you write the story.

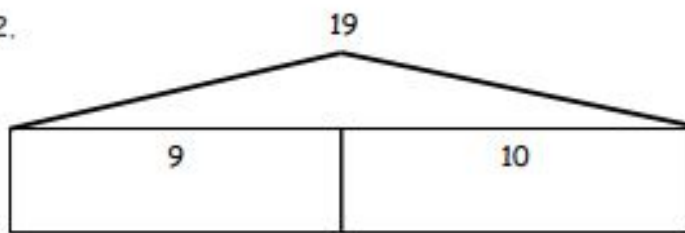
<u>Topics (Nouns)</u>		
flowers	goldfish	lizards
stickers	rockets	cars
frogs	crackers	marbles

<u>Actions (Verbs)</u>		
hide	eat	go away
give	draw	get
collect	build	play

1.

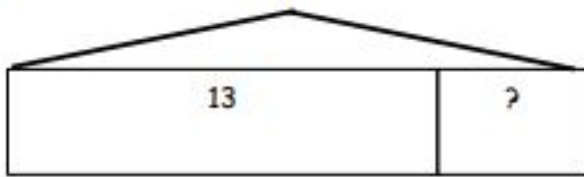


2.



3.

16

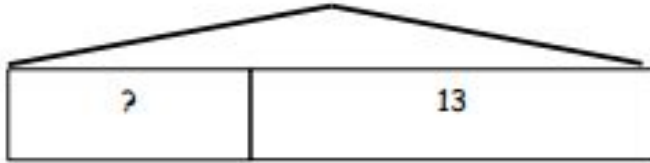


13

?

4.

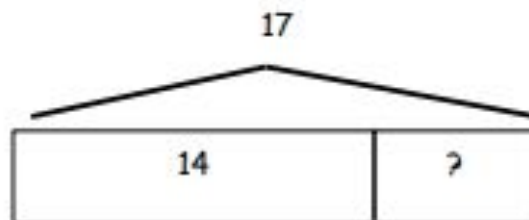
19



Name _____

Date _____

Circle the 2 story problems that match the tape diagram.




- a. There are 14 ants on the picnic blanket. Then, some more ants came over. Now, there are 17 ants on the picnic blanket. How many ants came over?
- b. 14 children are on the playground from one class. Then, 17 children from another class came to the playground. How many children are on the playground now?
- c. 17 grapes were on the plate. Willie ate 14 grapes. How many grapes are on the plate now?

Name: _____

Date: _____

Book Title: _____





Guided Reading

Name: _____

Date: _____

Book Title: _____

A large, empty rounded rectangular box with a thin black border, intended for students to write their thoughts or notes about the book.A series of horizontal writing lines. Each line set consists of a solid top blue line, a dashed middle grey line, and a solid bottom pink line. There are ten such sets of lines stacked vertically, providing a guide for handwriting practice.



Tuesday

Name _____

Date _____

My Addition Practice

1. $6 + 0 = \underline{\quad}$	11. $7 + 1 = \underline{\quad}$	21. $5 + 3 = \underline{\quad}$
2. $0 + 6 = \underline{\quad}$	12. $\underline{\quad} = 1 + 7$	22. $\underline{\quad} = 5 + 4$
3. $5 + 1 = \underline{\quad}$	13. $3 + 3 = \underline{\quad}$	23. $6 + 4 = \underline{\quad}$
4. $1 + 5 = \underline{\quad}$	14. $3 + 4 = \underline{\quad}$	24. $4 + 6 = \underline{\quad}$
5. $6 + 1 = \underline{\quad}$	15. $\underline{\quad} = 3 + 5$	25. $\underline{\quad} = 4 + 4$
6. $1 + 6 = \underline{\quad}$	16. $6 + 3 = \underline{\quad}$	26. $3 + 4 = \underline{\quad}$
7. $6 + 2 = \underline{\quad}$	17. $7 + 3 = \underline{\quad}$	27. $5 + 5 = \underline{\quad}$
8. $5 + 2 = \underline{\quad}$	18. $\underline{\quad} = 7 + 2$	28. $\underline{\quad} = 4 + 5$
9. $2 + 5 = \underline{\quad}$	19. $2 + 7 = \underline{\quad}$	29. $3 + 7 = \underline{\quad}$
10. $2 + 4 = \underline{\quad}$	20. $2 + 8 = \underline{\quad}$	30. $\underline{\quad} = 3 + 6$

Today, I finished _____ problems.

I solved _____ problems correctly.

Name _____

Date _____

My Subtraction Practice

1. $6 - 0 = \underline{\quad}$	11. $6 - 3 = \underline{\quad}$	21. $8 - 4 = \underline{\quad}$
2. $6 - 1 = \underline{\quad}$	12. $7 - 3 = \underline{\quad}$	22. $8 - 3 = \underline{\quad}$
3. $7 - 1 = \underline{\quad}$	13. $9 - 3 = \underline{\quad}$	23. $8 - 5 = \underline{\quad}$
4. $8 - 1 = \underline{\quad}$	14. $10 - 8 = \underline{\quad}$	24. $9 - 5 = \underline{\quad}$
5. $6 - 2 = \underline{\quad}$	15. $10 - 6 = \underline{\quad}$	25. $9 - 4 = \underline{\quad}$
6. $7 - 2 = \underline{\quad}$	16. $10 - 4 = \underline{\quad}$	26. $7 - 3 = \underline{\quad}$
7. $9 - 2 = \underline{\quad}$	17. $10 - 5 = \underline{\quad}$	27. $10 - 7 = \underline{\quad}$
8. $10 - 10 = \underline{\quad}$	18. $7 - 6 = \underline{\quad}$	28. $9 - 7 = \underline{\quad}$
9. $10 - 9 = \underline{\quad}$	19. $7 - 5 = \underline{\quad}$	29. $9 - 6 = \underline{\quad}$
10. $10 - 7 = \underline{\quad}$	20. $6 - 4 = \underline{\quad}$	30. $8 - 6 = \underline{\quad}$

Today, I finished _____ problems.

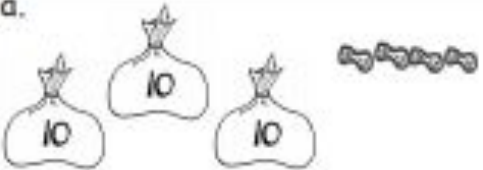
I solved _____ problems correctly.

Name _____

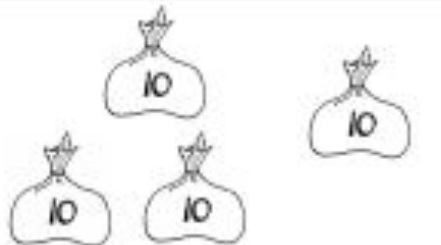
Date _____

1. Fill in the blanks, and match the pairs that show the same amount.

a.

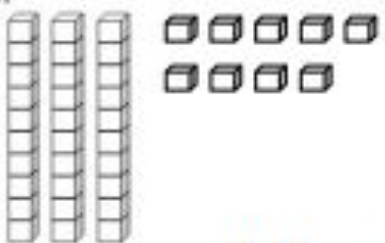


_____ tens _____ ones




_____ tens _____ ones

b.

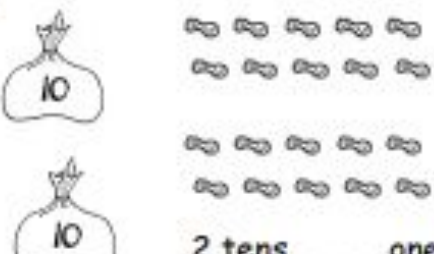


_____ tens _____ ones

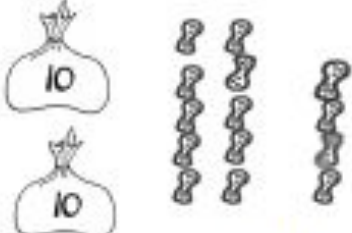


1 ten _____ ones

c.

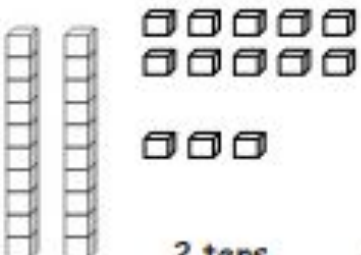


2 tens _____ ones

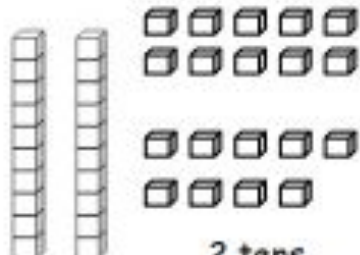


2 tens _____ ones

d.



2 tens _____ ones



2 tens _____ ones

2. Match the place value charts that show the same amount.

a.

tens	ones
2	2

tens	ones
3	6

b.

tens	ones
2	16

tens	ones
3	4

c.

tens	ones
2	14

tens	ones
1	12

3. Check each sentence that is true.

a. 27 is the same as 1 ten 17 ones.

b. 33 is the same as 2 tens 23 ones.

c. 37 is the same as 2 tens 17 ones.

d. 29 is the same as 1 ten 19 ones.

4. Lee says that 35 is the same as 2 tens 15 ones, and Maria says that 35 is the same as 1 ten 25 ones. Draw quick tens to show if either Lee or Maria is correct.

Name _____

Date _____

1. Match the place value charts that show the same amount.

a.

tens	ones
2	12

tens	ones
2	16

b.

tens	ones
2	8

tens	ones
1	18

c.

tens	ones
3	6

tens	ones
3	2

2. Tamra says that 24 is the same as 1 ten 14 ones, and Willie says that 24 is the same as 2 tens 14 ones. Draw quick tens to show if Tamra or Willie is correct.

Name: _____

Date: _____

Book Title: _____

A series of horizontal lines for writing, consisting of multiple sets of three lines each: a solid blue top line, a dashed grey middle line, and a solid pink bottom line. These lines are spaced evenly down the page.




Guided Reading

Name: _____

Date: _____

Book Title: _____

A large, empty rounded rectangular box with a thin black border, intended for drawing or writing.A series of horizontal writing lines. Each line set consists of a solid top blue line, a dashed middle grey line, and a solid bottom pink line. There are ten such sets of lines stacked vertically.



Wednesday

Name _____ Date _____

$$\begin{array}{r} 11 \\ + 6 \\ \hline \end{array}$$

$$\begin{array}{r} 2 \\ + 9 \\ \hline \end{array}$$

$$\begin{array}{r} 5 \\ + 9 \\ \hline \end{array}$$

$$\begin{array}{r} 1 \\ + 1 \\ \hline \end{array}$$

$$\begin{array}{r} 0 \\ + 5 \\ \hline \end{array}$$

$$\begin{array}{r} 2 \\ + 1 \\ \hline \end{array}$$

$$\begin{array}{r} 13 \\ + 3 \\ \hline \end{array}$$

$$\begin{array}{r} 16 \\ + 2 \\ \hline \end{array}$$

$$\begin{array}{r} 5 \\ + 5 \\ \hline \end{array}$$

$$\begin{array}{r} 13 \\ + 0 \\ \hline \end{array}$$

$$\begin{array}{r} 4 \\ + 10 \\ \hline \end{array}$$

$$\begin{array}{r} 4 \\ + 11 \\ \hline \end{array}$$

$$\begin{array}{r} 5 \\ + 12 \\ \hline \end{array}$$

$$\begin{array}{r} 3 \\ + 17 \\ \hline \end{array}$$

$$\begin{array}{r} 6 \\ + 5 \\ \hline \end{array}$$

$$\begin{array}{r} 1 \\ + 0 \\ \hline \end{array}$$

$$\begin{array}{r} 2 \\ + 18 \\ \hline \end{array}$$

$$\begin{array}{r} 11 \\ + 9 \\ \hline \end{array}$$

$$\begin{array}{r} 10 \\ + 1 \\ \hline \end{array}$$

$$\begin{array}{r} 8 \\ + 12 \\ \hline \end{array}$$

$$\begin{array}{r} 5 \\ + 13 \\ \hline \end{array}$$

$$\begin{array}{r} 0 \\ + 0 \\ \hline \end{array}$$

$$\begin{array}{r} 4 \\ + 1 \\ \hline \end{array}$$

$$\begin{array}{r} 1 \\ + 5 \\ \hline \end{array}$$

$$\begin{array}{r} 19 \\ + 0 \\ \hline \end{array}$$

$$\begin{array}{r} 12 \\ + 0 \\ \hline \end{array}$$

$$\begin{array}{r} 5 \\ + 10 \\ \hline \end{array}$$

$$\begin{array}{r} 14 \\ + 0 \\ \hline \end{array}$$

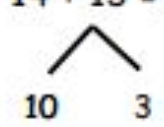
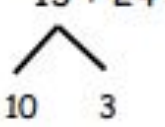
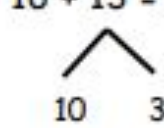
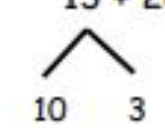
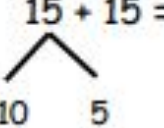
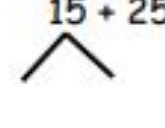
$$\begin{array}{r} 8 \\ + 3 \\ \hline \end{array}$$

$$\begin{array}{r} 5 \\ + 15 \\ \hline \end{array}$$

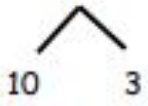
Name _____

Date _____

1. Solve using number bonds. Write the two number sentences that show that you added the ten first. Draw quick tens and ones if that helps you.

<p>a.</p> $14 + 13 = \underline{\quad}$  $14 + 10 = 24$ $24 + 3 = 27$	<p>b.</p> $13 + 24 = \underline{\quad}$  $24 + 10 = \underline{\quad}$ $\underline{\quad} + 3 = \underline{\quad}$
<p>c.</p> $16 + 13 = \underline{\quad}$  $16 + 10 = \underline{\quad}$ $\underline{\quad} + 3 = \underline{\quad}$	<p>d.</p> $13 + 26 = \underline{\quad}$  $26 + 10 = \underline{\quad}$ $\underline{\quad} + \underline{\quad} = \underline{\quad}$
<p>e.</p> $15 + 15 = \underline{\quad}$  $\underline{\quad} + \underline{\quad} = \underline{\quad}$ $\underline{\quad} + \underline{\quad} = \underline{\quad}$	<p>f.</p> $15 + 25 = \underline{\quad}$  $\underline{\quad} + \underline{\quad} = \underline{\quad}$ $\underline{\quad} + \underline{\quad} = \underline{\quad}$

2. Solve using number bonds or the arrow way. Part (a) has been started for you.

a. $15 + 13 = \underline{\quad}$ 	b. $14 + 23 = \underline{\quad}$
c. $16 + 14 = \underline{\quad}$	d. $14 + 26 = \underline{\quad}$
e. $21 + 17 = \underline{\quad}$	f. $17 + 23 = \underline{\quad}$
g. $21 + 18 = \underline{\quad}$	h. $18 + 12 = \underline{\quad}$

Name _____

Date _____

Solve using number bonds. Write the two number sentences that show that you added the ten first.

1. $13 + 26 = \underline{\quad}$



$$\underline{\quad} + \underline{\quad} = \underline{\quad}$$

$$\underline{\quad} + \underline{\quad} = \underline{\quad}$$

2. $19 + 21 = \underline{\quad}$



$$\underline{\quad} + \underline{\quad} = \underline{\quad}$$


$$\underline{\quad} + \underline{\quad} = \underline{\quad}$$

Name: _____

Date: _____

Book Title: _____

A series of horizontal writing lines. The top line is solid blue. Below it is a dashed blue line. The background of this section is light green. This pattern of a solid blue line followed by a dashed blue line repeats down the page.





Guided Reading

Name: _____

Date: _____

Book Title: _____





Thursday

Name _____

Date _____ 

*Write the missing number.

1.	$5 + \square = 10$		16.	$9 + \square = 10$	
2.	$9 + \square = 10$		17.	$19 + \square = 20$	
3.	$10 + \square = 10$		18.	$5 + \square = 10$	
4.	$0 + \square = 10$		19.	$15 + \square = 20$	
5.	$8 + \square = 10$		20.	$1 + \square = 10$	
6.	$7 + \square = 10$		21.	$11 + \square = 20$	
7.	$6 + \square = 10$		22.	$3 + \square = 10$	
8.	$4 + \square = 10$		23.	$13 + \square = 20$	
9.	$3 + \square = 10$		24.	$4 + \square = 10$	
10.	$\square + 7 = 10$		25.	$14 + \square = 20$	
11.	$2 + \square = 10$		26.	$16 + \square = 20$	
12.	$\square + 8 = 10$		27.	$2 + \square = 10$	
13.	$1 + \square = 10$		28.	$12 + \square = 20$	
14.	$\square + 2 = 10$		29.	$18 + \square = 20$	
15.	$\square + 3 = 10$		30.	$11 + \square = 20$	

Name _____

Date _____

1. Solve using number bonds. This time, add the tens first. Write the 2 number sentences to show what you did.

a. $11 + 14 = \underline{\quad}$	b. $21 + 14 = \underline{\quad}$
c. $14 + 15 = \underline{\quad}$	d. $26 + 14 = \underline{\quad}$
e. $26 + 13 = \underline{\quad}$	f. $13 + 24 = \underline{\quad}$

2. Solve using number bonds. This time, add the ones first. Write the 2 number sentences to show what you did.

a. $29 + 11 = \underline{\quad}$	b. $17 + 13 = \underline{\quad}$
c. $14 + 16 = \underline{\quad}$	d. $26 + 13 = \underline{\quad}$
e. $28 + 11 = \underline{\quad}$	f. $12 + 27 = \underline{\quad}$
g. $18 + 12 = \underline{\quad}$	h. $22 + 18 = \underline{\quad}$

Name _____

Date _____

Solve using number bonds. Write the 2 number sentences to record what you did.

a.

$12 + 27 = \underline{\quad\quad}$

b.


$21 + 19 = \underline{\quad\quad}$

Name: _____

Date: _____

Book Title: _____

A series of horizontal writing lines. Each line set consists of a solid top blue line, a dashed middle grey line, and a solid bottom pink line. There are ten such sets of lines stacked vertically, providing a guide for handwriting practice.




Guided Reading

Name: _____

Date: _____

Book Title: _____

A large, empty rounded rectangular box with a thin black border, intended for drawing or writing.A series of horizontal writing lines. Each line set consists of a solid top blue line, a dashed middle grey line, and a solid bottom pink line. There are ten such sets of lines stacked vertically.



Friday

Name _____ Date _____

$$\begin{array}{r} 0 \\ +4 \\ \hline \end{array}$$

$$\begin{array}{r} 14 \\ +2 \\ \hline \end{array}$$

$$\begin{array}{r} 13 \\ +7 \\ \hline \end{array}$$

$$\begin{array}{r} 12 \\ +6 \\ \hline \end{array}$$

$$\begin{array}{r} 8 \\ +8 \\ \hline \end{array}$$

$$\begin{array}{r} 12 \\ +8 \\ \hline \end{array}$$

$$\begin{array}{r} 9 \\ +10 \\ \hline \end{array}$$

$$\begin{array}{r} 15 \\ +3 \\ \hline \end{array}$$

$$\begin{array}{r} 13 \\ +5 \\ \hline \end{array}$$

$$\begin{array}{r} 11 \\ +4 \\ \hline \end{array}$$

$$\begin{array}{r} 0 \\ +2 \\ \hline \end{array}$$

$$\begin{array}{r} 3 \\ +14 \\ \hline \end{array}$$

$$\begin{array}{r} 12 \\ +3 \\ \hline \end{array}$$

$$\begin{array}{r} 15 \\ +4 \\ \hline \end{array}$$

$$\begin{array}{r} 9 \\ +2 \\ \hline \end{array}$$

$$\begin{array}{r} 8 \\ +9 \\ \hline \end{array}$$

$$\begin{array}{r} 8 \\ +2 \\ \hline \end{array}$$

$$\begin{array}{r} 1 \\ +6 \\ \hline \end{array}$$

$$\begin{array}{r} 5 \\ +5 \\ \hline \end{array}$$

$$\begin{array}{r} 17 \\ +1 \\ \hline \end{array}$$

$$\begin{array}{r} 11 \\ +8 \\ \hline \end{array}$$

$$\begin{array}{r} 11 \\ +9 \\ \hline \end{array}$$

$$\begin{array}{r} 11 \\ +0 \\ \hline \end{array}$$

$$\begin{array}{r} 13 \\ +4 \\ \hline \end{array}$$

$$\begin{array}{r} 13 \\ +0 \\ \hline \end{array}$$

$$\begin{array}{r} 5 \\ +3 \\ \hline \end{array}$$

$$\begin{array}{r} 9 \\ +4 \\ \hline \end{array}$$

$$\begin{array}{r} 9 \\ +5 \\ \hline \end{array}$$


$$\begin{array}{r} 7 \\ +1 \\ \hline \end{array}$$

$$\begin{array}{r} 2 \\ +5 \\ \hline \end{array}$$

Name: _____

Date: _____

Book Title: _____

A series of horizontal writing lines. The background is light green. Each line set consists of a solid blue top line, a dashed blue middle line, and a solid pink bottom line. There are ten such sets of lines stacked vertically, providing space for handwriting practice.



Guided Reading

Name: _____

Date: _____

Book Title: _____

A large, empty rounded rectangular box with a thin black border, intended for drawing or taking notes.A series of horizontal lines for handwriting practice. Each set consists of a solid top blue line, a dashed middle green line, and a solid bottom red line. There are ten such sets of lines filling the bottom half of the page.

