



First Grade
Weekly Packet

Week of 6/7--6/11

Name: _____

Monday

Name _____ Date _____

$$\begin{array}{r} 0 \\ +17 \\ \hline \end{array}$$

$$\begin{array}{r} 2 \\ +17 \\ \hline \end{array}$$

$$\begin{array}{r} 17 \\ +1 \\ \hline \end{array}$$

$$\begin{array}{r} 6 \\ +14 \\ \hline \end{array}$$

$$\begin{array}{r} 16 \\ +4 \\ \hline \end{array}$$

$$\begin{array}{r} 11 \\ +1 \\ \hline \end{array}$$

$$\begin{array}{r} 3 \\ +12 \\ \hline \end{array}$$

$$\begin{array}{r} 18 \\ +1 \\ \hline \end{array}$$

$$\begin{array}{r} 1 \\ +3 \\ \hline \end{array}$$

$$\begin{array}{r} 6 \\ +5 \\ \hline \end{array}$$

$$\begin{array}{r} 0 \\ +0 \\ \hline \end{array}$$

$$\begin{array}{r} 1 \\ +1 \\ \hline \end{array}$$

$$\begin{array}{r} 0 \\ +8 \\ \hline \end{array}$$

$$\begin{array}{r} 0 \\ +20 \\ \hline \end{array}$$

$$\begin{array}{r} 5 \\ +5 \\ \hline \end{array}$$

$$\begin{array}{r} 0 \\ +1 \\ \hline \end{array}$$

$$\begin{array}{r} 16 \\ +2 \\ \hline \end{array}$$

$$\begin{array}{r} 4 \\ +11 \\ \hline \end{array}$$

$$\begin{array}{r} 0 \\ +11 \\ \hline \end{array}$$

$$\begin{array}{r} 14 \\ +4 \\ \hline \end{array}$$

$$\begin{array}{r} 9 \\ +0 \\ \hline \end{array}$$

$$\begin{array}{r} 16 \\ +3 \\ \hline \end{array}$$

$$\begin{array}{r} 5 \\ +7 \\ \hline \end{array}$$

$$\begin{array}{r} 7 \\ +11 \\ \hline \end{array}$$

$$\begin{array}{r} 1 \\ +6 \\ \hline \end{array}$$

$$\begin{array}{r} 0 \\ +16 \\ \hline \end{array}$$

$$\begin{array}{r} 13 \\ +5 \\ \hline \end{array}$$

$$\begin{array}{r} 0 \\ +6 \\ \hline \end{array}$$

$$\begin{array}{r} 1 \\ +14 \\ \hline \end{array}$$

$$\begin{array}{r} 0 \\ +12 \\ \hline \end{array}$$

Name _____

Date _____

1. Solve using quick tens and ones drawings. Remember to line up your tens with tens and ones with ones. Write the total below your drawing.

a. $29 + 42 = \underline{\quad}$



b. $39 + 54 = \underline{\quad}$

c. $41 + 38 = \underline{\quad}$

d. $58 + 24 = \underline{\quad}$

e. $47 + 46 = \underline{\quad}$

f. $48 + 29 = \underline{\quad}$

2. Solve using quick tens and ones. Remember to line up your tens with tens and ones with ones. Write the total below your drawing.

a. $49 + 22 = \underline{\quad}$	b. $38 + 62 = \underline{\quad}$
c. $59 + 23 = \underline{\quad}$	d. $68 + 14 = \underline{\quad}$
e. $46 + 36 = \underline{\quad}$	f. $69 + 26 = \underline{\quad}$

Name _____

Date _____

Solve using quick tens and ones drawings. Remember to line up your drawings and write the total below your drawing.

a. $49 + 34 = \underline{\quad}$

b. $57 + 36 = \underline{\quad}$

Tuesday

Name _____ Date _____

$$\begin{array}{r} 4 \\ + 11 \\ \hline \end{array}$$

$$\begin{array}{r} 13 \\ + 5 \\ \hline \end{array}$$

$$\begin{array}{r} 4 \\ + 0 \\ \hline \end{array}$$

$$\begin{array}{r} 6 \\ + 11 \\ \hline \end{array}$$

$$\begin{array}{r} 3 \\ + 16 \\ \hline \end{array}$$

$$\begin{array}{r} 1 \\ + 12 \\ \hline \end{array}$$

$$\begin{array}{r} 7 \\ + 10 \\ \hline \end{array}$$

$$\begin{array}{r} 7 \\ + 4 \\ \hline \end{array}$$

$$\begin{array}{r} 16 \\ + 4 \\ \hline \end{array}$$

$$\begin{array}{r} 3 \\ + 5 \\ \hline \end{array}$$

$$\begin{array}{r} 8 \\ + 11 \\ \hline \end{array}$$

$$\begin{array}{r} 15 \\ + 2 \\ \hline \end{array}$$

$$\begin{array}{r} 4 \\ + 5 \\ \hline \end{array}$$

$$\begin{array}{r} 1 \\ + 11 \\ \hline \end{array}$$

$$\begin{array}{r} 8 \\ + 2 \\ \hline \end{array}$$

$$\begin{array}{r} 1 \\ + 5 \\ \hline \end{array}$$

$$\begin{array}{r} 1 \\ + 1 \\ \hline \end{array}$$

$$\begin{array}{r} 8 \\ + 6 \\ \hline \end{array}$$

$$\begin{array}{r} 10 \\ + 2 \\ \hline \end{array}$$

$$\begin{array}{r} 1 \\ + 6 \\ \hline \end{array}$$

$$\begin{array}{r} 1 \\ + 2 \\ \hline \end{array}$$

$$\begin{array}{r} 1 \\ + 17 \\ \hline \end{array}$$

$$\begin{array}{r} 4 \\ + 13 \\ \hline \end{array}$$

$$\begin{array}{r} 1 \\ + 3 \\ \hline \end{array}$$

$$\begin{array}{r} 7 \\ + 5 \\ \hline \end{array}$$

$$\begin{array}{r} 5 \\ + 5 \\ \hline \end{array}$$

$$\begin{array}{r} 11 \\ + 5 \\ \hline \end{array}$$

$$\begin{array}{r} 17 \\ + 0 \\ \hline \end{array}$$

$$\begin{array}{r} 1 \\ + 7 \\ \hline \end{array}$$

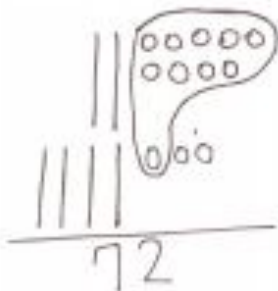
$$\begin{array}{r} 7 \\ + 7 \\ \hline \end{array}$$

Name _____

Date _____

1. Solve using quick tens and ones drawings. Remember to line up your drawings and rewrite the number sentence vertically.

a. $29 + 43 = \underline{\quad}$



$$\begin{array}{r} 29 \\ + 43 \\ \hline 72 \end{array}$$

b. $34 + 49 = \underline{\quad}$

c. $45 + 39 = \underline{\quad}$

d. $54 + 25 = \underline{\quad}$

e. $47 + 36 = \underline{\quad}$

f. $54 + 46 = \underline{\quad}$

2. Solve using quick tens and ones. Remember to line up your drawings and rewrite the number sentence vertically.

a. $39 + 24 = \underline{\quad}$	b. $58 + 36 = \underline{\quad}$
c. $55 + 37 = \underline{\quad}$	d. $59 + 36 = \underline{\quad}$
e. $37 + 58 = \underline{\quad}$	f. $68 + 29 = \underline{\quad}$

Name _____

Date _____

Solve using quick tens and ones. Remember to line up your drawings and rewrite the number sentence vertically.

a. $49 + 26 = \underline{\quad}$	b. $58 + 37 = \underline{\quad}$
c. $55 + 37 = \underline{\quad}$	d. $69 + 26 = \underline{\quad}$

Wednesday

Name _____ Date _____

$$\begin{array}{r} 6 \\ + 14 \\ \hline \end{array}$$

$$\begin{array}{r} 6 \\ + 10 \\ \hline \end{array}$$

$$\begin{array}{r} 19 \\ + 0 \\ \hline \end{array}$$

$$\begin{array}{r} 2 \\ + 2 \\ \hline \end{array}$$

$$\begin{array}{r} 17 \\ + 2 \\ \hline \end{array}$$

$$\begin{array}{r} 5 \\ + 9 \\ \hline \end{array}$$

$$\begin{array}{r} 9 \\ + 9 \\ \hline \end{array}$$

$$\begin{array}{r} 0 \\ + 18 \\ \hline \end{array}$$

$$\begin{array}{r} 15 \\ + 4 \\ \hline \end{array}$$

$$\begin{array}{r} 1 \\ + 15 \\ \hline \end{array}$$

$$\begin{array}{r} 3 \\ + 7 \\ \hline \end{array}$$

$$\begin{array}{r} 8 \\ + 6 \\ \hline \end{array}$$

$$\begin{array}{r} 0 \\ + 20 \\ \hline \end{array}$$

$$\begin{array}{r} 1 \\ + 14 \\ \hline \end{array}$$

$$\begin{array}{r} 6 \\ + 5 \\ \hline \end{array}$$

$$\begin{array}{r} 12 \\ + 4 \\ \hline \end{array}$$

$$\begin{array}{r} 0 \\ + 6 \\ \hline \end{array}$$

$$\begin{array}{r} 1 \\ + 19 \\ \hline \end{array}$$

$$\begin{array}{r} 18 \\ + 2 \\ \hline \end{array}$$

$$\begin{array}{r} 2 \\ + 4 \\ \hline \end{array}$$

$$\begin{array}{r} 0 \\ + 9 \\ \hline \end{array}$$

$$\begin{array}{r} 4 \\ + 8 \\ \hline \end{array}$$

$$\begin{array}{r} 0 \\ + 12 \\ \hline \end{array}$$

$$\begin{array}{r} 8 \\ + 2 \\ \hline \end{array}$$

$$\begin{array}{r} 12 \\ + 3 \\ \hline \end{array}$$

$$\begin{array}{r} 1 \\ + 10 \\ \hline \end{array}$$

$$\begin{array}{r} 2 \\ + 16 \\ \hline \end{array}$$

$$\begin{array}{r} 0 \\ + 1 \\ \hline \end{array}$$

$$\begin{array}{r} 0 \\ + 7 \\ \hline \end{array}$$

$$\begin{array}{r} 5 \\ + 13 \\ \hline \end{array}$$

Name _____

Date _____

1. Solve using quick tens and ones drawings. Remember to line up your tens and ones and rewrite the number sentence vertically.

a. $39 + 52 = \underline{\quad}$

b. $48 + 42 = \underline{\quad}$

c. $47 + 42 = \underline{\quad}$

d. $47 + 47 = \underline{\quad}$

e. $68 + 17 = \underline{\quad}$

f. $68 + 29 = \underline{\quad}$

2. Solve using quick tens and ones drawings. Remember to line up your tens and ones and rewrite the number sentence vertically.

a. $39 + 32 = \underline{\quad}$	b. $48 + 31 = \underline{\quad}$
c. $43 + 49 = \underline{\quad}$	d. $57 + 38 = \underline{\quad}$
e. $61 + 39 = \underline{\quad}$	f. $68 + 25 = \underline{\quad}$

Name _____

Date _____

Solve using quick tens and ones drawings. Remember to line up your tens and ones and rewrite the number sentence vertically.

a. $39 + 47 = \underline{\quad}$

b. $58 + 32 = \underline{\quad}$

c. $49 + 44 = \underline{\quad}$

d. $58 + 39 = \underline{\quad}$

Thursday

Name _____ Date _____

$$\begin{array}{r} 16 \\ + 2 \\ \hline \end{array}$$

$$\begin{array}{r} 2 \\ + 12 \\ \hline \end{array}$$

$$\begin{array}{r} 0 \\ + 13 \\ \hline \end{array}$$

$$\begin{array}{r} 1 \\ + 11 \\ \hline \end{array}$$

$$\begin{array}{r} 5 \\ + 5 \\ \hline \end{array}$$

$$\begin{array}{r} 13 \\ + 3 \\ \hline \end{array}$$

$$\begin{array}{r} 7 \\ + 5 \\ \hline \end{array}$$

$$\begin{array}{r} 13 \\ + 1 \\ \hline \end{array}$$

$$\begin{array}{r} 0 \\ + 20 \\ \hline \end{array}$$

$$\begin{array}{r} 4 \\ + 14 \\ \hline \end{array}$$

$$\begin{array}{r} 5 \\ + 0 \\ \hline \end{array}$$

$$\begin{array}{r} 3 \\ + 0 \\ \hline \end{array}$$

$$\begin{array}{r} 18 \\ + 1 \\ \hline \end{array}$$

$$\begin{array}{r} 6 \\ + 5 \\ \hline \end{array}$$

$$\begin{array}{r} 11 \\ + 4 \\ \hline \end{array}$$

$$\begin{array}{r} 3 \\ + 14 \\ \hline \end{array}$$

$$\begin{array}{r} 5 \\ + 10 \\ \hline \end{array}$$

$$\begin{array}{r} 10 \\ + 8 \\ \hline \end{array}$$

$$\begin{array}{r} 1 \\ + 4 \\ \hline \end{array}$$

$$\begin{array}{r} 2 \\ + 10 \\ \hline \end{array}$$

$$\begin{array}{r} 19 \\ + 1 \\ \hline \end{array}$$

$$\begin{array}{r} 3 \\ + 9 \\ \hline \end{array}$$

$$\begin{array}{r} 8 \\ + 12 \\ \hline \end{array}$$

$$\begin{array}{r} 4 \\ + 9 \\ \hline \end{array}$$

$$\begin{array}{r} 17 \\ + 2 \\ \hline \end{array}$$

$$\begin{array}{r} 10 \\ + 3 \\ \hline \end{array}$$

$$\begin{array}{r} 1 \\ + 15 \\ \hline \end{array}$$

$$\begin{array}{r} 0 \\ + 0 \\ \hline \end{array}$$

$$\begin{array}{r} 4 \\ + 10 \\ \hline \end{array}$$

$$\begin{array}{r} 10 \\ + 0 \\ \hline \end{array}$$

$$\begin{array}{r} 5 \\ + 14 \\ \hline \end{array}$$

$$\begin{array}{r} 16 \\ + 1 \\ \hline \end{array}$$

$$\begin{array}{r} 17 \\ + 3 \\ \hline \end{array}$$

$$\begin{array}{r} 11 \\ + 7 \\ \hline \end{array}$$

$$\begin{array}{r} 1 \\ + 12 \\ \hline \end{array}$$

$$\begin{array}{r} 0 \\ + 9 \\ \hline \end{array}$$

$$\begin{array}{r} 6 \\ + 4 \\ \hline \end{array}$$

$$\begin{array}{r} 17 \\ + 1 \\ \hline \end{array}$$

$$\begin{array}{r} 8 \\ + 8 \\ \hline \end{array}$$

$$\begin{array}{r} 8 \\ + 11 \\ \hline \end{array}$$

$$\begin{array}{r} 6 \\ + 9 \\ \hline \end{array}$$

$$\begin{array}{r} 18 \\ + 2 \\ \hline \end{array}$$

$$\begin{array}{r} 1 \\ + 2 \\ \hline \end{array}$$

$$\begin{array}{r} 2 \\ + 6 \\ \hline \end{array}$$

$$\begin{array}{r} 15 \\ + 5 \\ \hline \end{array}$$

$$\begin{array}{r} 14 \\ + 1 \\ \hline \end{array}$$

$$\begin{array}{r} 6 \\ + 11 \\ \hline \end{array}$$

$$\begin{array}{r} 4 \\ + 4 \\ \hline \end{array}$$

$$\begin{array}{r} 4 \\ + 8 \\ \hline \end{array}$$

$$\begin{array}{r} 8 \\ + 1 \\ \hline \end{array}$$

Name _____

Date _____

Use any method you prefer to solve the problems below.

1. $74 + 21 = \underline{\quad}$	2. $79 + 21 = \underline{\quad}$
3. $46 + 34 = \underline{\quad}$	4. $58 + 34 = \underline{\quad}$
5. $35 + 14 = \underline{\quad}$	6. $35 + 18 = \underline{\quad}$


Name _____

Date _____


Circle the work that is correct.

In the extra space, correct the mistake in the other solution using the same solution strategy the student tried to use.

Student A

$$35 + 56 = 91$$

$$\begin{array}{r} 35 \\ + 56 \\ \hline 91 \end{array}$$

Student B


$$35 + 56 = 46$$

$$\begin{array}{r} 35 + 5 = 40 \\ 40 + 6 = 46 \end{array}$$

Name: _____

Date: _____

Book Title: _____

A series of horizontal writing lines. Each line set consists of a solid top blue line, a dashed middle grey line, and a solid bottom pink line. There are ten such sets of lines stacked vertically, providing a guide for handwriting practice.



Friday

Name _____

Date _____

$$\begin{array}{r} 17 \\ + 0 \\ \hline \end{array}$$

$$\begin{array}{r} 0 \\ + 5 \\ \hline \end{array}$$

$$\begin{array}{r} 2 \\ + 2 \\ \hline \end{array}$$

$$\begin{array}{r} 1 \\ + 12 \\ \hline \end{array}$$

$$\begin{array}{r} 7 \\ + 6 \\ \hline \end{array}$$

$$\begin{array}{r} 18 \\ + 1 \\ \hline \end{array}$$

$$\begin{array}{r} 3 \\ + 14 \\ \hline \end{array}$$

$$\begin{array}{r} 14 \\ + 6 \\ \hline \end{array}$$

$$\begin{array}{r} 8 \\ + 8 \\ \hline \end{array}$$

$$\begin{array}{r} 13 \\ + 7 \\ \hline \end{array}$$

$$\begin{array}{r} 4 \\ + 11 \\ \hline \end{array}$$

$$\begin{array}{r} 0 \\ + 3 \\ \hline \end{array}$$

$$\begin{array}{r} 9 \\ + 1 \\ \hline \end{array}$$

$$\begin{array}{r} 2 \\ + 13 \\ \hline \end{array}$$

$$\begin{array}{r} 16 \\ + 2 \\ \hline \end{array}$$

$$\begin{array}{r} 5 \\ + 7 \\ \hline \end{array}$$

$$\begin{array}{r} 1 \\ + 7 \\ \hline \end{array}$$

$$\begin{array}{r} 11 \\ + 1 \\ \hline \end{array}$$

$$\begin{array}{r} 3 \\ + 7 \\ \hline \end{array}$$

$$\begin{array}{r} 6 \\ + 8 \\ \hline \end{array}$$

$$\begin{array}{r} 16 \\ + 0 \\ \hline \end{array}$$

$$\begin{array}{r} 18 \\ + 0 \\ \hline \end{array}$$

$$\begin{array}{r} 2 \\ + 9 \\ \hline \end{array}$$

$$\begin{array}{r} 5 \\ + 15 \\ \hline \end{array}$$

$$\begin{array}{r} 12 \\ + 6 \\ \hline \end{array}$$

$$\begin{array}{r} 10 \\ + 1 \\ \hline \end{array}$$

$$\begin{array}{r} 7 \\ + 2 \\ \hline \end{array}$$

$$\begin{array}{r} 10 \\ + 3 \\ \hline \end{array}$$

$$\begin{array}{r} 1 \\ + 0 \\ \hline \end{array}$$

$$\begin{array}{r} 5 \\ + 4 \\ \hline \end{array}$$

$$\begin{array}{r} 3 \\ + 3 \\ \hline \end{array}$$

$$\begin{array}{r} 0 \\ + 8 \\ \hline \end{array}$$

$$\begin{array}{r} 9 \\ + 8 \\ \hline \end{array}$$

$$\begin{array}{r} 4 \\ + 1 \\ \hline \end{array}$$

$$\begin{array}{r} 4 \\ + 9 \\ \hline \end{array}$$

$$\begin{array}{r} 8 \\ + 3 \\ \hline \end{array}$$

$$\begin{array}{r} 20 \\ + 0 \\ \hline \end{array}$$

$$\begin{array}{r} 6 \\ + 1 \\ \hline \end{array}$$

$$\begin{array}{r} 1 \\ + 19 \\ \hline \end{array}$$

$$\begin{array}{r} 3 \\ + 2 \\ \hline \end{array}$$

$$\begin{array}{r} 0 \\ + 0 \\ \hline \end{array}$$

$$\begin{array}{r} 0 \\ + 6 \\ \hline \end{array}$$

$$\begin{array}{r} 3 \\ + 6 \\ \hline \end{array}$$

$$\begin{array}{r} 9 \\ + 5 \\ \hline \end{array}$$

$$\begin{array}{r} 9 \\ + 6 \\ \hline \end{array}$$

$$\begin{array}{r} 8 \\ + 2 \\ \hline \end{array}$$

$$\begin{array}{r} 8 \\ + 12 \\ \hline \end{array}$$

$$\begin{array}{r} 12 \\ + 7 \\ \hline \end{array}$$


$$\begin{array}{r} 9 \\ + 9 \\ \hline \end{array}$$

$$\begin{array}{r} 8 \\ + 10 \\ \hline \end{array}$$

Name: _____

Date: _____

Book Title: _____



Handwriting practice lines consisting of multiple sets of horizontal lines. Each set includes a solid top line, a dashed middle line, and a solid bottom line, with a light green shaded background behind the lines.

