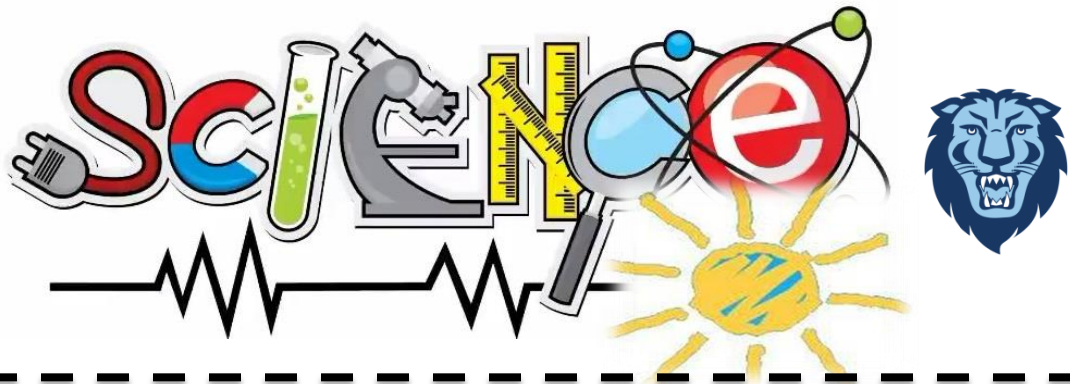




Name: \_\_\_\_\_

## 2<sup>nd</sup> Grade Science Remote Learning Packet Week 9



Dear Educator,

My signature is proof that I have reviewed my scholar's work and supported him to the best of my ability to complete all assignments.

\_\_\_\_\_

\_\_\_\_\_


(Parent Signature)

(Date)

Parents please note that all academic packets are also available on our website at [www.brighterchoice.org](http://www.brighterchoice.org) under the heading "Remote Learning." All academic packet assignments are mandatory and must be completed by all scholars.




**Day # 1**



**Scholars, today we will be reading a  
book online about rocks.**




**Day # 2**



**Scholars, today we will be doing the  
making a river activity.**



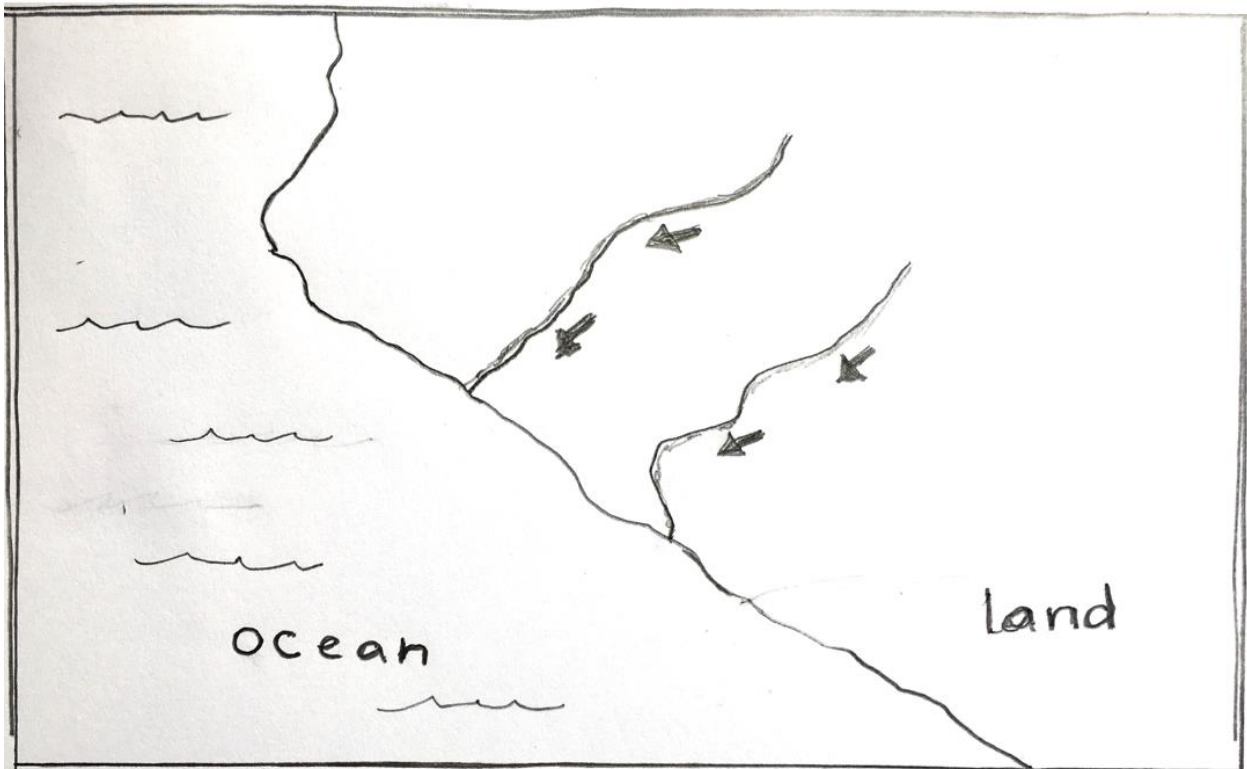
**Day # 3**



Exit ticket


1. If it never rained, how would the world would look different?
  - a. It wouldn't be different.
  - b. There would be no rocks.
  - c. There might be no canyons and rivers.
  - d. The world would be dry.

2. Look at this map and draw where you think there might be mountains:





# Day # 4



Name: \_\_\_\_\_ Week 9 Day 4 Date: \_\_\_\_\_  
BCCS-B Columbia Cornell NYU

### Work of Water Unit Assessment

1. If it never rained, how would the world look different?
  - e. It wouldn't be different.
  - f. There would be no rocks.
  - g. There might be no canyons and rivers.
  - h. The world would be dry.
  
2. Erosion is the gradual destruction of something by natural forces, such as water, wind or ice.
  - a. True
  - b. False
  
3. Imagine a friend said to you, "Water can't be as powerful as an excavator!" Is this true or false?
  - a. True
  - b. False

4. Here is a map showing two rivers. If there are mountains, where do you think they are?

Look at this map and draw where you think there might be mountains:

