

Name _____

22

1st Grade Modified ELA Remote Learning Packet

Week 22



Dear Educator,

My signature is proof that I have reviewed my scholar's work and supported him to the best of my ability to complete all assignments.

(Parent Signature)


(Date)

Parents please note that all academic packets are also available on our website at www.brighterchoice.org under the heading "Remote Learning." All academic packet assignments are mandatory and must be completed by all scholars.



Day # 1

February Break




Name: _____ Week 22 Day 1 Date: _____
BCCS-B RPI SIENA UNION

February Break Packet

Directions: List the objects that you see in the picture. Then color the picture.


1. _____
2. _____
3. _____
4. _____
5. _____





Day # 2

February Break



Name: _____ Week 22 Day 2 Date: _____
BCCS-B RPI SIENA UNION

February Break Packet

Find the hidden sight words.


AN	WHEN	STOP	OPEN	HAD
-----------	-------------	-------------	-------------	------------

D	H	B	N	V	X	A	W
D	S	T	O	P	I	V	H
H	M	F	L	O	P	N	E
A	R	O	U	N	D	O	N
D	K	E	W	S	Y	B	T
M	S	R	C	O	U	L	H
Q	P	S	I	M	A	G	O
O	P	E	N	R	N	D	N



Day # 3

February Break




February Break Packet

Directions: Read the story and answer the questions.

Tommy the Tiger

Tommy is a happy tiger. He loves to run fast. Tommy lives in the jungle. Tommy has stripes all over his body. Tommy has two little tiger cubs that he looks after.




- 1. What is the tiger's name?**
 A Tommy B Tony C Tito
- 2. What is Tommy like?**
 A Sad B Happy C Tired
- 3. How many cubs does he have?**
 A One B Three C Two
- 4. What does Tommy have on his body?**
 A Insects B Stripes C Faint
- 5. Where does Tommy live?**
 A The Jungle B The Park C School



Day # 4

February Break



February Break Packet


Directions: Read the sentence and choose the pronoun that completes the sentences

_____ have a frog named Bob.	
When I play in the rain, _____ comes with me.	
Sometimes my mom lets _____ play in the mud.	
_____ jump in puddles and make big splashes.	
_____ get all over my boots.	
When my mom calls, _____ have to go inside.	
_____ tells me and Bob to wash up so we don't get mud on the rug.	



Day # 5

February Break

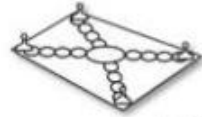


February Break Packet

Directions: Read the sentence and choose a word from the word bank that completes the sentence.

gate cake vase rake
tape game cave cage

I can play a _____.



Did you close the _____?



The _____ is pretty.



Put the bird in its _____.



I like my birthday _____.



The bear is in the _____.



Use the _____ to clean!



Do you see the _____?





Name _____



1st Grade Modified ELA Remote Learning Packet

Week 23



Dear Educator,

My signature is proof that I have reviewed my scholar's work and supported him to the best of my ability to complete all assignments.


(Parent Signature)

(Date)

Parents please note that all academic packets are also available on our website at www.brighterchoice.org under the heading "Remote Learning." All academic packet assignments are mandatory and must be completed by all scholars.



Day # 1




Black History Exit Ticket


**Name 3 new facts you
learned in today's reading:**

Draw a picture to support:

1. _____



2. _____



3. _____



Name _____ Week 23 Day 1 Date _____
 BCCS-B RPI Siena Union
 Homework

Find the words in the word search and circle them.

1. Look up two of the words you are not familiar with.


Black History Month 2020

B	C	S	J	I	O	N	U	M	I	O	A	E	E
N	L	P	S	K	A	H	N	C	A	E	G	L	U
A	L	A	U	Q	E	R	A	K	E	E	O	T	K
A	T	C	N	S	E	R	S	O	M	T	E	T	A
N	K	E	C	A	H	L	A	B	E	I	N	U	T
E	L	A	G	A	H	S	S	E	Y	E	E	H	H
N	O	N	N	E	D	U	C	A	T	O	R	S	E
N	O	S	N	H	O	J	T	S	N	E	A	L	R
O	H	A	N	R	N	T	N	A	Y	R	B	U	I
L	C	B	B	I	N	P	H	T	A	M	A	A	N
G	S	O	J	G	A	O	B	E	T	H	U	N	E
M	I	M	I	H	G	N	I	K	L	M	U	R	A
L	L	A	B	T	E	K	S	A	B	Y	R	A	M
J	E	M	I	S	O	N	E	A	O	A	E	N	S

SPACE
 KOBE
 BRYANT
 JOHNSON
 EQUAL
 JEMISON
 MAE
 SHUTTLE
 EDUCATOR
 MLKING
 KATHERINE
 RIGHTS
 MATH
 BETHUNE
 MARY
 SCHOOL
 BASKETBALL
 NASA



Day # 2



Black History Exit Ticket

Answer each question with a complete sentence.

1. Who taught Malcolm about butterflies?

_____ taught Malcom about butterflies.

2. How did Malcom compare butterflies to people?

Malcom compared butterflies to people

Homework

Read the passage about Mae Jemison. Answer the questions in complete sentences.



Mae Carol Jemison was born in Decatur, Alabama, on October 17, 1956. She had three older siblings. Her mother taught English and Math, and her father worked keeping the building nice for a charity organization.

Mae knew she wanted to be a scientist of some kind since she was young. The TV series of Star Trek with black actress Nichelle Nichols inspired her to be an astronaut. She was the first black woman who went into space.

Why did Mae Jemison want to be a scientist?


Mae Jemison wanted to be a scientist because

Who was part of Mae Jemison's "family" and support?

_____ was a part of Mae Jemison's "family and Support.



Day # 3



Name _____ Week 23 Day 3 Date _____
BCCS-B RPI Siena Union

Black History Exit Ticket

Answer the following questions:

1. Who told the story about Rev. Dr. Martin Luther King, Jr. as a young man?

The story was told by _____.

2. Name two members of the young Martin's family:

1. _____


2. _____

Name _____ Week 23 Day 3 Date _____
BCCS-B RPI Siena Union

Homework (page 1 of 2)

Finish the picture by writing about what you would do to change our world:

I can dream like Rev. Dr. King. My dream is...




Color this quote from Rev. Dr. Martin Luther King, Jr.:





Day # 4



Name _____ Week 23 Day 4 Date _____
BCCS-B RPI Siena Union

Black History Exit Ticket

Answer the question and add a picture to support it:

What are two things that **you**, Malcolm X, Rev. Dr. Martin Luther King, Jr., and Jabari all have in common?

1. We all _____

2. We also _____

A way I can show this is:



Name _____ Week 23 Day 4 Date _____

BCCS-B

RPI

Siena

Union

Homework

Read the passage about Matthew Henson. Answer the questions in complete sentences.



Matthew Henson's parents were attacked by the Ku Klux Klan and other mean groups led by white people who terrorized black people after the Civil War.

Because they looked for safety, the Henson family sold their farm and moved to Georgetown. Matthew had an older sister and two younger sisters. Matthew's mother died when Matthew was 7 years old.


Matthew was inspired by Frederick Douglass, who inspired many blacks to become activists. Frederick Douglass was a man who escaped slavery and was famous for speaking in public. He inspired Matthew to continue to follow his dreams.

Who was part of Matthew Henson's "family" and support?

_____ was a part of Matthew Henson's family and support.



Day # 5



Read the passage below. Answer the questions.

Henry Box Brown


Henry Box Brown was a slave. He wanted to escape to be free. So Henry mailed himself in a wooden box. He went to Pennsylvania. Twenty-seven days later, he was there!



1. What was Henry Brown before he escaped?

2. How did he escape?

3. How long did it take Henry to get to Pennsylvania?



Name _____



1st Grade Modified ELA Remote Learning Packet

Week 24



Dear Educator,

My signature is proof that I have reviewed my scholar's work and supported him to the best of my ability to complete all assignments.


(Parent Signature)

(Date)

Parents please note that all academic packets are also available on our website at www.brighterchoice.org under the heading "Remote Learning." All academic packet assignments are mandatory and must be completed by all scholars.



Day # 1



Name: _____ Week 24 Day 1 Date: _____
BCCS-B RPI SIENA UNION

Astronomy (D6.W3.L1) Classwork

Directions: Circle the things scientist and astronauts both need to get to space.




Name: _____ Week 24 Day 1 Date: _____
BCCS-B RPI SIENA UNION

Astronomy (D6.W3.L1) Exit Ticket

Directions: What are three things scientist need to explore the moon?

- 1. _____
- 2. _____
- 3. _____



4. Who was the first astronaut to step on the moon?

Michael Collins

Neil Armstrong

Buzz Aldrin







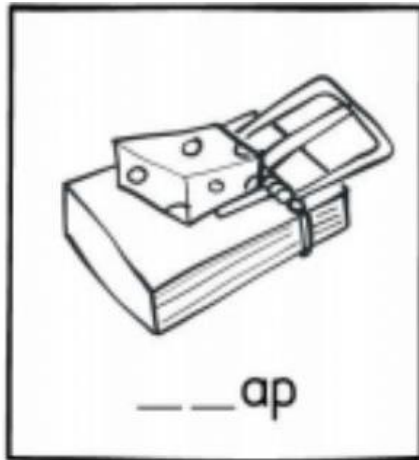

5. What did the astronauts bring back from the moon?

The astronauts brought back _____ from the moon.

Name: _____ Week 24 Day 1 Date: _____
BCCS-B RPI SIENA UNION


Homework

Directions: Write BR or TR for each picture.





Day # 2







Astronomy (D6.W3.L2) Classwork

Directions: Give facts about the inner planets.

The Inner Solar System

- the first four planets
- closest to the sun
- warmer
- made of rocks

Research and explain each.

<p>Mercury </p> <hr/> <hr/> <hr/> <hr/> <hr/> <hr/>	<p>Venus </p> <hr/> <hr/> <hr/> <hr/> <hr/> <hr/>
<p>Earth </p> <hr/> <hr/> <hr/> <hr/> <hr/> <hr/>	<p>Mars </p> <hr/> <hr/> <hr/> <hr/> <hr/> <hr/>

Name: _____ Week 24 Day 2 Date: _____
BCCS-B RPI SIENA UNION

Astronomy (D6.W3.L2) Exit Ticket

Directions: Label the first 4 planets from the sun.

Earth	Mars	Venus	Mercury
-------	------	-------	---------

The diagram shows the Sun on the left, with four planets in a row to its right. From left to right, the planets are: a small circle (Mercury), a circle with a grid pattern (Venus), a circle with continents (Earth), and a circle with a grid pattern (Mars). Below each planet is a rectangular box for labeling. The labels 'Earth', 'Mars', 'Venus', and 'Mercury' are written above the boxes. The Sun is on the left, and several stars are scattered in the background.

Name: _____ Week 24 Day 2 Date: _____







BCCS-B

RPI SIENA

UNION


Homework

Directions: Write the two letters that the picture begins with.

 _____ant	 _____lock	 _____im
 _____agon	 _____ate	 _____ake
 _____ar	 _____esent	 _____oon



Day # 3



Name: _____ Week 24 Day 3 Date: _____
BCCS-B RPI SIENA UNION

Astronomy (D6.W3.L3) Classwork

Directions: Give facts about the first two outer planets. Cross out the other planets.

JUPITER



SATURN



URANUS



NEPTUNE



Name: _____ Week 24 Day 3 Date: _____
BCCS-B RPI SIENA UNION

Astronomy (D6.W3.L3) Exit Ticket

Directions: Answers the questions.

1. Why are outer planets called the outer planets?

The outer planets are called outer planets because they _____

2. You can stand on an outer planet.

True

False

3. _____ is the biggest planet?

Earth

Jupiter

4. _____ has rings.

Saturn

Mars

Homework

Directions: Write the correct blends at the beginning of the word.

dr	fr	tr	br	cr
----	----	----	----	----



_____og




_____uck



_____um



_____ush



_____unk



_____op



_____uit



_____ink




_____ab



_____ee




Day # 4



Name: _____ Week 24 Day 4 Date: _____
BCCS-B RPI SIENA UNION

Astronomy (D6.W3.L4) Classwork

Directions: Complete the questions about Neptune.



Neptune is the _____ planet in line from the Sun.

Neptune has _____ moons.

Neptune has _____ rings.

Is Neptune a terrestrial or gaseous planet? _____

Have any spacecraft ever visited Neptune? _____

If so, how many? _____ Tell about one: _____

What gases primarily make up Neptune's atmosphere?

How long is 1 day on the planet Neptune? _____ Earth hours.

How long is 1 year on the planet Neptune? _____ Earth years.


Who are Neptune's moons named after? _____

Do you think humans will ever walk on Neptune? _____

Name: _____ Week 24 Day 4 Date: _____
BCCS-B RPI SIENA UNION

Astronomy (D6.W3.L4) Classwork

Directions: Complete the questions about Uranus.



Uranus is the _____ planet in line from the Sun.

Uranus has _____ moons.

Uranus has _____ rings.

Is Uranus a terrestrial or gaseous planet? _____

Have any spacecraft ever visited Uranus? _____

If so, how many? _____ Tell about one: _____

What gases primarily make up Uranus's atmosphere?

How long is one day on the planet Uranus? _____ Earth hours.

How long is 1 year on the planet Uranus? _____ Earth years.

Who are Uranus's moons named after? _____

Do you think humans will ever walk on Uranus? _____

Name: _____ Week 24 Day 4 Date: _____
BCCS-B RPI SIENA UNION

Astronomy (D6.W3.L4) Exit Ticket

Directions: Read the questions and answer.

1. What are outer planets made of?

The outer planets are made of _____

2. Neptune is the 2nd planet in the solar system.

- True
- False

3. _____ is the farthest planet from the sun?













- Neptune
- Venus

4. _____ has rings.

- Saturn
- Uranus


Homework

Directions: Circle the correct blend that matches the picture.

 st sm	 sp sl	 sl sw
 sn st	 sm sp	 st sc
 sw sp	 sk st	 sp sw
 sc st	 sp sn	 sl sm



Day # 5



Name: _____ Week 24 Day 5 Date: _____
BCCS-B RPI SIENA UNION

Homework

Directions: Write a response to the prompt below using 5 complete sentences.

When it's cold outside I like to...











Handwriting practice lines consisting of 15 horizontal lines, with the first five lines being solid and the remaining ten being dashed.

Name: _____ Week 24 Day 5 Date: _____
BCCS-B RPI SIENA UNION

Homework

Directions: Circle the beginning blend and write it on the line.

 _____ _____ own _____ cr br gr	 _____ _____ ice _____ fr tr pr	 _____ _____ um _____ dr fr br
 _____ _____ ee _____ cr pr tr	 _____ _____ og _____ fr pr gr	 _____ _____ ead _____ br fr pr
 _____ _____ ab _____ pr gr cr	 _____ _____ ape _____ dr br gr	