



Name \_\_\_\_\_

22

# Kindergarten Homework Remote Learning Packet

## Week 22



Dear Educator,

My signature is proof that I have reviewed my scholar's work and supported him to the best of my ability to complete all assignments.

\_\_\_\_\_  
(Parent Signature)


\_\_\_\_\_  
(Date)

Parents please note that all academic packets are also available on our website at [www.brighterchoice.org](http://www.brighterchoice.org) under the heading "Remote Learning." All academic packet assignments are mandatory and must be completed by all scholars.



# Day # 1

**February Break**






Name \_\_\_\_\_ Week 22 Day 1 Date: \_\_\_\_\_

BCCS-B

SUNY Cortland SUNY Morrisville

**Directions:** Circle the object that is heavier.

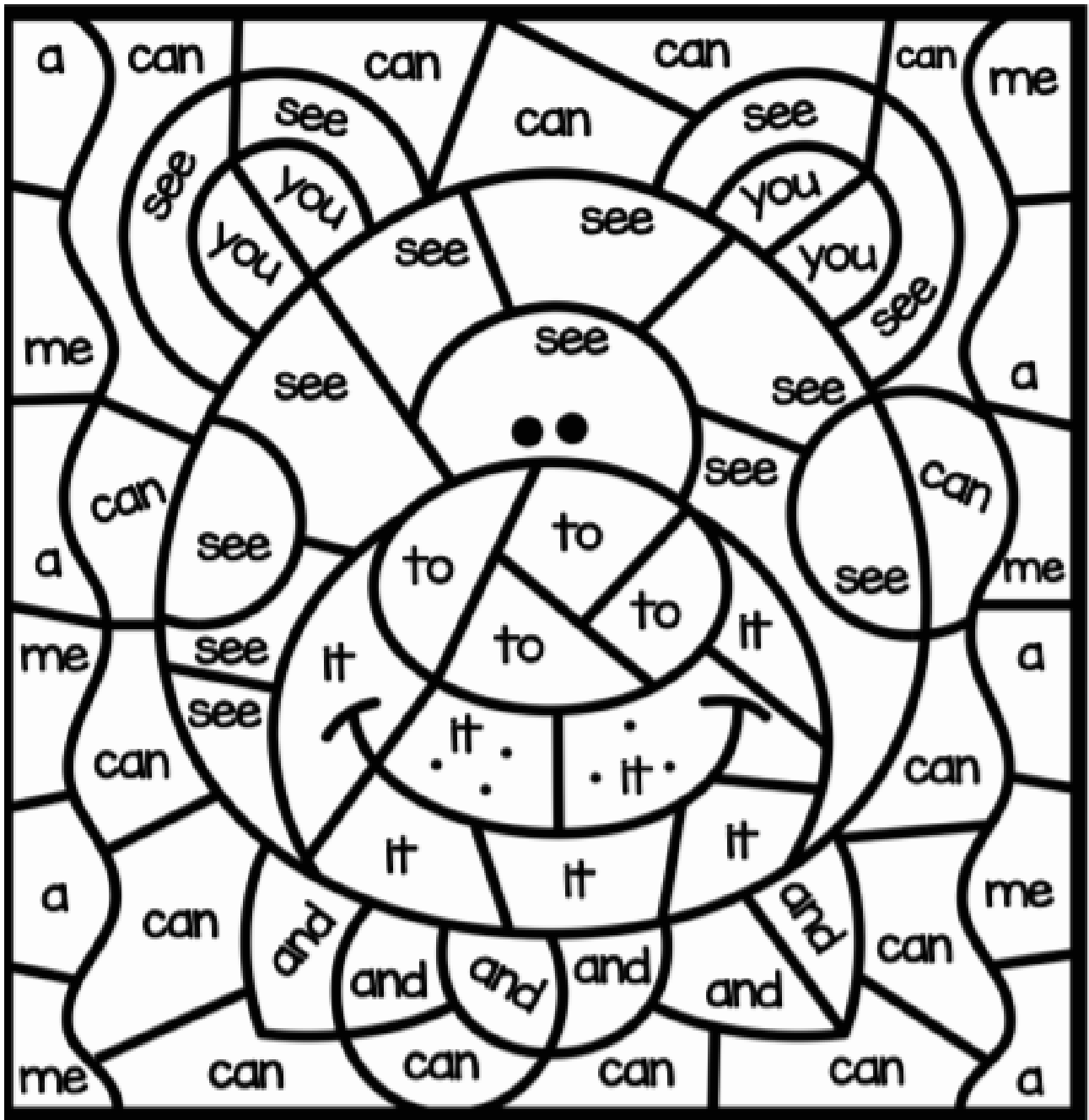


Name \_\_\_\_\_ Week 22 Day 1 Date: \_\_\_\_\_

BCCS-B

SUNY Cortland SUNY Morrisville

Directions: Use the color code at the bottom of the page to color the sight words.



©primary playground


- |   |   |   |   |
|---|---|---|---|
|  a   |  me  |  to  |  you |
|  see |  and |  can |  it  |

Name \_\_\_\_\_ Week 22 Day 1 Date: \_\_\_\_\_

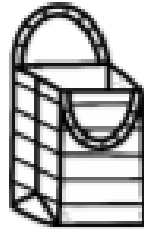
BCCS-B

SUNY Cortland SUNY Morrisville

Directions: Write the missing middle sound. **a, e, i, o, u**



c b



b g



l g



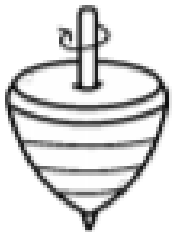
b x



l d



c t



t p




h n



# Day # 2

**February Break**











Name \_\_\_\_\_ Week 22 Day 2 Date: \_\_\_\_\_

BCCS-B

SUNY Cortland SUNY Morrisville

**Directions:** Look at the patterns. Color the shape that comes next in the pattern.











Name \_\_\_\_\_ Week 22 Day 2 Date: \_\_\_\_\_

BCCS-B

SUNY Cortland SUNY Morrisville


**Directions:** Color the ending sound to go with each picture.

	t d g		s n r
	e u d		k f n
	r a y		m d e



# Day # 3

**February Break**


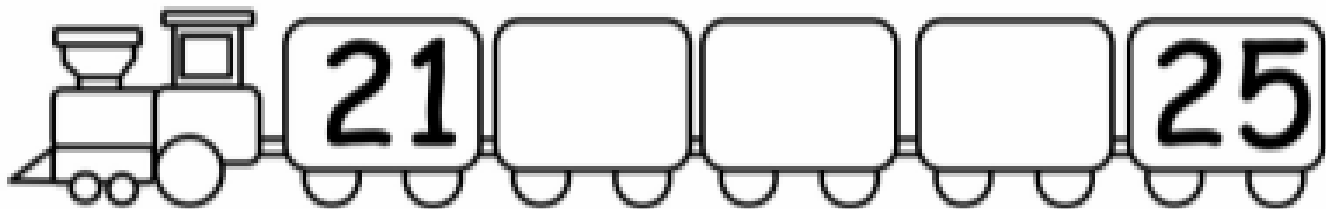






Name \_\_\_\_\_ Week 22 Day 3 Date: \_\_\_\_\_

BCCS-B

SUNY Cortland SUNY Morrisville

**Directions:** fill in the missing numbers.




Name \_\_\_\_\_ Week 22 Day 3 Date: \_\_\_\_\_

BCCS-B

SUNY Cortland SUNY Morrisville

**Directions:** Use the code to color the sight words.



Name \_\_\_\_\_ Week 22 Day 3 Date: \_\_\_\_\_

BCCS-B

SUNY Cortland SUNY Morrisville


**Directions:** Fill in the missing letters.



y \_ m



b \_ t



f \_ x



n \_ t



b \_ g



b \_ n



r \_ t




r \_ b



Brighter Choice  
Charter School for Boys

# Day # 4

February Break

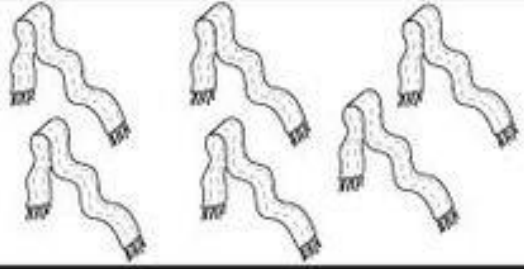
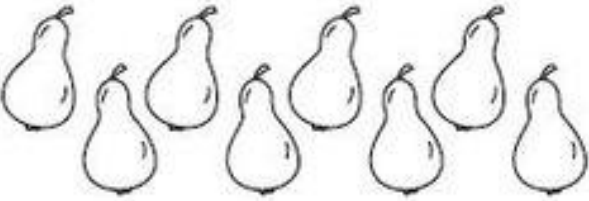





Name \_\_\_\_\_ Week 22 Day 4 Date: \_\_\_\_\_

BCCS-B

SUNY Cortland SUNY Morrisville

**Directions:** Count the pictures, circle the correct number. Then color the ten frames to match the number of objects.

	6 10 8	<table border="1"><tbody><tr><td></td><td></td><td></td><td></td><td></td></tr><tr><td></td><td></td><td></td><td></td><td></td></tr></tbody></table>										
	9 7 8	<table border="1"><tbody><tr><td></td><td></td><td></td><td></td><td></td></tr><tr><td></td><td></td><td></td><td></td><td></td></tr></tbody></table>										
	8 6 10	<table border="1"><tbody><tr><td></td><td></td><td></td><td></td><td></td></tr><tr><td></td><td></td><td></td><td></td><td></td></tr></tbody></table>										
	7 6 9	<table border="1"><tbody><tr><td></td><td></td><td></td><td></td><td></td></tr><tr><td></td><td></td><td></td><td></td><td></td></tr></tbody></table>										
	6 8 7	<table border="1"><tbody><tr><td></td><td></td><td></td><td></td><td></td></tr><tr><td></td><td></td><td></td><td></td><td></td></tr></tbody></table>										



©PlanesAndBalloons.com

Name \_\_\_\_\_ Week 22 Day 4 Date: \_\_\_\_\_

BCCS-B

SUNY Cortland SUNY Morrisville

**Directions:** Build the words by writing each letter in a marshmallow.





Name \_\_\_\_\_ Week 22 Day 4 Date: \_\_\_\_\_


BCCS-B

SUNY Cortland SUNY Morrisville

**Directions:** Use the code to color the sight words.

# Sight Words


and - black	that - green
his - red	for - brown
she - blue	





# Day # 5

**February Break**

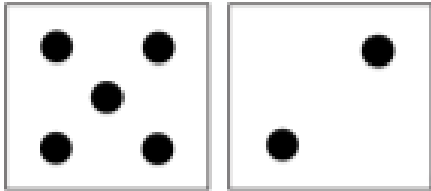
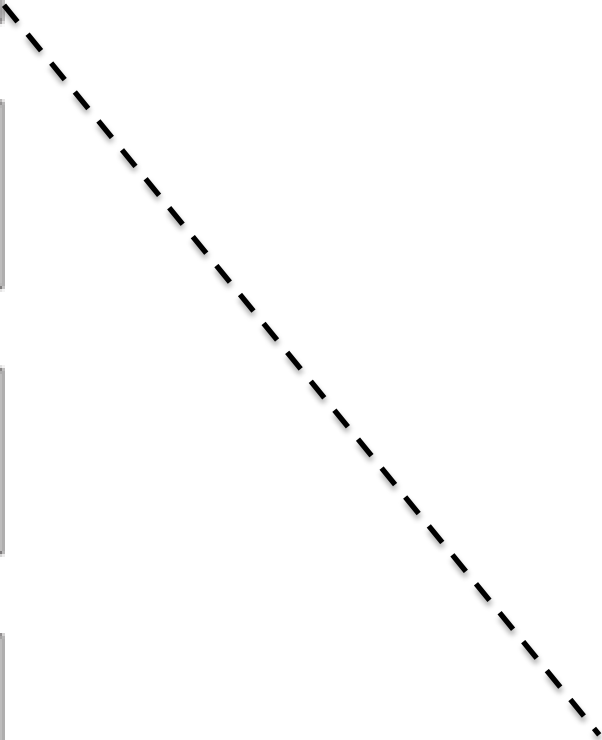
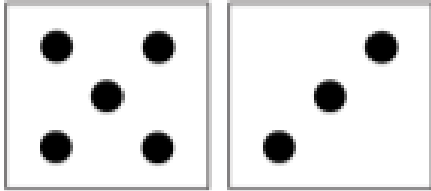






Name \_\_\_\_\_ Week 22 Day 5 Date: \_\_\_\_\_

BCCS-B

SUNY Cortland SUNY Morrisville

**Directions:** Count the dots and match the dots to the correct number.











		9
		4
		3
		7
		5
		8

Name \_\_\_\_\_ Week 22 Day 5 Date: \_\_\_\_\_

BCCS-B

SUNY Cortland SUNY Morrisville

**Directions:** Read each sentence and color the matching picture.


I see the bag.		
I see the tag.		
I see the fan.		
I see the van.		
I see the can.		

Name \_\_\_\_\_ Week 22 Day 5 Date: \_\_\_\_\_


BCCS-B

SUNY Cortland SUNY Morrisville

**Directions:** Write the missing letters.



f \_ x



d \_ m



d \_ n



k \_ d



w \_ n



f \_ g



f \_ x



g \_ m



Name \_\_\_\_\_

23

# Kindergarten Homework Remote Learning Packet

## Week 23



Dear Educator,

My signature is proof that I have reviewed my scholar's work and supported him to the best of my ability to complete all assignments.


\_\_\_\_\_  
(Parent Signature)

\_\_\_\_\_  
(Date)

Parents please note that all academic packets are also available on our website at [www.brighterchoice.org](http://www.brighterchoice.org) under the heading "Remote Learning." All academic packet assignments are mandatory and must be completed by all scholars.



**Day # 1**




Name \_\_\_\_\_ Week 23 Day 1 Date: \_\_\_\_\_

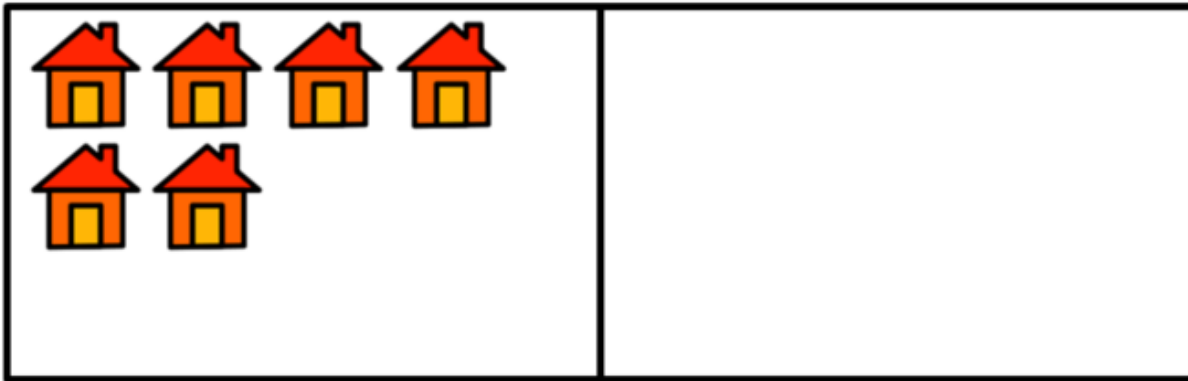
BCCS-B

SUNY Cortland SUNY Morrisville


**Directions:** Count the birds. In the next box, draw the same number of nests as birds.



Count the houses. In the next box, draw the same number of trees as houses.



Count the monkeys. In the next box, draw the same number of bananas as monkeys.





Name \_\_\_\_\_ Week 23 Day 1 Date: \_\_\_\_\_

BCCS-B

SUNY Cortland SUNY Morrisville

**Directions:** Trace the letter **U**.

U u



umbrella

U U U U U U

U U U U U U

U U U U U U

u u u u u u

u u u u u u

Name \_\_\_\_\_ Week 23 Day 1 Date: \_\_\_\_\_

BCCS-B

SUNY Cortland SUNY Morrisville

**Directions:** Read and color the word that matches the picture.

1. The \_\_\_\_\_ can fly.

cat

bird



2. This is a \_\_\_\_\_.

fish

bat



3. The \_\_\_\_\_ is yellow.

cat

dog



4. The \_\_\_\_\_ is wet.

frog

dog



5. The \_\_\_\_\_ is little.


big


pig





**Day # 2**






How many cats?

Draw a ball for every cat and 1 more ball.

How many balls?



How many elephants?

Draw a peanut for every elephant and 1 more peanut.

How many peanuts?

Name \_\_\_\_\_ Week 23 Day 2 Date: \_\_\_\_\_

BCCS-B

SUNY Cortland SUNY Morrisville

**Directions:** Trace and write the word **as**.

as as \_\_\_\_\_

\_\_\_\_\_  
\_\_\_\_\_

as as \_\_\_\_\_

\_\_\_\_\_  
\_\_\_\_\_

as as \_\_\_\_\_

\_\_\_\_\_  
\_\_\_\_\_

as as \_\_\_\_\_

\_\_\_\_\_  
\_\_\_\_\_



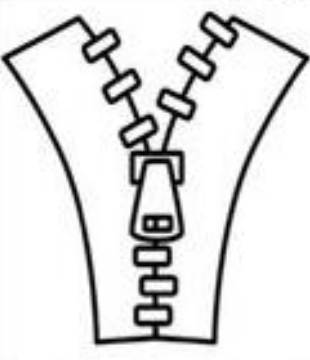






as as \_\_\_\_\_

Name \_\_\_\_\_ Week 23 Day 2 Date: \_\_\_\_\_

BCCS-B


SUNY Cortland SUNY Morrisville

**Directions:** Circle the word that matches the picture. Write the word on the line.

	big bag		pin pan		zap zip
	kid kit		can cat		mug mop
	hog hot		dip dig		tip top



**Day # 3**





Name \_\_\_\_\_ Week 23 Day 3 Date: \_\_\_\_\_


BCCS-B


SUNY Cortland SUNY Morrisville

**Directions:** Count the set of objects, and write how many in the box. Draw a set of circles that has 1 less, and write how many in the box.

	<input data-bbox="625 493 803 682" type="text"/>	<input data-bbox="1307 493 1485 682" type="text"/>
---	--	--

	<input data-bbox="625 829 803 1018" type="text"/>	<input data-bbox="1307 829 1485 1018" type="text"/>
--	---	---

	<input data-bbox="625 1186 803 1375" type="text"/>	<input data-bbox="1307 1186 1485 1375" type="text"/>
---	--	--

	<input data-bbox="625 1543 803 1732" type="text"/>	<input data-bbox="1307 1543 1485 1732" type="text"/>
---	--	--



Name \_\_\_\_\_ Week 23 Day 3 Date: \_\_\_\_\_

BCCS-B

SUNY Cortland SUNY Morrisville

**Directions:** Trace and write the word **but**.






but	but	
but	but	
but	but	
but	but	
but	but	
but	but	

Name \_\_\_\_\_ Week 23 Day 3 Date: \_\_\_\_\_

BCCS-B


SUNY Cortland SUNY Morrisville

**Directions:** Read the word. Write the word and color the matching picture.

bat	<hr/> <hr/> <hr/>	
ham	<hr/> <hr/> <hr/>	
tag	<hr/> <hr/> <hr/>	
can	<hr/> <hr/> <hr/>	
map	<hr/> <hr/> <hr/>	



**Day # 4**





Name \_\_\_\_\_ Week 23 Day 4 Date: \_\_\_\_\_



BCCS-B

SUNY Cortland SUNY Morrisville



**Directions:** Count the objects in each line. Write how many in the box. Then, fill in the blanks below.

	<input type="text"/>
	<input type="text"/>

\_\_\_\_\_ is more than \_\_\_\_\_.

	<input type="text"/>
	<input type="text"/>

\_\_\_\_\_ is more than \_\_\_\_\_.

	<input type="text"/>
	<input type="text"/>

\_\_\_\_\_ is more than \_\_\_\_\_.

Name \_\_\_\_\_ Week 23 Day 4 Date: \_\_\_\_\_

BCCS-B

SUNY Cortland SUNY Morrisville

**Directions:** Trace and write the word **what**.

what what \_\_\_\_\_

what what \_\_\_\_\_

what what \_\_\_\_\_

what what \_\_\_\_\_












what what \_\_\_\_\_

Name \_\_\_\_\_ Week 23 Day 4 Date: \_\_\_\_\_

BCCS-B


SUNY Cortland SUNY Morrisville

**Directions:** Look at the box in each row, then draw a circle around the picture that does not begin with the sound in the box.

i			
j			
k			
l			
m			
n			



**Day # 5**



Name \_\_\_\_\_ Week 23 Day 5 Date: \_\_\_\_\_

BCCS-B

SUNY Cortland

SUNY Morrisville

**Directions:** Match the objects to the correct number.



4



3




5



1



2





Name \_\_\_\_\_ Week 23 Day 5 Date: \_\_\_\_\_

BCCS-B

SUNY Cortland SUNY Morrisville

**Directions:** Trace and write the word **all**.

all all \_\_\_\_\_

all all \_\_\_\_\_

all all \_\_\_\_\_

all all \_\_\_\_\_

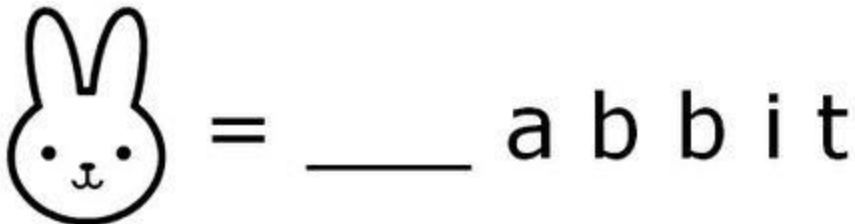
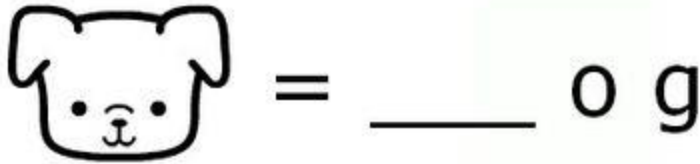
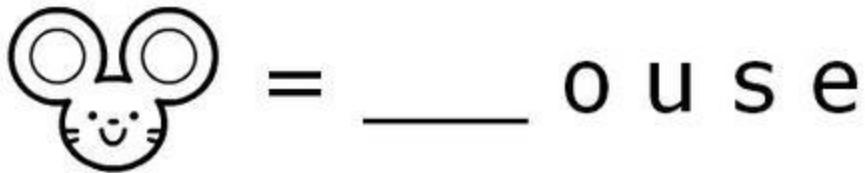
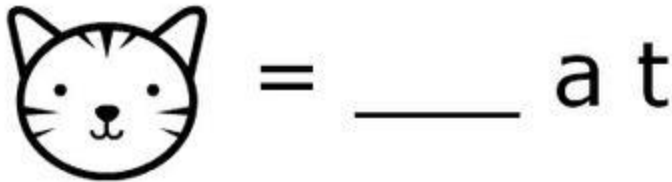
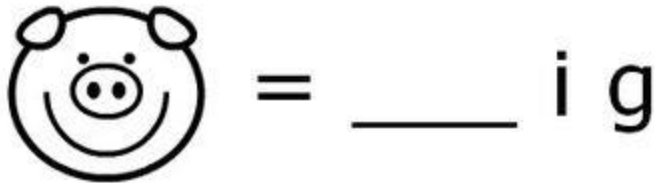
all all \_\_\_\_\_

Name \_\_\_\_\_ Week 23 Day 5 Date: \_\_\_\_\_

BCCS-B

SUNY Cortland SUNY Morrisville

**Directions:** Fill in the missing beginning sound.



# Kindergarten Homework Remote Learning Packet

## Week 24



Dear Educator,

My signature is proof that I have reviewed my scholar's work and supported him to the best of my ability to complete all assignments.


\_\_\_\_\_  
(Parent Signature)

\_\_\_\_\_  
(Date)

Parents please note that all academic packets are also available on our website at [www.brighterchoice.org](http://www.brighterchoice.org) under the heading "Remote Learning." All academic packet assignments are mandatory and must be completed by all scholars.



**Day # 1**



Name \_\_\_\_\_ Week 24 Day 1 Date: \_\_\_\_\_

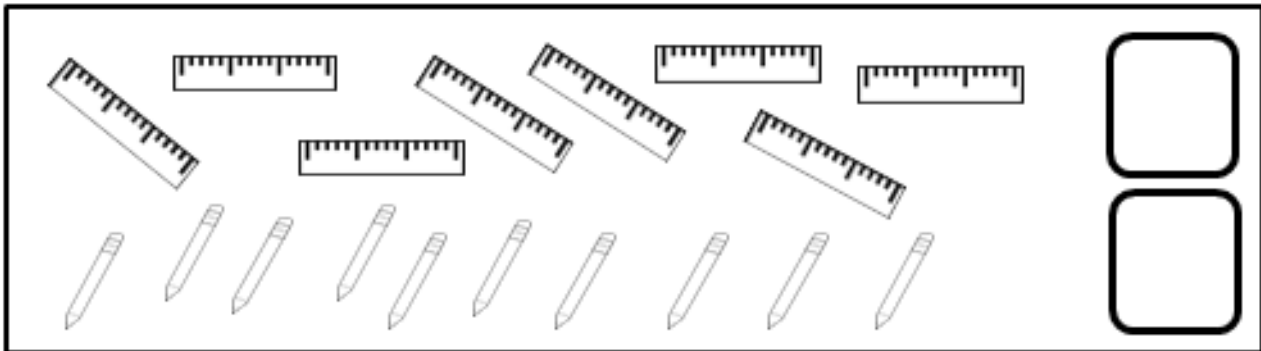
BCCS-B

SUNY Cortland SUNY Morrisville

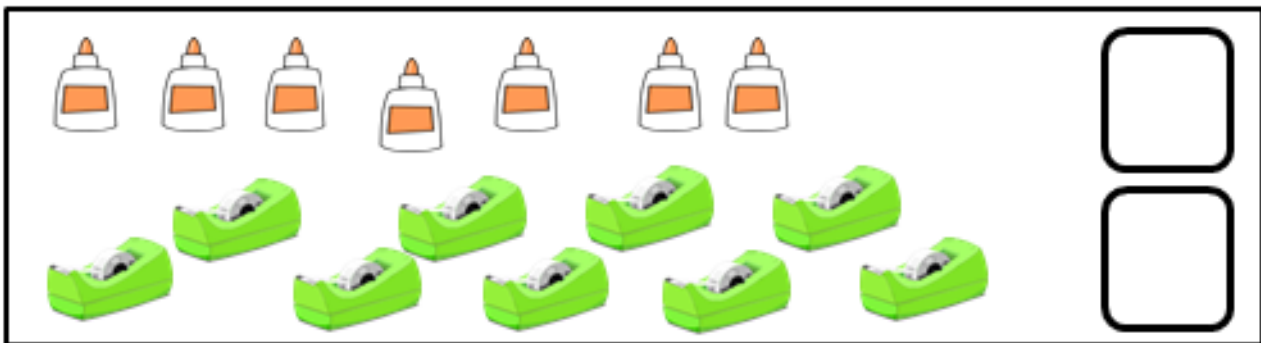
**Directions:** Count the objects in each line. Write how many in the box. Then, fill in the blanks below.



\_\_\_\_\_ is less than \_\_\_\_\_.



\_\_\_\_\_ is less than \_\_\_\_\_.



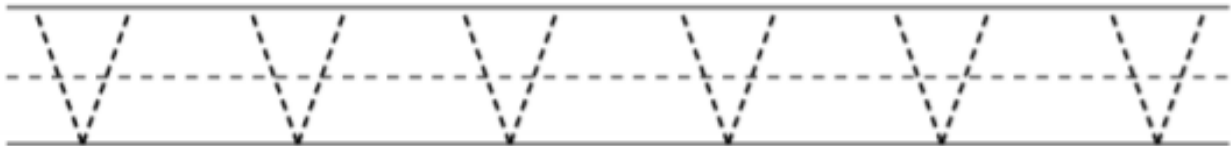

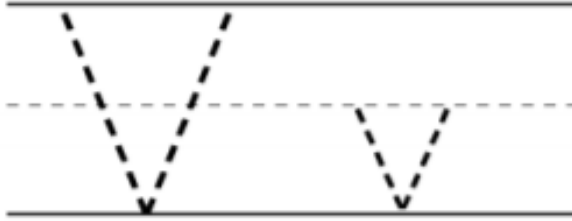
\_\_\_\_\_ is less than \_\_\_\_\_.

Name \_\_\_\_\_ Week 24 Day 1 Date: \_\_\_\_\_

BCCS-B

SUNY Cortland SUNY Morrisville

**Directions:** Trace the letter V.


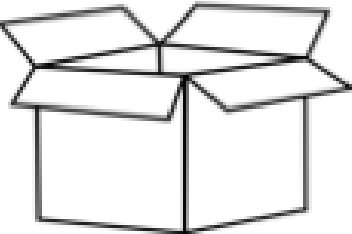




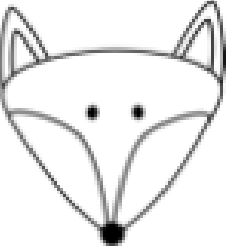




Name \_\_\_\_\_ Week 24 Day 1 Date: \_\_\_\_\_

BCCS-B


SUNY Cortland SUNY Morrisville

**Directions:** Look at the picture in each box. Say the name. Write the word.

 <input type="text"/> <input type="text"/> <input type="text"/>	 <input type="text"/> <input type="text"/> <input type="text"/>	 <input type="text"/> <input type="text"/> <input type="text"/>
 <input type="text"/> <input type="text"/> <input type="text"/>	 <input type="text"/> <input type="text"/> <input type="text"/>	 <input type="text"/> <input type="text"/> <input type="text"/>
 <input type="text"/> <input type="text"/> <input type="text"/>	 <input type="text"/> <input type="text"/> <input type="text"/>	 <input type="text"/> <input type="text"/> <input type="text"/>



**Day # 2**






Name \_\_\_\_\_ Week 24 Day 2 Date: \_\_\_\_\_

BCCS-B

SUNY Cortland SUNY Morrisville

Draw a tower with more cubes.


\_\_\_\_\_ is more than \_\_\_\_\_.



Draw a tower with fewer cubes.

\_\_\_\_\_ is more than \_\_\_\_\_.

\_\_\_\_\_ is less than \_\_\_\_\_.



Draw a train with more cubes.

\_\_\_\_\_ is more than \_\_\_\_\_.

\_\_\_\_\_ is less than \_\_\_\_\_.



Name \_\_\_\_\_ Week 24 Day 2 Date: \_\_\_\_\_

BCCS-B

SUNY Cortland SUNY Morrisville

**Directions:** Trace and write the word were.

were

were

\_\_\_\_\_

\_\_\_\_\_

\_\_\_\_\_

\_\_\_\_\_

were

were

\_\_\_\_\_

\_\_\_\_\_

\_\_\_\_\_

\_\_\_\_\_

were

were

\_\_\_\_\_

\_\_\_\_\_

\_\_\_\_\_

\_\_\_\_\_

were

were

\_\_\_\_\_

\_\_\_\_\_

\_\_\_\_\_

\_\_\_\_\_

were

were

\_\_\_\_\_

\_\_\_\_\_

\_\_\_\_\_










\_\_\_\_\_

Name \_\_\_\_\_ Week 24 Day 2 Date: \_\_\_\_\_

BCCS-B


SUNY Cortland SUNY Morrisville

Directions: Draw a line from the word to the matching picture.

jet rip cab	  
hat pin dog	  
wig pen mud	  



**Day # 3**



Name \_\_\_\_\_ Week 24 Day 3 Date: \_\_\_\_\_

BCCS-B

SUNY Cortland SUNY Morrisville

**Directions:** Visualize the number in set A and set B. Write the number in the sentences.



Set A



Set B


\_\_\_\_\_ is more than \_\_\_\_\_.

\_\_\_\_\_ is less than \_\_\_\_\_.

---



Set A



Set B

\_\_\_\_\_ is more than \_\_\_\_\_.

\_\_\_\_\_ is less than \_\_\_\_\_.

Name \_\_\_\_\_ Week 24 Day 3 Date: \_\_\_\_\_

BCCS-B

SUNY Cortland SUNY Morrisville

**Directions:** Trace and write the word **there**.

there

there

there

there

there

there

there

there

there







there

Name \_\_\_\_\_ Week 24 Day 3 Date: \_\_\_\_\_

BCCS-B


SUNY Cortland SUNY Morrisville

**Directions:** Color the pictures. Unscramble to words to match the picture.

	mta	_____ _____ _____
	sub	_____ _____ _____
	pma	_____ _____ _____
	atb	_____ _____ _____
	ewb	_____ _____ _____
	npa	_____ _____ _____



**Day # 4**





Name \_\_\_\_\_ Week 24 Day 4 Date: \_\_\_\_\_

BCCS-B

SUNY Cortland SUNY Morrisville

**Directions:** Draw a line from each container to the word that describes the amount of liquid the container is holding.

The image contains 10 containers and 3 labels. The containers are arranged in two columns. The labels are in the center. A dashed line connects the test tube to the 'Not Full' label.

Container	Label
Test tube (1/4 full blue liquid)	Full
Mug (3/4 full brown liquid)	Not Full
Shallow dish (1/2 full teal liquid)	Empty
Round-bottom flask (3/4 full cyan liquid)	Full
Fishbowl (2/3 full blue water, 2 orange fish, bubbles)	Not Full
Empty flask	Empty
Beaker (empty)	Full
Round-bottom flask (1/2 full magenta liquid)	Not Full
Empty flask	Full
Test tube (empty)	Not Full

Name \_\_\_\_\_ Week 24 Day 4 Date: \_\_\_\_\_

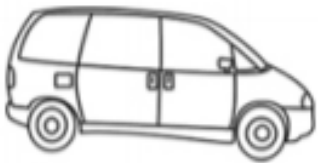
BCCS-B

SUNY Cortland SUNY Morrisville

**Directions:** Trace the words that begin with **V**.



vase



van



vulture



volcano

Name \_\_\_\_\_ Week 24 Day 4 Date: \_\_\_\_\_

BCCS-B

SUNY Cortland SUNY Morrisville

Directions: Draw a line to match the word with the picture. Write the word.

cat



\_\_\_\_\_

cap



cat

tub



\_\_\_\_\_

pen



\_\_\_\_\_

lip



\_\_\_\_\_

fox



\_\_\_\_\_


tap



\_\_\_\_\_



**Day # 5**

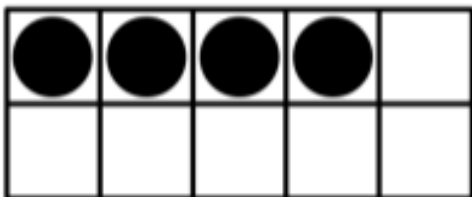
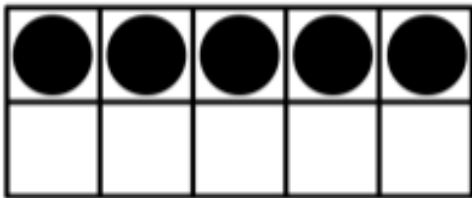
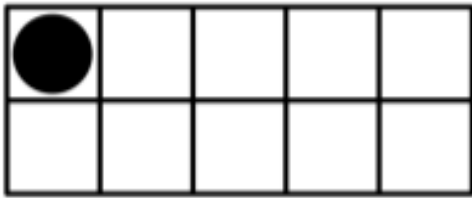
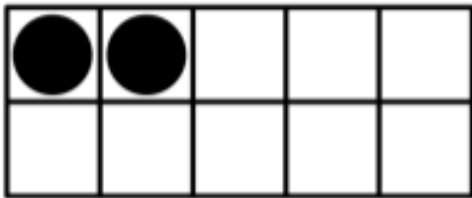
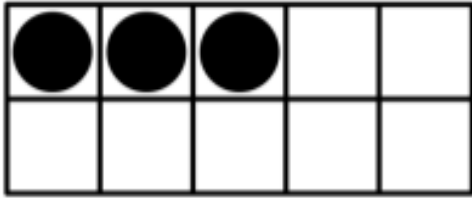


Name \_\_\_\_\_ Week 24 Day 5 Date: \_\_\_\_\_

BCCS-B

SUNY Cortland SUNY Morrisville

**Directions:** Match the dots to the correct number amount.




4

3

5

1

2



Name \_\_\_\_\_ Week 24 Day 5 Date: \_\_\_\_\_

BCCS-B

SUNY Cortland SUNY Morrisville

**Directions:** Trace and write the word **were**.



were



w

w e r e

were








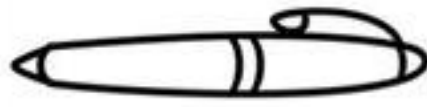

We \_\_\_\_\_ at the  
beach yesterday.

Name \_\_\_\_\_ Week 24 Day 5 Date: \_\_\_\_\_

BCCS-B

SUNY Cortland SUNY Morrisville

**Directions:** Unscramble to words to match the picture.

 <div data-bbox="194 577 479 672">dbe</div> <hr/> <hr/> <hr/>	 <div data-bbox="657 577 941 672">ned</div> <hr/> <hr/> <hr/>	 <div data-bbox="1120 577 1404 672">ewb</div> <hr/> <hr/> <hr/>
 <div data-bbox="194 1050 479 1144">enh</div> <hr/> <hr/> <hr/>	 <div data-bbox="657 1050 941 1144">rde</div> <hr/> <hr/> <hr/>	 <div data-bbox="1120 1050 1404 1144">nte</div> <hr/> <hr/> <hr/>
 <div data-bbox="194 1533 479 1627">twe</div> <hr/> <hr/> <hr/>	 <div data-bbox="657 1533 941 1627">enp</div> <hr/> <hr/> <hr/>	 <div data-bbox="1120 1533 1404 1627">net</div> <hr/> <hr/> <hr/>