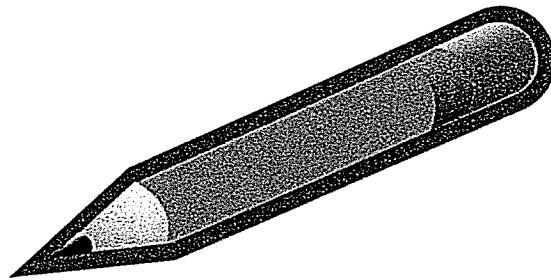


Kindergarten Work Packet Trimester 2



February 8th, 2021 – February 12th, 2021

Name: _____

Sight Words

little


who

too

KRF2: I can identify the main idea and share key details .

Describe It!

After reading a non-fiction text describe the main topic. Write or draw the main topic in the center bubble and then describe the main topic in the outer bubbles.



KR8: I can use a graphic organizer to describe Ruby Bridges.

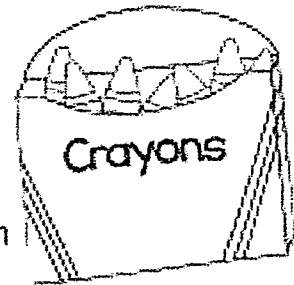
Ruby
Bridges

Names _____

© 2016 Great Minds[®]. Kindergarten Science

KRF2: I can identify th and ch pictures.

CH and TH Color




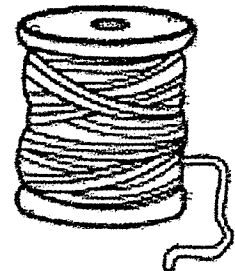



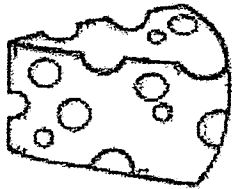


Direction: Color all words that start with Ch red and Th blue.

Ch



Th



Match the picture to the sound!



TH




CH



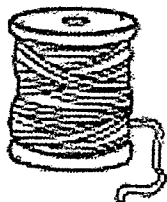
SH



TH



CH


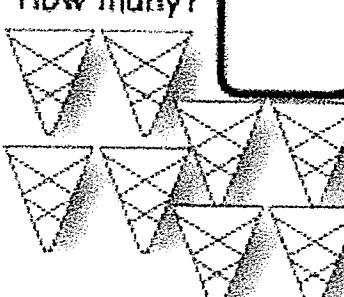




SH

KCC4c,6,7,KMD2: I can make a set that has 1 less.

Lesson 3.24 Practice Page #2

Name _____

<p>How many?</p>  <p>□</p>	<p>Draw a set of eggs that has 1 less. How many eggs?</p> <p>□</p>
<p>How many?</p>  <p>□</p>	<p>Draw a set of ice cream scoops that has 1 less. How many ice cream scoops?</p> <p>□</p>
<p>How many?</p>  <p>□</p>	<p>Draw a set of raindrops that has 1 less. How many raindrops?</p> <p>□</p>
<p>How many?</p>  <p>□</p>	<p>Draw a set of bananas that has 1 less. How many bananas?</p> <p>□</p>


KCC4c,6,7,KMD2: I can make a set that has 1 less.

Exit Ticket 3.24

Name _____

Date _____

How many?




Draw a set of hay bales that has 1 less.
How many hay bales?

Name: _____

OPINION WRITING

Pancakes



What is your opinion about
Pancakes? Do you like pancakes?

I think pancakes

★ I used capital letters.

★ I used spaces.

★ I used punctuation.

KR7: I can match the illustrations to text.

Ruby Bridges TIMELINE

Ruby went to a school for African American children. A new law changed things.

Ruby went to an all white school. U.S. Marshals had to walk her to school.

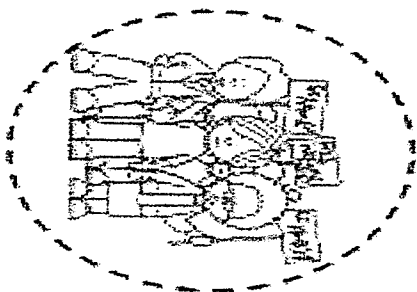
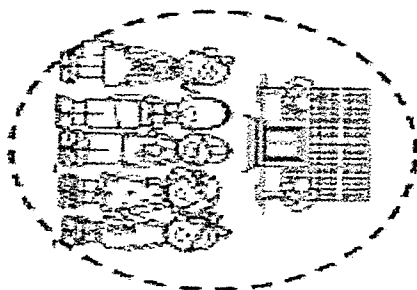
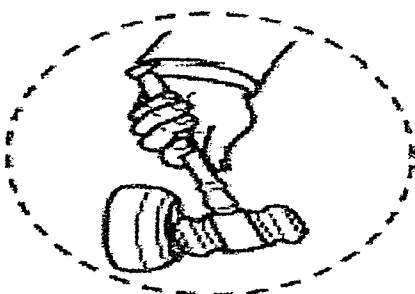
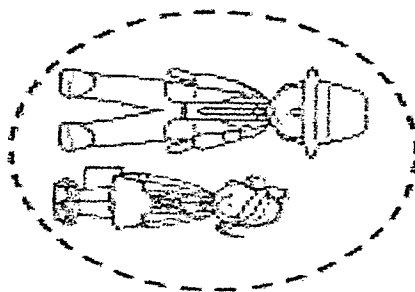
Many people protested by yelling at Ruby and standing outside the school.

Things changed. Many black and white children began going to school together.

Items

© 2015 Great Minds[®]. All rights reserved.

KR7: I can match illustrations and text.



Date: 2—9-2021

KW1: I can state and write
my opinion.

Do you think Ruby was brave?

Handwriting practice lines consisting of a solid top line, a dashed middle line, and a solid bottom line, repeated multiple times.

KR5. I can describe features of non-fiction books.

Name _____

Fiction

Fiction

A book that is made-up by the author, and is NOT TRUE.

How is Bear Snores On fiction?

Handwriting practice lines consisting of four sets of solid top and bottom lines with a dashed middle line.



I'm a little bear cub

Soft and brown

Here is my den

Where I can be found

When the winter's over


Hear me shout

"Spring is here,

It's time to come out"!

By Michele Snyder

Sing to the tune of "I'm A Little Teardrop"







KCC4c, 6, 7. I can match and count to compare a number of objects. State which is more.

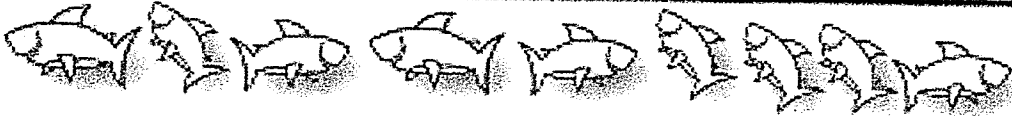

Lesson 3.25 Practice Page #1



Name _____

Count the sets and write how many. Color the set with more. Then, fill in the blanks.

	<input type="text"/>
	<input type="text"/>
_____ is more than _____	

	<input type="text"/>
	<input type="text"/>
_____ is more than _____	

	<input type="text"/>
	<input type="text"/>
_____ is more than _____	

	<input type="text"/>
	<input type="text"/>
_____ is more than _____	

Date: 2—9-2021

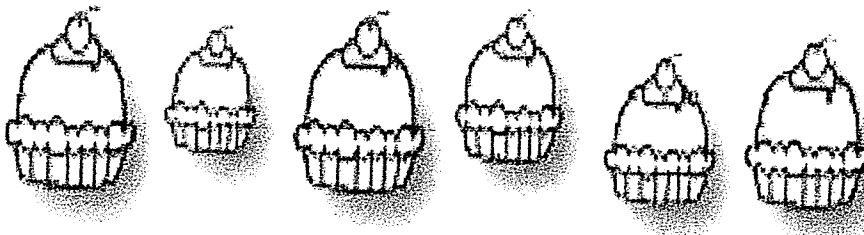
KCC4c, 6, 7. I can match and count to compare a number of objects. State which is more.

Exit Ticket 3.25

Name _____

Date _____

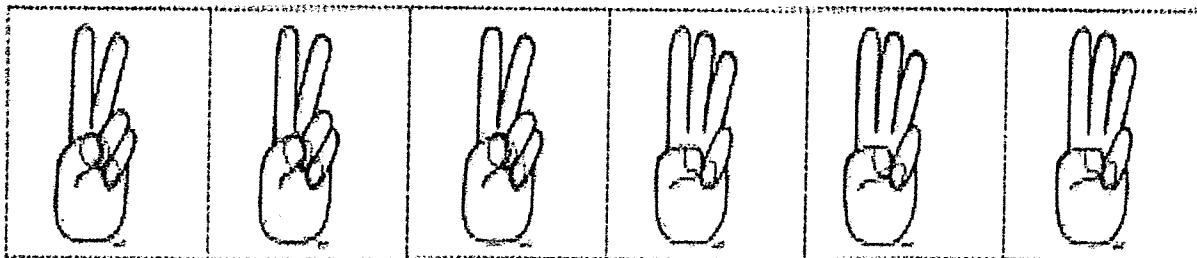




Count the objects in each line. Write how many in the box. Fill in the blanks.



_____ is more than _____

Name _____

I can count the sounds I hear!



KW1: I can write and state my opinion.


Name:

Date:

Today is: Monday Tuesday Wednesday Thursday
Friday Saturday Sunday

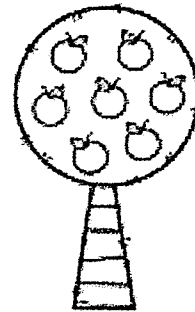
OPINION WRITING

Would you rather plant flowers or fruits in your garden?



flowers

or



fruits

I would rather



I used capital letters.



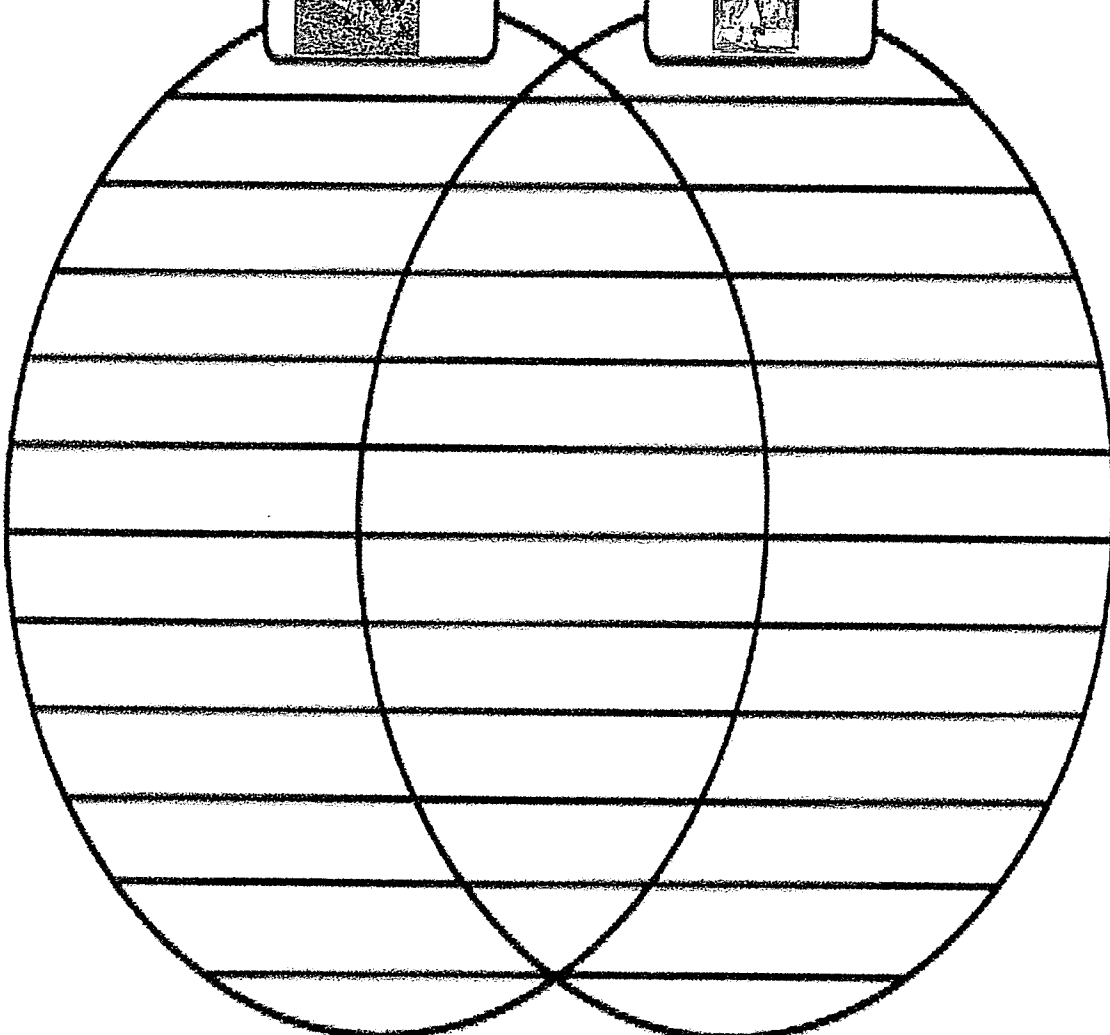
I used spaces.



I used punctuation.

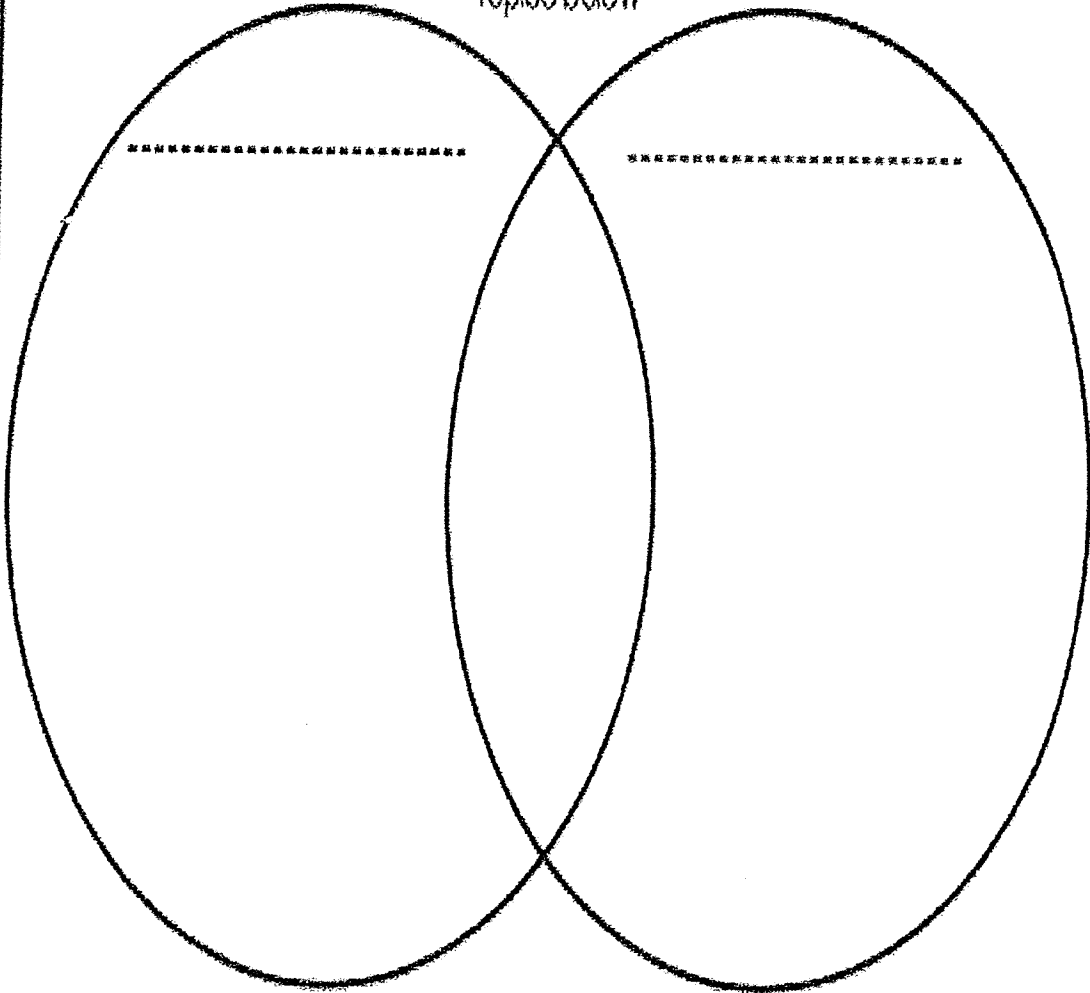
Name: _____

COMPARE & CONTRAST



Compare & Contrast

After reading a non-fiction text about two topics, compare and contrast the topics below



A Little Brown Bear

A little brown bear,
Went in search for some honey.
Isn't it funny,
A bear wanting honey?

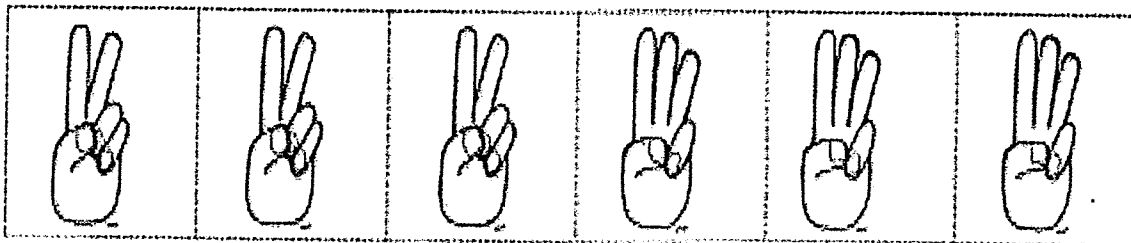
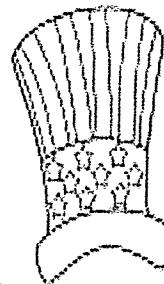
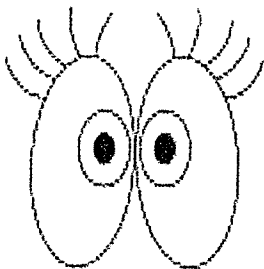
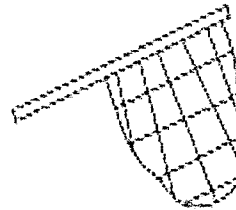



He sniffed at the breeze,
And he listened for bees.
And, would you believe it,
He even climbed trees!



KRF2d: I can hear and count sound.

Name _____

I can count the sounds I hear!







KCC4c, 6, 7: I can match and count to compare two sets of objects. State which quantity is less.

Lesson 3.26 Practice Page #2

Pet Fun!

Name _____

Count and write how many. Draw a set with less. Write the number and fill in the sentence.

	<input type="text"/>
<input type="text"/>	<input type="text"/>
_____ is less than _____	
	<input type="text"/>
<input type="text"/>	<input type="text"/>
_____ is less than _____	
	<input type="text"/>
<input type="text"/>	<input type="text"/>
_____ is less than _____	
	<input type="text"/>
<input type="text"/>	<input type="text"/>
_____ is less than _____	

KCC4c, 6, 7: I can match and count to compare two sets of objects. State which quantity is less.

Exit Ticket 3.26

Name _____

Date _____

Count the objects in each line. Write how many in the box. Fill in the blanks.


The first row contains 7 pig faces. To the right of this row is an empty rounded rectangular box.

The second row contains 6 bear faces. To the right of this row is an empty rounded rectangular box.


..... is less than

Name _____

Opinion Writing



or



Do you like camping or a water park?

I like

because

Date: 2-11-2021

KR9: I can make a self-to-text connection.

I Am Enough

Name:



I love me because

**KR9: I can make a self-to-text.
connection**

Text-to-Self Connection

Name: _____

Book Title: _____

<p>The part in the story...</p> 	<p>Reminds me of the time...</p> 
--	---

©2010 by Linda Ward Beech

The Love Bug

Do you know the little Love Bug?

The little Love Bug,

the little Love Bug.

Do you know the little Love Bug?

Who comes on


Valentine's Day!













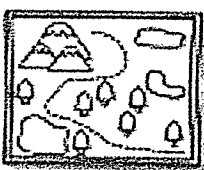



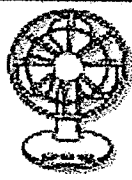



Sung to:
The Muffin Man

KRF2d: I can hear sounds and write short a words.

Name: _____



Say the name of each picture. Stretch out the word, and write it on the lines.

  _____ _____ _____	  _____ _____ _____	  _____ _____ _____
  _____ _____ _____	  _____ _____ _____	  _____ _____ _____
  _____ _____ _____	  _____ _____ _____	  _____ _____ _____

© Little Activities, 2017

KCC4c, 6, 7 : I can compare two sets.

Lesson 3.27 Practice Page #2

Name _____

Roll a die and draw a train with that many cubes. Roll again, and draw another train.



	_____ is less than _____
	_____ is less than _____
	_____ is more than _____
	_____ is more than _____

KCC4c, 6, 7 : I can compare two sets.

Exit Ticket 3.27

Name _____

Date _____

Draw a train with more cubes.

Draw a tower with fewer cubes.

_____ is more than _____.

_____ is less than _____.



KW1: I can state my opinion about the weather.

NAME: _____

DATE: _____

VALENTINE'S DAY

Large dashed rectangular box for drawing or writing.


Handwriting practice lines consisting of a solid top line, a dashed middle line, and a solid bottom line.




KW1: I can state my opinion about the weather.

Name _____

Opinion Writing



or



Do you like Skittles or M and M's?

I like


because

KR1: I can predict the end of the story.

name _____



Predictions



Draw a picture of what you predict will happen in this story.

What clues make you think this is what the story will be about?

KR9: I can make a text-to-self connection.



Text-to-Self Connection

Name: _____

Book Title: _____

The part in the story—


Reminds me of the time...





















Copyright © 2011 by Scholastic Teaching Resources

KRF2d: I can hear sounds and write short a words.

Name: _____











Say the name of each picture. Stretch out the word, and write it on the lines.

  _____ _____ _____	  _____ _____ _____	  _____ _____ _____
  _____ _____ _____	  _____ _____ _____	  _____ _____ _____
  _____ _____ _____	  _____ _____ _____	  _____ _____ _____

© 2016 AJ Press, 221

Lesson 28 Sprint

Name _____
Counting to 5

















 1 2 3 4 5	 1 2 3 4 5
 1 2 3 4 5	 1 2 3 4 5
 1 2 3 4 5	 1 2 3 4 5
 1 2 3 4 5	 1 2 3 4 5

KCC4c, 6, 7: I can visualize quantities to compare two numerals.

Lesson 3.28 Practice Page #1

Name _____

Visualize the number in Set A and Set B. Color the number that shows more.

Set A 	Set B 	Set A 	Set B 
Set A 	Set B 	Set A 	Set B 
Set A 	Set B 	Set A 	Set B 
Set A 	Set B 	Set A 	Set B 


KCC4c, 6, 7: I can visualize quantities to compare two numerals

Exit Ticket 3.28

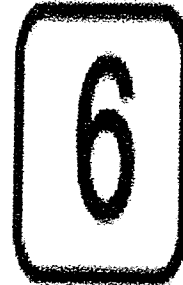
Name _____

Date _____

Set A



Set B



_____ is more than _____

_____ is less than _____